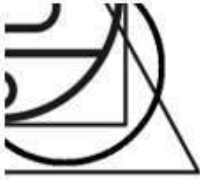


Q.25 Which of the following option figures will complete the pattern in the figure given below?

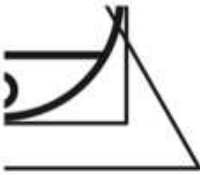


Ans

✗ 1.



✗ 2.



✗ 3.



✓ 4.



Question ID : 26433089629

Option 1 ID : 264330352020

Option 2 ID : 264330352018

Option 3 ID : 264330352019

Option 4 ID : 264330352017

Status : Answered

Chosen Option : 4

Section : Numerical Ability

Q.1 If 4 men or 8 women can do a work in 12 days, then in how many days can 9 men and 6 women do the same work?

Ans ✗ 1. 5

✓ 2. 4

✗ 3. 3

✗ 4. 6

Question ID : 264330104328

Option 1 ID : 264330409615

Option 2 ID : 264330409614

Option 3 ID : 264330409613

Option 4 ID : 264330409616

Status : Answered

Chosen Option : 2

Q.2 The selling price of 32 items is equal to the cost price of 45 items. What is the percentage of profit made on the sale of each item?

- Ans
- 1. 40.75%
 - 2. 40.5%
 - 3. 40.725%
 - 4. 40.625%

Question ID : 264330183824
Option 1 ID : 264330720972
Option 2 ID : 264330720973
Option 3 ID : 264330720974
Option 4 ID : 264330720975
Status : Answered
Chosen Option : 4

Q.3 A person divides his property so that his wife's share to his daughter's and the daughter's share to his son's, are both in the ratio 1 : 4. If the wife gets ₹5,000 less than the son, the value (in ₹) of the whole property is:

- Ans
- 1. 7,000
 - 2. 5,000
 - 3. 6,000
 - 4. 8,000

Question ID : 264330129427
Option 1 ID : 264330507076
Option 2 ID : 264330507074
Option 3 ID : 264330507075
Option 4 ID : 264330507077
Status : Answered
Chosen Option : 1

Q.4 The LCM of two numbers is 12 times their HCF. One of the numbers is 8 and the sum of the HCF and LCM is 52. What is the other number?

- Ans
- 1. 22
 - 2. 24
 - 3. 26
 - 4. 28

Question ID : 264330104149
Option 1 ID : 264330408897
Option 2 ID : 264330408898
Option 3 ID : 264330408899
Option 4 ID : 264330408900
Status : Answered
Chosen Option : 2

Q.5 In an equilateral triangle, each side is 'a' units. The altitude of this triangle is:

Ans

- ✓ 1. $\frac{a\sqrt{3}}{2}$
- ✗ 2. $\frac{4a}{3}$
- ✗ 3. $\frac{\sqrt{3} a}{\sqrt{2}}$
- ✗ 4. $\frac{3a^2}{4}$

Question ID : 264330104367

Option 1 ID : 264330409769

Option 2 ID : 264330409770

Option 3 ID : 264330409771

Option 4 ID : 264330409772

Status : Answered

Chosen Option : 1

Q.6 The inradius of a triangle is 7 cm and its area is 343 cm². The perimeter of the triangle is

Ans

- ✓ 1. 98 cm
- ✗ 2. 68 cm
- ✗ 3. 88 cm
- ✗ 4. 49 cm

Question ID : 264330119359

Option 1 ID : 264330467723

Option 2 ID : 264330467725

Option 3 ID : 264330467724

Option 4 ID : 264330467726

Status : Not Answered

Chosen Option : --

Q.7 A sum of ₹2,52,500 at the rate of 4.5% per annum for a period of 2.5 years will amount to how much (in ₹) if the money is invested at simple interest?

Ans

- ✗ 1. 2,75,906.50
- ✗ 2. 2,78,906.25
- ✗ 3. 2,82,906.25
- ✓ 4. 2,80,906.25

Question ID : 264330119932

Option 1 ID : 264330470005

Option 2 ID : 264330470004

Option 3 ID : 264330470003

Option 4 ID : 264330470006

Status : Answered

Chosen Option : 4

Q.8 In how many seconds will a 210 m long train, travelling at a speed of 97 km/h, come from behind and completely cross a 240 m long train travelling at 79 km/h in the same direction as that of the first train?

- Ans
- 1. 96
 - 2. 100
 - 3. 90
 - 4. 84

Question ID : 264330122848
Option 1 ID : 264330481461
Option 2 ID : 264330481462
Option 3 ID : 264330481460
Option 4 ID : 264330481459
Status : Answered
Chosen Option : 3

Q.9 The marked price of a book is ₹700 but the retailer gets a discount of 20%. If the retailer sells the book at marked price, then the profit percentage is:

- Ans
- 1. 20%
 - 2. 30%
 - 3. 25%
 - 4. 22%

Question ID : 264330130931
Option 1 ID : 264330512835
Option 2 ID : 264330512837
Option 3 ID : 264330512836
Option 4 ID : 264330512838
Status : Answered
Chosen Option : 3

Q.10 A person loses 18% of his money and after spending 87% of the remainder, he is left with ₹122. How much did he originally have? (Approximate value)

- Ans
- 1. ₹1,200
 - 2. ₹1,143.8
 - 3. ₹1,300
 - 4. ₹1,144.5

Question ID : 264330131828
Option 1 ID : 264330516411
Option 2 ID : 264330516414
Option 3 ID : 264330516413
Option 4 ID : 264330516412
Status : Answered
Chosen Option : 4

Q.11 The compound interest on a sum of ₹8,000 becomes ₹1,261 in 18 months. Find the rate of interest if interest is compounded half-yearly.

- Ans
- 1. 12%
 - 2. 20%
 - 3. 10%
 - 4. 8%

Question ID : 264330109256
Option 1 ID : 264330429302
Option 2 ID : 264330429304
Option 3 ID : 264330429301
Option 4 ID : 264330429303
Status : Answered
Chosen Option : 3

Q.12 Two wires, 18 m and 24 m long, are to be cut into pieces of equal length. Find the maximum length of each piece (in m).

- Ans
- 1. 12
 - 2. 18
 - 3. 8
 - 4. 6

Question ID : 264330118033
Option 1 ID : 264330463947
Option 2 ID : 264330463950
Option 3 ID : 264330463948
Option 4 ID : 264330463949
Status : Answered
Chosen Option : 4

Q.13 The average of 5 consecutive odd numbers is 63. Which of the following is the largest number among them?

- Ans
- 1. 65
 - 2. 69
 - 3. 67
 - 4. 71

Question ID : 264330129988
Option 1 ID : 264330509183
Option 2 ID : 264330509185
Option 3 ID : 264330509184
Option 4 ID : 264330509186
Status : Answered
Chosen Option : 3

Q.14 Find the greatest number that divides 90, 180 and 240 exactly.

- Ans
- 1. 20
 - 2. 60
 - 3. 15
 - 4. 30

Question ID : 264330109227
Option 1 ID : 264330429186
Option 2 ID : 264330429188
Option 3 ID : 264330429187
Option 4 ID : 264330429185
Status : Answered
Chosen Option : 4

Q.15 The base of a right-angle triangle is increased by 60%. How much its height should be decreased to retain the same area?

- Ans
- 1. 30%
 - 2. 45.2%
 - 3. 60%
 - 4. 37.5%

Question ID : 264330142526
Option 1 ID : 264330558383
Option 2 ID : 264330558385
Option 3 ID : 264330558386
Option 4 ID : 264330558384
Status : Answered
Chosen Option : 4

Section : Computer Proficiency

Q.1 In MS Excel 365, Which of the following is NOT a type of chart in MS Excel?

- Ans
- 1. Line chart
 - 2. Bar chart
 - 3. Pie chart
 - 4. Space chart

Question ID : 264330178560
Option 1 ID : 264330700267
Option 2 ID : 264330700268
Option 3 ID : 264330700269
Option 4 ID : 264330700270
Status : Answered
Chosen Option : 4

Q.2 Which of the following is used in MS Word 365 to change the case in a reverse way?

- Ans
- 1. Reverse case
 - 2. Change case
 - 3. Toggle case
 - 4. Alter case

Question ID : 264330176709
Option 1 ID : 264330693051
Option 2 ID : 264330693052
Option 3 ID : 264330693054
Option 4 ID : 264330693053
Status : Answered
Chosen Option : 1

Q.3 In Microsoft Excel 365, which option should be selected if you want to save a workbook as a macro-enabled workbook with a different file name and location?

- Ans
- 1. Save As
 - 2. Save a Copy
 - 3. Save Excel
 - 4. Save Workspace

Question ID : 264330178084
Option 1 ID : 264330698399
Option 2 ID : 264330698400
Option 3 ID : 264330698401
Option 4 ID : 264330698402
Status : Answered
Chosen Option : 1

Q.4 What icon is used for attaching a file or document to an email message?

- Ans
- 1. Pen icon
 - 2. Smiley icon
 - 3. Paper clip icon
 - 4. Trash can icon

Question ID : 264330182093
Option 1 ID : 264330714214
Option 2 ID : 264330714211
Option 3 ID : 264330714213
Option 4 ID : 264330714212
Status : Answered
Chosen Option : 3

Q.5 What is the main purpose of a search engine?

- Ans
- 1. Editing news articles
 - 2. Playing online games
 - 3. Sending emails
 - 4. Finding information on the internet

Question ID : 264330180666
Option 1 ID : 264330708633
Option 2 ID : 264330708631
Option 3 ID : 264330708632
Option 4 ID : 264330708634
Status : Answered
Chosen Option : 4

Q.6 Which icon is commonly used to undo the last action performed in MS Word 365?

- Ans
- 1. A pair of scissors
 - 2. A curved arrow pointing to the left
 - 3. A trash can
 - 4. A pencil

Question ID : 264330180862
Option 1 ID : 264330709411
Option 2 ID : 264330709412
Option 3 ID : 264330709414
Option 4 ID : 264330709413
Status : Answered
Chosen Option : 2

Q.7 In MS Excel 365, which of the following keyboard shortcut keys is used to insert a new row in MS-Excel 365?

- Ans**
- 1. Ctrl + Alt + n
 - 2. Ctrl + Alt + + (plus key)
 - 3. Ctrl + shift + n
 - 4. Ctrl + shift + + (plus key)

Question ID : 264330179439
Option 1 ID : 264330703762
Option 2 ID : 264330703761
Option 3 ID : 264330703759
Option 4 ID : 264330703760
Status : Answered
Chosen Option : 3

Q.8 How do we move the cursor to the beginning of a Microsoft Word 365 document?

- Ans**
- 1. By pressing 'Ctrl + End'
 - 2. By pressing 'Ctrl + Home'
 - 3. By pressing 'Ctrl + PgUp'
 - 4. By pressing 'Ctrl + PgDn'

Question ID : 264330182073
Option 1 ID : 264330714132
Option 2 ID : 264330714131
Option 3 ID : 264330714133
Option 4 ID : 264330714134
Status : Answered
Chosen Option : 2

Q.9 Which of the following groups within the Insert tab will help us create a table in Microsoft Word 365?

- Ans**
- 1. Tables
 - 2. Illustrations
 - 3. Pages
 - 4. Links

Question ID : 264330182066
Option 1 ID : 264330714104
Option 2 ID : 264330714105
Option 3 ID : 264330714103
Option 4 ID : 264330714106
Status : Answered
Chosen Option : 1

Q.10 What are the icons below the menu bar in a word processing application called?

- Ans**
- 1. Toolbar icons
 - 2. Shortcut icons
 - 3. Format icons
 - 4. Tool icons

Question ID : 264330173599
Option 1 ID : 264330680878
Option 2 ID : 264330680877
Option 3 ID : 264330680876
Option 4 ID : 264330680875
Status : Answered
Chosen Option : 3

Constable Executive Male and Female in Delhi Police Examination 2023

Roll Number	
Candidate Name	
Venue Name	IHNC Mahaveer Bazar
Exam Date	15/11/2023
Exam Time	9:00 AM - 10:30 AM
Subject	Constable Executive Male and Female in Delhi Police Examination 2023

Section : **General Knowledge**

Q.1 How many medals did India win in the International Shooting Sport Federation (ISSF) World Cup-2022, which was held in Cairo, Egypt?

- Ans
- 1. 5
 - 2. 4
 - 3. 7
 - 4. 6

Question ID : 264330113744
Option 1 ID : 264330447063
Option 2 ID : 264330447064
Option 3 ID : 264330447061
Option 4 ID : 264330447062
Status : **Not Answered**
Chosen Option : --

Q.2 Narthaki Nataraj, awarded with Padma Shri in 2019 is an Indian _____ dancer.

- Ans
- 1. Odissi
 - 2. Bharatanatyam
 - 3. Kathakali
 - 4. Kathak

Question ID : 26433094878
Option 1 ID : 264330372335
Option 2 ID : 264330372334
Option 3 ID : 264330372336
Option 4 ID : 264330372333
Status : **Not Answered**
Chosen Option : --

Q.3 The innermost sanctum of a Hindu temple where the idol of the main deity is placed is called:

- Ans
- 1. Garbhagriha
 - 2. Mandapa
 - 3. Pradakshina path
 - 4. Shikhara

Question ID : 26433072939
Option 1 ID : 264330285948
Option 2 ID : 264330285950
Option 3 ID : 264330285949
Option 4 ID : 264330285951
Status : **Answered**
Chosen Option : 1

Q.4 In which state of India from the following is the old bamboo drip irrigation technology still used in the agriculture?

- Ans
- 1. Maharashtra
 - 2. Chhattisgarh
 - 3. Meghalaya
 - 4. Telangana

Question ID : 264330182946
Option 1 ID : 264330717519
Option 2 ID : 264330717516
Option 3 ID : 264330717518
Option 4 ID : 264330717517
Status : Not Answered
Chosen Option : --

Q.5 Which Constitutional Amendment Act has replaced the collegium system of appointing judges to the Supreme Court and High Courts?

- Ans
- 1. 99th Amendment Act
 - 2. 65th Amendment Act
 - 3. 82nd Amendment Act
 - 4. 52nd Amendment Act

Question ID : 264330166153
Option 1 ID : 264330651682
Option 2 ID : 264330651680
Option 3 ID : 264330651681
Option 4 ID : 264330651679
Status : Answered
Chosen Option : 1

Q.6 Who led the English Forces in the Battle of Buxar?

- Ans
- 1. Hector Munro
 - 2. Sir Hugh Wheeler
 - 3. Henry Lawrence
 - 4. John Nicholson

Question ID : 264330171699
Option 1 ID : 264330673399
Option 2 ID : 264330673402
Option 3 ID : 264330673401
Option 4 ID : 264330673400
Status : Answered
Chosen Option : 1

Q.7 Under which Article of the Indian Constitution are Fundamental Duties mentioned?

- Ans
- 1. Article 50B
 - 2. Article 44C
 - 3. Article 51A
 - 4. Article 55D

Question ID : 264330114137
Option 1 ID : 264330448634
Option 2 ID : 264330448633
Option 3 ID : 264330448635
Option 4 ID : 264330448636
Status : Answered
Chosen Option : 3

Q.8 Which of the following Indian players has written the autobiography titled 'Ace Against Odds'?

- Ans
- 1. Saina Nehwal
 - 2. Maria Sharapova
 - 3. Monica Seles
 - 4. Sania Mirza

Question ID : 26433055355
Option 1 ID : 264330216404
Option 2 ID : 264330216405
Option 3 ID : 264330216407
Option 4 ID : 264330216406
Status : Answered
Chosen Option : 4

Q.9 The Ahaia Winter Festival is primarily organised by the North-Eastern state of _____ to promote tourism.

- Ans
- 1. Meghalaya
 - 2. Tripura
 - 3. Arunachal Pradesh
 - 4. Sikkim

Question ID : 264330182996
Option 1 ID : 264330717716
Option 2 ID : 264330717718
Option 3 ID : 264330717717
Option 4 ID : 264330717719
Status : Not Answered
Chosen Option : --

Q.10 Which of the following countries hosts the first para Asiad?

- Ans
- 1. South Korea
 - 2. China
 - 3. Japan
 - 4. India

Question ID : 264330132536
Option 1 ID : 264330519242
Option 2 ID : 264330519240
Option 3 ID : 264330519241
Option 4 ID : 264330519239
Status : Answered
Chosen Option : 2

Q.11 Who among the following Padma Bhushan awardee dancers was called to perform for the coronation festivities of Queen Elizabeth II?

- Ans
- 1. Birju Maharaj
 - 2. Kumari Kamala
 - 3. Yamini Krishnamurthy
 - 4. Alarmel Velli

Question ID : 264330112878
Option 1 ID : 264330443597
Option 2 ID : 264330443600
Option 3 ID : 264330443598
Option 4 ID : 264330443599
Status : Not Answered
Chosen Option : --

Q.12 Freedom of Conscience provided in Article 25 of the Constitution of India is strengthened by which of the following two articles?

- Ans 1. Article 27 and 28
 2. Article 27 and 29
 3. Article 26 and 28
 4. Article 24 and 28

Question ID : 264330110580
Option 1 ID : 264330434600
Option 2 ID : 264330434598
Option 3 ID : 264330434599
Option 4 ID : 264330434597
Status : Not Answered
Chosen Option : --

Q.13 The Article 350 (B) of the Indian Constitution deals with the .

- Ans 1. finance commission
 2. election commission
 3. special officer for linguistic minorities
 4. UPSC

Question ID : 26433089965
Option 1 ID : 264330353340
Option 2 ID : 264330353338
Option 3 ID : 264330353339
Option 4 ID : 264330353337
Status : Answered
Chosen Option : 3

Q.14 Who wrote the novel 'Train to Pakistan'?

- Ans 1. Vikram Seth
 2. Mulk Raj Anand
 3. Khushwant Singh
 4. Bhisham Sahni

Question ID : 26433064225
Option 1 ID : 264330251495
Option 2 ID : 264330251492
Option 3 ID : 264330251493
Option 4 ID : 264330251494
Status : Answered
Chosen Option : 3

Q.15 Which of the following union territories recorded the highest sex ratio at birth in India in 2020 as per annual report on vital statistics based on Civil Registration System Report?

- Ans 1. Jammu and Kashmir
 2. Ladakh
 3. Lakshadweep
 4. Chandigarh

Question ID : 264330177911
Option 1 ID : 264330697734
Option 2 ID : 264330697733
Option 3 ID : 264330697731
Option 4 ID : 264330697732
Status : Not Answered
Chosen Option : --

Q.16 The original Constitution contained 395 Articles divided into _____ parts.

Ans 1. 22

2. 19

3. 21

4. 24

Question ID : 264330134565

Option 1 ID : 264330527215

Option 2 ID : 264330527216

Option 3 ID : 264330527217

Option 4 ID : 264330527218

Status : Answered

Chosen Option : 1

Q.17 Norman Borlaug, known as the Father of Green Revolution for the world, belongs to which country?

Ans 1. US

2. New Zealand

3. Australia

4. Germany

Question ID : 26433054811

Option 1 ID : 264330214231

Option 2 ID : 264330214229

Option 3 ID : 264330214228

Option 4 ID : 264330214230

Status : Answered

Chosen Option : 1

Q.18 In which country was the Theosophical Society founded?

Ans 1. England

2. America

3. France

4. Japan

Question ID : 264330114050

Option 1 ID : 264330448286

Option 2 ID : 264330448288

Option 3 ID : 264330448285

Option 4 ID : 264330448287

Status : Answered

Chosen Option : 1

Q.19 What are the most common type of earthquakes?

Ans 1. Volcanic earthquakes

2. Seismic earthquakes

3. Reservoir earthquakes

4. Tectonic earthquakes

Question ID : 264330134900

Option 1 ID : 264330528535

Option 2 ID : 264330528538

Option 3 ID : 264330528536

Option 4 ID : 264330528537

Status : Answered

Chosen Option : 4

Q.20 Which government scheme's main aim is to 'transform rural poor youth into an economically independent and globally relevant workforce'?

- Ans
- 1. Shyama Prasad Mukherjee Rurban Mission
 - 2. National Career Service
 - 3. Deen Dayal Upadhyaya Grameen Kaushalya Yojana
 - 4. Deendayal Antyodaya Yojana- National Rural Livelihood Mission

Question ID : 264330109413
Option 1 ID : 264330429931
Option 2 ID : 264330429932
Option 3 ID : 264330429930
Option 4 ID : 264330429929
Status : Answered
Chosen Option : 3

Q.21 Who among the following personalities is an award-winning Mohiniyattam Dancer?

- Ans
- 1. Meenakshi Chitharanjan
 - 2. Vasundhara Doraswamy
 - 3. Neena Prasad
 - 4. Sutapa Talukdar

Question ID : 264330181386
Option 1 ID : 264330711467
Option 2 ID : 264330711469
Option 3 ID : 264330711468
Option 4 ID : 264330711470
Status : Not Answered
Chosen Option : --

Q.22 The scheme called Bringing Green Revolution to Eastern India is being implemented in how many eastern states?

- Ans
- 1. Four
 - 2. Seven
 - 3. Three
 - 4. Six

Question ID : 264330109401
Option 1 ID : 264330429882
Option 2 ID : 264330429884
Option 3 ID : 264330429881
Option 4 ID : 264330429883
Status : Answered
Chosen Option : 2

Q.23 According to Census of India, 2011 Which of the following is in the top three states with highest population of age 0-6 years?

- Ans
- 1. Maharashtra
 - 2. Assam
 - 3. Kerala
 - 4. Madhya Pradesh

Question ID : 264330119969
Option 1 ID : 264330470153
Option 2 ID : 264330470151
Option 3 ID : 264330470154
Option 4 ID : 264330470152
Status : Not Answered
Chosen Option : --

Q.24 India announced the NEP in 1991. NEP stands for _____ .

- Ans 1. New Economic Policy
 2. National Export Plan
 3. National Economic Policy
 4. New Economic Provision

Question ID : 264330109128
Option 1 ID : 264330428790
Option 2 ID : 264330428792
Option 3 ID : 264330428791
Option 4 ID : 264330428789
Status : Answered
Chosen Option : 3

Q.25 Shambhu Maharaj was conferred the Sangeet Natak Akademi Fellowship for which form of dance?

- Ans 1. Kuchipudi
 2. Kathak
 3. Bharatanatyam
 4. Manipuri

Question ID : 26433074870
Option 1 ID : 264330293569
Option 2 ID : 264330293570
Option 3 ID : 264330293571
Option 4 ID : 264330293568
Status : Answered
Chosen Option : 2

Q.26 Gross national product is the total market value of all final goods and services produced by _____ .

- Ans 1. nationals and NRIs of a country during a period of five years
 2. Country's residents over a period of time
 3. national and foreigners during a period of two years
 4. nationals of a country during a period of five year

Question ID : 264330120880
Option 1 ID : 264330473737
Option 2 ID : 264330473735
Option 3 ID : 264330473736
Option 4 ID : 264330473738
Status : Answered
Chosen Option : 2

Q.27 At which Olympic Games did the Indian hockey men's team win its last gold medal?

- Ans 1. 2008
 2. 1980
 3. 2012
 4. 1996

Question ID : 264330110374
Option 1 ID : 264330433775
Option 2 ID : 264330433773
Option 3 ID : 264330433776
Option 4 ID : 264330433774
Status : Answered
Chosen Option : 2

Q.28 Select the most appropriate option with respect to the correctness of the following statements.

- a) India has great potential for the development of tidal energy.
- b) A geothermal energy plant has been commissioned at Manikaran in Himachal Pradesh.

Ans 1. Both a and b are correct

2. Only a is correct

3. Both a and b are incorrect

4. Only b is correct

Question ID : 264330179017

Option 1 ID : 264330702073

Option 2 ID : 264330702071

Option 3 ID : 264330702074

Option 4 ID : 264330702072

Status : Marked For Review

Chosen Option : 1

Q.29 Which of the following parts/structures is located at the topmost part of a Stupa?

Ans 1. Torana

2. Harmika

3. Vedika

4. Medhi

Question ID : 264330165323

Option 1 ID : 264330648374

Option 2 ID : 264330648371

Option 3 ID : 264330648373

Option 4 ID : 264330648372

Status : Answered

Chosen Option : 1

Q.30 Sandeep Das is famous for playing which of the following percussion instruments?

Ans 1. Pakhawaj

2. Tabla

3. Kanjira

4. Ghatam

Question ID : 264330111939

Option 1 ID : 264330439842

Option 2 ID : 264330439844

Option 3 ID : 264330439841

Option 4 ID : 264330439843

Status : Not Answered

Chosen Option : --

Q.31 Arakan and Shan are recognised ethnic groups of _____.

- Ans 1. Myanmar
 2. Sri Lanka
 3. Nepal
 4. Bhutan

Question ID : 264330177916
Option 1 ID : 264330697753
Option 2 ID : 264330697754
Option 3 ID : 264330697752
Option 4 ID : 264330697751
Status : Not Answered
Chosen Option : --

Q.32 In which of the following States was the 37th National Junior Athletics Championship held?

- Ans 1. Manipur
 2. Nagaland
 3. Assam
 4. Mizoram

Question ID : 264330113757
Option 1 ID : 264330447116
Option 2 ID : 264330447115
Option 3 ID : 264330447113
Option 4 ID : 264330447114
Status : Not Answered
Chosen Option : --

Q.33 Who among the following introduced binominal nomenclature of biological classification?

- Ans 1. Aristotle
 2. John Ray
 3. Charles Darwin
 4. Linnaeus

Question ID : 264330117587
Option 1 ID : 264330462374
Option 2 ID : 264330462375
Option 3 ID : 264330462376
Option 4 ID : 264330462373
Status : Not Answered
Chosen Option : --

Q.34 According to the PRS report of the Ministry of Agriculture, which two crops contributed to 78% of the country's food grain production till 2015-16?

- Ans 1. Maize and soybeans
 2. Millets and pulses
 3. Wheat and rice
 4. Pulses and sugarcane

Question ID : 264330120359
Option 1 ID : 264330471687
Option 2 ID : 264330471690
Option 3 ID : 264330471689
Option 4 ID : 264330471688
Status : Answered
Chosen Option : 3

Q.35 Coal, petroleum, and kerosene are examples of:

- Ans
- 1. coal fuels
 - 2. fossil fuels
 - 3. renewable resources
 - 4. clean energy resources

Question ID : 264330120955
Option 1 ID : 264330474035
Option 2 ID : 264330474037
Option 3 ID : 264330474036
Option 4 ID : 264330474038
Status : Answered
Chosen Option : 2

Q.36 Which Constitutional Amendment Act amended Article 38, enumerated under the Directive Principles of State Policy, and directed 'State to minimise inequalities in income, status, facilities and opportunities'?

- Ans
- 1. 43
 - 2. 42
 - 3. 44
 - 4. 40

Question ID : 264330119697
Option 1 ID : 264330469065
Option 2 ID : 264330469064
Option 3 ID : 264330469066
Option 4 ID : 264330469063
Status : Answered
Chosen Option : 2

Q.37 Why did Mother Teresa establish the 'Nirmal Hriday' Hospice?

- Ans
- 1. To provide a place where the terminally ill could die in peace
 - 2. To provide a home for orphan girl-children
 - 3. To provide a refuge for patients of leprosy
 - 4. To provide a home for young widows

Question ID : 264330119011
Option 1 ID : 264330466702
Option 2 ID : 264330466700
Option 3 ID : 264330466699
Option 4 ID : 264330466701
Status : Answered
Chosen Option : 3

Q.38 Which of the following correctly describes chemotherapy?

- Ans
- 1. Use of motivational advice as treatment
 - 2. Use of physical exercise for treatment
 - 3. Use of chemicals for therapeutic purposes
 - 4. Use of treatment for behavioural disorder

Question ID : 264330120017
Option 1 ID : 264330470325
Option 2 ID : 264330470324
Option 3 ID : 264330470323
Option 4 ID : 264330470326
Status : Answered
Chosen Option : 3

Q.39 Who was the first Indian to qualify for the covenanted civil services in India?

- Ans
- 1. Surendra Nath Banerjee
 - 2. Subhas Chandra Bose
 - 3. Satyendra Nath Tagore
 - 4. Rajagopalachari

Question ID : 264330120303
Option 1 ID : 264330471465
Option 2 ID : 264330471464
Option 3 ID : 264330471463
Option 4 ID : 264330471466
Status : Marked For Review
Chosen Option : 3

Q.40 What is the sanctioned judge strength of the Supreme Court excluding Chief Justice of India as per the Supreme Court (Number of Judges) Amendment Act, 2019?

- Ans
- 1. Ten
 - 2. Thirty-Three
 - 3. Twenty-One
 - 4. Twenty-Eight

Question ID : 264330183153
Option 1 ID : 264330718344
Option 2 ID : 264330718347
Option 3 ID : 264330718345
Option 4 ID : 264330718346
Status : Answered
Chosen Option : 2

Q.41 'Shaka' is the Indian term used for the people called Scythians, who originally belonged to _____.

- Ans
- 1. central Asia
 - 2. south-western Asia
 - 3. south-eastern Asia
 - 4. eastern Asia

Question ID : 264330118961
Option 1 ID : 264330466499
Option 2 ID : 264330466502
Option 3 ID : 264330466501
Option 4 ID : 264330466500
Status : Not Answered
Chosen Option : --

Q.42 Who was the leader of the southern military campaign of Alauddin Khalji?

- Ans
- 1. Aadham Khan
 - 2. Mahmud Ganva
 - 3. Malik Kafur
 - 4. Malik Sarvar

Question ID : 264330114034
Option 1 ID : 264330448223
Option 2 ID : 264330448221
Option 3 ID : 264330448224
Option 4 ID : 264330448222
Status : Answered
Chosen Option : 3

Q.43 मुगल अधिकारी अमल-गुजार मुख्य रूप से _____ का कार्य करते थे।

- Ans
- 1. शाही उद्यान की बागवानी
 - 2. सैनिकों की भर्ती
 - 3. भू-राजस्व एकत्रित करने
 - 4. शाही परिवार को सुरक्षा प्रदान करने

Question ID : 264330119487
Option 1 ID : 264330468232
Option 2 ID : 264330468231
Option 3 ID : 264330468234
Option 4 ID : 264330468233
Status : Not Answered
Chosen Option : --

Q.44 साकेवा एक धार्मिक त्योहार है जो _____ के किरात खंबू राई समुदाय द्वारा मनाया जाता है।

- Ans
- 1. मध्य प्रदेश
 - 2. सिक्किम
 - 3. झारखंड
 - 4. पंजाब

Question ID : 264330106218
Option 1 ID : 264330417173
Option 2 ID : 264330417175
Option 3 ID : 264330417174
Option 4 ID : 264330417176
Status : Not Answered
Chosen Option : --

Q.45 Who among the following is known as the tabla maestro?

- Ans
- 1. Ustad Bismillah Khan
 - 2. Ghulam Ali
 - 3. Ustad Amjad Ali Khan
 - 4. Ustad Zakir Hussain

Question ID : 264330116425
Option 1 ID : 264330457787
Option 2 ID : 264330457788
Option 3 ID : 264330457786
Option 4 ID : 264330457785
Status : Answered
Chosen Option : 4

Q.46 A solution contains 50 g of sugar in 450 g of water. Calculate the concentration in terms of mass by mass percentage of the solution.

- Ans
- 1. 0.1%
 - 2. 10%
 - 3. 1%
 - 4. 0.01%

Question ID : 264330173643
Option 1 ID : 264330681053
Option 2 ID : 264330681051
Option 3 ID : 264330681052
Option 4 ID : 264330681054
Status : Answered
Chosen Option : 2

Q.47 Which special symbol is commonly used by geologists to describe the orientation of rock beds, faults, fractures, cuestas, igneous dikes and sills?

- Ans
- 1. Scale Indicator
 - 2. Average directional index
 - 3. Strike and dip
 - 4. Compass rose

Question ID : 264330131020
Option 1 ID : 264330513191
Option 2 ID : 264330513192
Option 3 ID : 264330513193
Option 4 ID : 264330513194
Status : Answered
Chosen Option : 3

Q.48 Which of the following dynasties arose as a result of Alexander's invasion?

- Ans
- 1. Maurya
 - 2. Pandya
 - 3. Chalukya
 - 4. Pallava

Question ID : 264330120134
Option 1 ID : 264330470791
Option 2 ID : 264330470792
Option 3 ID : 264330470793
Option 4 ID : 264330470794
Status : Answered
Chosen Option : 1

Q.49 The phenomenon of liquidity trap is based upon which of the following aspects of demand for money?

- Ans
- 1. Precautionary
 - 2. Velocity of circulation
 - 3. Transaction
 - 4. Speculative

Question ID : 264330111567
Option 1 ID : 264330438354
Option 2 ID : 264330438356
Option 3 ID : 264330438353
Option 4 ID : 264330438355
Status : Not Answered
Chosen Option : --

Q.50 The process of removing government-imposed limits or impediments is known as:

- Ans
- 1. liberalisation
 - 2. financial investments
 - 3. privatisation
 - 4. globalisation

Question ID : 264330110191
Option 1 ID : 264330433044
Option 2 ID : 264330433041
Option 3 ID : 264330433042
Option 4 ID : 264330433043
Status : Answered
Chosen Option : 1

Q.1 Study the given pattern carefully and select the number that can replace the question mark (?) in it.
 First row - 56, 16, 60
 Second row - 64, 18, 68
 Third row - 72, 20, ?
 (NOTE : Operations should be performed on the whole numbers, without breaking down the numbers into its constituent digits. Eg. 13 – Operations on 13 such as adding /subtracting/multiplying etc. to 13 can be performed. Breaking down 13 into 1 and 3 and then performing mathematical operations on 1 and 3 is not allowed)

- Ans
- 1. 75
 - 2. 74
 - 3. 76
 - 4. 78

Question ID : 26433087330
 Option 1 ID : 264330342957
 Option 2 ID : 264330342958
 Option 3 ID : 264330342960
 Option 4 ID : 264330342959
 Status : Answered
 Chosen Option : 3

Q.2 Select the option that represents the letters that, when sequentially placed from left to right in the blanks below, will complete the letter series.
 D _ A _ W _ S _ E W _ S A E _ D _ A E _

- Ans
- 1. SEDADWSW
 - 2. SEDADWES
 - 3. SEDADSSW
 - 4. SEADESW

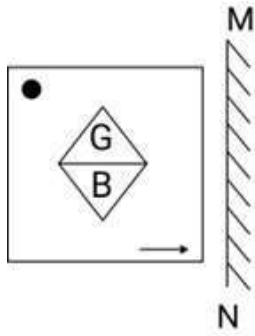
Question ID : 26433092540
 Option 1 ID : 264330363450
 Option 2 ID : 264330363452
 Option 3 ID : 264330363451
 Option 4 ID : 264330363449
 Status : Answered
 Chosen Option : 1

Q.3 Six students are sitting around a circular table facing the centre. Udit is an immediate neighbour of both Uday and Unnati. Umesh is sitting second to the right of Unnati. Utpal is sitting third to the left of Uday. Utsav is an immediate neighbour of both Umesh and Uday. Who is an immediate neighbour of both Umesh and Unnati?

- Ans
- 1. Utpal
 - 2. Uday
 - 3. Utsav
 - 4. Udit

Question ID : 264330110717
 Option 1 ID : 264330435146
 Option 2 ID : 264330435148
 Option 3 ID : 264330435145
 Option 4 ID : 264330435147
 Status : Answered
 Chosen Option : 1

Q.4 Select the correct mirror image of the given combination when the mirror is placed at 'MN' as shown below.



Ans

- ✗ 1. Option 1 shows a diamond with 'G' on top and 'B' on bottom. The dot is in the top-left corner, and the arrow points to the right.
- ✗ 2. Option 2 shows a diamond with 'G' on top and 'B' on bottom. The dot is in the bottom-left corner, and the arrow points to the right.
- ✗ 3. Option 3 shows a diamond with 'G' on top and 'B' on bottom. The dot is in the top-right corner, and the arrow points to the left.
- ✓ 4. Option 4 shows a diamond with 'G' on top and 'B' on bottom. The dot is in the top-right corner, and the arrow points to the left.

Question ID : 264330130769

Option 1 ID : 264330512188

Option 2 ID : 264330512189

Option 3 ID : 264330512187

Option 4 ID : 264330512190

Status : Answered

Chosen Option : 4

Q.5 Read the given statements and conclusions carefully. Assuming that the information given in the statements is true, even if it appears to be at variance with commonly known facts, decide which of the given conclusions logically follow(s) from the statements.

Statements:

Some stars are planets.

All stars are comets.

Conclusions:

I. Some comets are planets.

II. Some planets are stars.

- Ans**
- 1. Only conclusion I follows
 - 2. Only conclusion II follows
 - 3. Both conclusions I and II follow
 - 4. Neither conclusion I nor II follows

Question ID : 26433068294

Option 1 ID : 264330267688

Option 2 ID : 264330267689

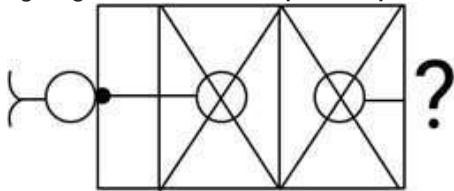
Option 3 ID : 264330267690

Option 4 ID : 264330267691

Status : Answered

Chosen Option : 3

Q.6 Select the figure from the given options that will replace the question mark (?) in the figure given below and complete the pattern.



Ans



Question ID : 26433011713

Option 1 ID : 264330438937

Option 2 ID : 264330438940

Option 3 ID : 264330438938

Option 4 ID : 264330438939

Status : Answered

Chosen Option : 1

Q.7 Which figure should replace the question mark (?) in the following series to continue the pattern?

L O S T	8 S O L	L 8 T S	O T 8 L	?
8 □ □	T O □ □	S		

Ans

1. 8 O T S
L □

2. L O T 8
S □

3. L O S T
8 □

4. L O T S
8 □

Question ID : 264330129615

Option 1 ID : 264330507828

Option 2 ID : 264330507826

Option 3 ID : 264330507827

Option 4 ID : 264330507829

Status : Answered

Chosen Option : 3

Q.8 14 is related to 27 following a certain logic. Following the same logic, 17 is related to 33. To which of the following is 24 related following the same logic?

Ans 1. 53

2. 47

3. 56

4. 50

Question ID : 264330178748

Option 1 ID : 264330701021

Option 2 ID : 264330701020

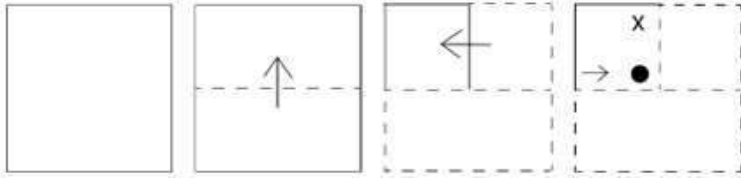
Option 3 ID : 264330701019

Option 4 ID : 264330701022

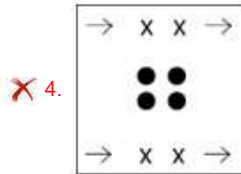
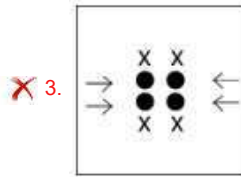
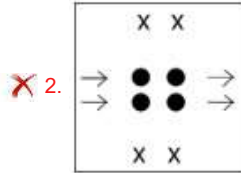
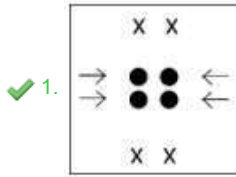
Status : Answered

Chosen Option : 2

Q.9 A paper is folded and cut as shown below. How will it appear when unfolded?



Ans



Question ID : 264330112988

Option 1 ID : 264330444038

Option 2 ID : 264330444040

Option 3 ID : 264330444039

Option 4 ID : 264330444037

Status : Answered

Chosen Option : 1

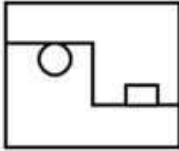
Adda247

Q.10 Select the option in which the given figure is embedded (rotation is NOT allowed).

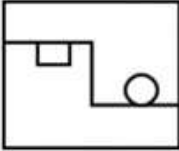


Ans

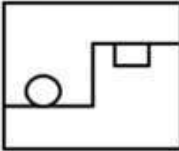
✗ 1.



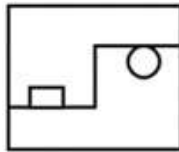
✗ 2.



✗ 3.



✓ 4.



Question ID : 264330101162

Option 1 ID : 264330397193

Option 2 ID : 264330397195

Option 3 ID : 264330397196


Option 4 ID : 264330397194

Status : Answered

Chosen Option : 4

Adda247

Q.11 Select the figure that will come next in the following figure series.



Ans

✓ 1.



✗ 2.



✗ 3.



✗ 4.

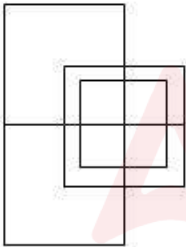


Question ID : 26433091695
Option 1 ID : 264330360148
Option 2 ID : 264330360145
Option 3 ID : 264330360146
Option 4 ID : 264330360147

Status : Answered

Chosen Option : 1

Q.12 How many squares are there in the following figure?



Ans ✗ 1. 10

✓ 2. 12

✗ 3. 14

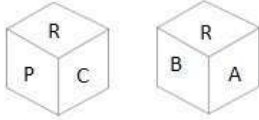
✗ 4. 15

Question ID : 26433076733
Option 1 ID : 264330300996
Option 2 ID : 264330300997
Option 3 ID : 264330300998
Option 4 ID : 264330300999

Status : Answered

Chosen Option : 2

Q.13 Six letters A, B, C, P, Q and R are written on different faces of a dice. Two positions of this dice are shown in the figure. Find the letter on the face opposite to C.



- Ans
- 1. B
 - 2. P
 - 3. A
 - 4. Q

Question ID : 264330109204

Option 1 ID : 264330429096

Option 2 ID : 264330429093

Option 3 ID : 264330429094

Option 4 ID : 264330429095

Status : Answered

Chosen Option : 3



Q.14 Which of the following option figures will complete the pattern in the figure given below?



Ans

✗ 1.



✓ 2.



✗ 3.



✗ 4.



Question ID : 26433080626

Option 1 ID : 264330316438

Option 2 ID : 264330316437

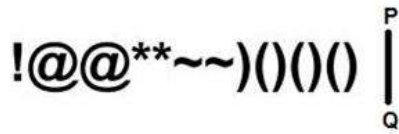
Option 3 ID : 264330316440

Option 4 ID : 264330316439

Status : Answered

Chosen Option : 2

Q.15 Select the correct mirror image of the given figure when the mirror is placed at PQ as shown below.



Ans

- ✗ 1.)()()~**@!
- ✗ 2. ()()(**@~!
- ✗ 3. ()()(**~~@!
- ✓ 4. ()()(~**@!

Question ID : 26433082020
 Option 1 ID : 264330321914
 Option 2 ID : 264330321916
 Option 3 ID : 264330321915
 Option 4 ID : 264330321913

Status : Answered

Chosen Option : 4

Q.16 Which two signs should be interchanged to make the given equation correct?
 $35 + 76 - 98 \div 3 \times 6 = 62$

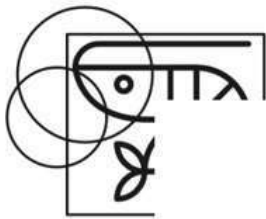
- Ans
- ✓ 1. + and ×
 - ✗ 2. = and ×
 - ✗ 3. + and ×
 - ✗ 4. - and +

Question ID : 26433090220
 Option 1 ID : 264330354359
 Option 2 ID : 264330354360
 Option 3 ID : 264330354358
 Option 4 ID : 264330354357

Status : Answered

Chosen Option : 1

Q.17 Which of the following option figures will complete the pattern in the figure given below?



Ans

✗ 1.



✓ 2.



✗ 3.



✗ 4.



Question ID : 26433080630

Option 1 ID : 264330316454

Option 2 ID : 264330316453

Option 3 ID : 264330316455

Option 4 ID : 264330316456

Status : Answered

Chosen Option : 2

Q.18 Which figure should replace the question mark (?) if the following series were to be continued?

X	S	S	D	D	S	S	↑	↑	S	?
2		X		2		D		2		
T	A	A	2	X	A	A	2	D	A	

Ans

✓ 1.

S	N
↑	
A	2

✗ 2.

S	2
↑	
A	D

✗ 3.

S	D
↑	
A	2

✗ 4.

S	N
A	
2	D

Question ID : 264330103897

Option 1 ID : 264330407889

Option 2 ID : 264330407890

Option 3 ID : 264330407891

Option 4 ID : 264330407892

Status : Answered

Chosen Option : 1

Q.19 Select the number from among the given options that can replace the question mark (?) in the following series.

3, 21, 57, 129, 273, ?

Ans ✗ 1. 234

✓ 2. 561

✗ 3. 456

✗ 4. 345

Question ID : 264330109768

Option 1 ID : 264330431349

Option 2 ID : 264330431352

Option 3 ID : 264330431351

Option 4 ID : 264330431350

Status : Answered

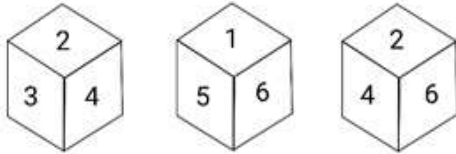
Chosen Option : 2

Q.20 In a code language, if MUSIC is coded as 13-21-19-9-3 and BAND is coded as 2-1-14-4, then how will HARMONIUM be coded?

- Ans
- 1. 7-25-16-12-14-13-8-19-12
 - 2. 8-1-18-13-15-14-9-21-13
 - 3. 7-26-17-12-14-13-8-20-12
 - 4. 8-2-19-12-15-14-9-20-12

Question ID : 26433089481
Option 1 ID : 264330351428
Option 2 ID : 264330351426
Option 3 ID : 264330351427
Option 4 ID : 264330351425
Status : Answered
Chosen Option : 2

Q.21 Three different positions of the same dice are shown. Find the number on the face opposite the face showing '3'.



- Ans
- 1. 2
 - 2. 4
 - 3. 5
 - 4. 6

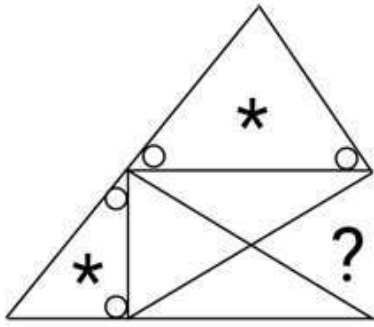
Question ID : 264330116955
Option 1 ID : 264330459901
Option 2 ID : 264330459902
Option 3 ID : 264330459903
Option 4 ID : 264330459904
Status : Answered
Chosen Option : 4

Q.22 Select the option that is related to the third word in the same way as the second word is related to the first word. (The words must be considered as meaningful English words and must NOT be related to each other based on the number of letters/number of consonants/vowels in the word)
Norway: Oslo:: Iran:?

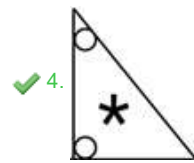
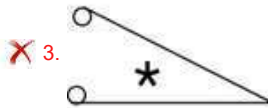
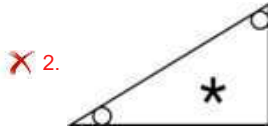
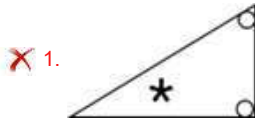
- Ans
- 1. Baghdad
 - 2. Moscow
 - 3. Tehran
 - 4. Madrid

Question ID : 26433069165
Option 1 ID : 264330271173
Option 2 ID : 264330271172
Option 3 ID : 264330271174
Option 4 ID : 264330271175
Status : Answered
Chosen Option : 3

Q.23 Select the figure from the given options that will replace the question mark (?) in the figure given below to complete the pattern.



Ans



Question ID : 264330116610

Option 1 ID : 264330458525

Option 2 ID : 264330458527

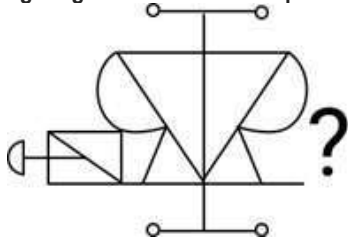
Option 3 ID : 264330458528

Option 4 ID : 264330458526

Status : Answered

Chosen Option : 4

Q.24 Select the figure from the given options that will replace the question mark (?) in the figure given below and complete the pattern.



Ans

- ✓ 1.
- ✗ 2.
- ✗ 3.
- ✗ 4.

Question ID : 264330111716

Option 1 ID : 264330438951

Option 2 ID : 264330438950

Option 3 ID : 264330438949

Option 4 ID : 264330438952

Status : Answered

Chosen Option : 1

Q.25 If A denotes '+', B denotes '×', C denotes '-', and D denotes '÷', then what will come in place of '?' in the following equation?
24 D (1 A 7) C 2 A 7 B 12 B (5 C 4) = ?

- Ans
- ✗ 1. 96
 - ✓ 2. 85
 - ✗ 3. 88
 - ✗ 4. 83

Question ID : 26433081676

Option 1 ID : 264330320538

Option 2 ID : 264330320540

Option 3 ID : 264330320537

Option 4 ID : 264330320539

Status : Answered

Chosen Option : 2

Section : Numerical Ability

Q.1 A certain sum is lent on simple interest at 4% p.a. for 3 years, 8% p.a. for the next 4 years, and 12% p.a. beyond 7 years. If for a period of 11 years, the simple interest obtained is ₹27,600, the sum is (in ₹):

- Ans
- ✗ 1. 28,000
 - ✗ 2. 25,000
 - ✓ 3. 30,000
 - ✗ 4. 32,000

Question ID : 264330119417

Option 1 ID : 264330467955

Option 2 ID : 264330467958

Option 3 ID : 264330467957

Option 4 ID : 264330467956

Status : Answered

Chosen Option : 3

Q.2 A sum of ₹66,550 is taken on loan. This is to be paid back in two equal instalments. If the rate of interest is 20% compounded annually, find the value of each instalment.

- Ans
- 1. ₹42,560
 - 2. ₹44,550
 - 3. ₹40,550
 - 4. ₹43,560

Question ID : 264330104313
Option 1 ID : 264330409554
Option 2 ID : 264330409556
Option 3 ID : 264330409553
Option 4 ID : 264330409555
Status : Answered
Chosen Option : 4

Q.3 The price of an item is to be increased by 25% in two years. This year, the price increased to ₹140 from ₹120. What is the percentage increase in the next year?

- Ans
- 1. 4.71%
 - 2. 4.17%
 - 3. 7.14%
 - 4. 7.41%

Question ID : 264330126101
Option 1 ID : 264330494076
Option 2 ID : 264330494077
Option 3 ID : 264330494079
Option 4 ID : 264330494078
Status : Answered
Chosen Option : 3

Q.4 What is the diameter of a sphere that has a surface area of $2500\pi \text{ cm}^2$?

- Ans
- 1. 40 cm
 - 2. 35 cm
 - 3. 50 cm
 - 4. 25 cm

Question ID : 264330111491
Option 1 ID : 264330438051
Option 2 ID : 264330438050
Option 3 ID : 264330438052
Option 4 ID : 264330438049
Status : Answered
Chosen Option : 3

Q.5 The price of an article has been reduced by 20%. In order to restore the original price, the new price must be increased by:

- Ans
- 1. 25%
 - 2. 20%
 - 3. 22%
 - 4. 28%

Question ID : 264330104160
Option 1 ID : 264330408943
Option 2 ID : 264330408941
Option 3 ID : 264330408942
Option 4 ID : 264330408944
Status : Answered
Chosen Option : 1

Q.6 Which of the following is the smallest ratio?

- Ans 1. 15 : 20
 2. 7 : 21
 3. 21 : 25
 4. 17 : 25

Question ID : 264330119337
Option 1 ID : 264330467636
Option 2 ID : 264330467635
Option 3 ID : 264330467637
Option 4 ID : 264330467638
Status : Answered
Chosen Option : 2

Q.7 If Malay buys guavas at ₹300 per kg and sells them at ₹25 per 100 gm., then he will have (rounded off to 2 decimal places):

- Ans 1. a loss of 16.67%
 2. a profit of 25.25%
 3. a loss of 25.25%
 4. a profit of 16.67%

Question ID : 264330112427
Option 1 ID : 264330441794
Option 2 ID : 264330441795
Option 3 ID : 264330441796
Option 4 ID : 264330441793
Status : Answered
Chosen Option : 1

Q.8 If 25 people, working 15 hours a day, can complete 5 units of work in 8 days, then how many days will be required by 12 people to complete 10 units of work, working 20 hours a day?

- Ans 1. 25 days
 2. 24 days
 3. 20 days
 4. 22 days

Question ID : 264330182576
Option 1 ID : 264330716098
Option 2 ID : 264330716097
Option 3 ID : 264330716095
Option 4 ID : 264330716096
Status : Answered
Chosen Option : 1

Q.9 If a solid sphere of radius 20 cm is moulded into 8 solid spherical balls of equal radius, then the radius of each ball will be: (Where $\pi = \frac{22}{7}$)

- Ans 1. 10 cm
 2. 12.5 cm
 3. 11.5 cm
 4. 11 cm

Question ID : 264330118139
Option 1 ID : 264330464372
Option 2 ID : 264330464374
Option 3 ID : 264330464371
Option 4 ID : 264330464373
Status : Answered
Chosen Option : 1

Q.10 Meera made a profit of 5% by selling a bag after offering a discount of 10%. If the marked price of bag is ₹1,050, find its cost price.

- Ans 1. ₹850
 2. ₹900
 3. ₹508
 4. ₹1,000

Question ID : 264330118127
Option 1 ID : 264330464323
Option 2 ID : 264330464325
Option 3 ID : 264330464326
Option 4 ID : 264330464324
Status : Answered
Chosen Option : 2

Q.11 What is the sum of the square of the prime numbers between 20 and 30?

- Ans 1. 1500
 2. 1370
 3. 1290
 4. 1276

Question ID : 264330104347
Option 1 ID : 264330409690
Option 2 ID : 264330409692
Option 3 ID : 264330409689
Option 4 ID : 264330409691
Status : Answered
Chosen Option : 2

Q.12 The average of $1^2, 2^2, 3^2, 4^2, 5^2, 6^2, 7^2, 8^2$ and 9^2 is:

- Ans
- ✓ 1. $31\frac{2}{3}$
 - ✗ 2. $32\frac{1}{3}$
 - ✗ 3. $34\frac{2}{3}$
 - ✗ 4. $33\frac{1}{3}$

Question ID : 264330126169
Option 1 ID : 264330494349
Option 2 ID : 264330494350
Option 3 ID : 264330494351
Option 4 ID : 264330494348
Status : Answered
Chosen Option : 1

Q.13 What will be the least common multiple of four numbers 15, 35, 42 and 72?

- Ans
- ✗ 1. 2550
 - ✗ 2. 2050
 - ✓ 3. 2520
 - ✗ 4. 2025

Question ID : 264330103916
Option 1 ID : 264330407966
Option 2 ID : 264330407968
Option 3 ID : 264330407967
Option 4 ID : 264330407965
Status : Answered
Chosen Option : 3

Q.14 A train approaches a tunnel MN. Inside the tunnel is a dog located at a point that is $\frac{2}{5}$ of the distance MN measured from the entrance M. When the train whistles, the dog runs. If the dog moves towards the entrance of the tunnel M, the train catches the dog exactly at the entrance M. If the dog moves towards the exit N, the train catches the dog exactly at the exit N. Find the ratio of the speed of the dog to that of the train?

- Ans
- ✗ 1. 5 : 1
 - ✗ 2. 2 : 1
 - ✗ 3. 1 : 2
 - ✓ 4. 1 : 5

Question ID : 264330106349
Option 1 ID : 264330417697
Option 2 ID : 264330417700
Option 3 ID : 264330417699
Option 4 ID : 264330417698
Status : Answered
Chosen Option : 4

Q.15 The highest common factor (HCF) of 256, 136 and 436 is _____.

- Ans
- 1. 2
 - 2. 4
 - 3. 8
 - 4. 12

Question ID : 264330112056
Option 1 ID : 264330440309
Option 2 ID : 264330440310
Option 3 ID : 264330440311
Option 4 ID : 264330440312
Status : Answered
Chosen Option : 2

Section : Computer Proficiency

Q.1 Which text alignment option in Microsoft Word 365 aligns text along the left margin?

- Ans
- 1. Center Align
 - 2. Left Align
 - 3. Right Align
 - 4. Justify

Question ID : 264330180729
Option 1 ID : 264330708885
Option 2 ID : 264330708883
Option 3 ID : 264330708884
Option 4 ID : 264330708886
Status : Answered
Chosen Option : 2

Q.2 What action should be taken to add a new row or column in a spreadsheet?

- Ans
- 1. Right-click on an existing row or column and select 'Insert' from the context menu.
 - 2. Use the 'Find and Replace' function to search for a specific cell, and then insert a new row or column using the results.
 - 3. Highlight a range of cells, right-click, and choose 'Delete' from the context menu to create space for the new row or column.
 - 4. Select a row or column, press the 'Ctrl+X' keyboard shortcut to cut it, and then press 'Ctrl+V' to paste it in the desired location.

Question ID : 264330173327
Option 1 ID : 264330679787
Option 2 ID : 264330679790
Option 3 ID : 264330679789
Option 4 ID : 264330679788
Status : Answered
Chosen Option : 1

Q.3 In Microsoft Excel 365, which tool should we use for creating or editing formulas in a worksheet?

- Ans
- 1. Formula bar
 - 2. Watch window
 - 3. Precedents
 - 4. Auditing toolbar

Question ID : 264330182055
Option 1 ID : 264330714059
Option 2 ID : 264330714062
Option 3 ID : 264330714060
Option 4 ID : 264330714061
Status : Answered
Chosen Option : 1

Q.4 In which of the following tabs in MS Word 365 is Bullets and Numbering present?

- Ans
- 1. Page layout
 - 2. Home
 - 3. Edit
 - 4. File

Question ID : 264330180419
Option 1 ID : 264330707646
Option 2 ID : 264330707644
Option 3 ID : 264330707645
Option 4 ID : 264330707643
Status : Answered
Chosen Option : 1

Q.5 What is the purpose of the CC field in an email?

- Ans
- 1. To include additional recipients who should be kept informed
 - 2. To request a read receipt from the recipient
 - 3. To encrypt the email for added security
 - 4. To indicate that the email is of high importance

Question ID : 264330174461
Option 1 ID : 264330684263
Option 2 ID : 264330684265
Option 3 ID : 264330684266
Option 4 ID : 264330684264
Status : Answered
Chosen Option : 1

Q.6 Which of the following shortcut key is used to insert a hyperlink in MS Word 365?

- Ans
- 1. Shift + H
 - 2. Ctrl + K
 - 3. Ctrl + H
 - 4. Shift + K

Question ID : 264330178571
Option 1 ID : 264330700314
Option 2 ID : 264330700311
Option 3 ID : 264330700312
Option 4 ID : 264330700313
Status : Answered
Chosen Option : 2

Q.7 What does the following icon resemble in MS Word 365 ?



- Ans
- 1. Justifying
 - 2. Right alignment
 - 3. Centre of text
 - 4. Left alignment

Question ID : 264330180451
Option 1 ID : 264330707774
Option 2 ID : 264330707771
Option 3 ID : 264330707773
Option 4 ID : 264330707772
Status : Answered
Chosen Option : 2

Q.8 What does the 'Orientation' option in the Page Setup menu in Microsoft Word 365 allow you to change?

- Ans
- 1. Text alignment
 - 2. Page layout (portrait or landscape)
 - 3. Font style
 - 4. Page size

Question ID : 264330180721
Option 1 ID : 264330708853
Option 2 ID : 264330708854
Option 3 ID : 264330708851
Option 4 ID : 264330708852
Status : Answered
Chosen Option : 2

Q.9 Which of the following is a private network that is typically open to external parties, such as business partners, suppliers, and key customers?

- Ans
- 1. Telnet
 - 2. Extranet
 - 3. Intranet
 - 4. Internet

Question ID : 264330178246
Option 1 ID : 264330699042
Option 2 ID : 264330699041
Option 3 ID : 264330699039
Option 4 ID : 264330699040
Status : Answered
Chosen Option : 1

Q.10 Which of the following is the correct way to sort a range of cells in ascending order in MS Excel 365?

- Ans**
- 1. Select the range of cells and press 'Ctrl + Shift + S'.
 - 2. Click on the 'Review' tab and select 'Sort'.
 - 3. Click on the 'OK' button.
 - 4. In the 'Sort' dialog box, select the 'Ascending' option in the 'Order' section.

Question ID : 264330178564

Option 1 ID : 264330700283

Option 2 ID : 264330700284

Option 3 ID : 264330700286

Option 4 ID : 264330700285

Status : Answered

Chosen Option : 4



Constable Executive Male and Female in Delhi Police Examination 2023

Roll Number	
Candidate Name	
Venue Name	Tech Testing Solution
Exam Date	15/11/2023
Exam Time	12:00 PM - 1:30 PM
Subject	Constable Executive Male and Female in Delhi Police Examination 2023

Section : General Knowledge

Q.1 Which of the following State Governments organises Surajkund Mela every year?

- Ans 1. Jammu
 2. Haryana
 3. Punjab
 4. Jharkhand

Question ID : 264330106206
Option 1 ID : 264330417126
Option 2 ID : 264330417127
Option 3 ID : 264330417125
Option 4 ID : 264330417128
Status : Answered
Chosen Option : 2

Q.2 The Wazir (minister) of _____ built Moth ki Masjid in Delhi.

- Ans 1. Alauddin Khalji
 2. Khizr Khan
 3. Sikandar Lodi
 4. Firuz Shah Tughluq

Question ID : 264330114076
Option 1 ID : 264330448391
Option 2 ID : 264330448389
Option 3 ID : 264330448390
Option 4 ID : 264330448392
Status : Answered
Chosen Option : 4

Q.3 Which is the most common tidal pattern?

- Ans 1. Mixed tides
 2. Diurnal tides
 3. Spring tides
 4. Semi-diurnal tides

Question ID : 264330116383
Option 1 ID : 264330457619
Option 2 ID : 264330457617
Option 3 ID : 264330457620
Option 4 ID : 264330457618
Status : Answered
Chosen Option : 3

Q.4 Which of the following dance forms belongs to the Vaishnava Monasteries of North East India?

- Ans
- 1. Odissi
 - 2. Mohiniattam
 - 3. Kuchipudi
 - 4. Sattriya

Question ID : 264330106181
Option 1 ID : 264330417028
Option 2 ID : 264330417027
Option 3 ID : 264330417025
Option 4 ID : 264330417026
Status : Answered
Chosen Option : 1

Q.5 How many tiers of government are mentioned in the Constitution of India?

- Ans
- 1. Two
 - 2. Four
 - 3. Three
 - 4. Five

Question ID : 264330133039
Option 1 ID : 264330521209
Option 2 ID : 264330521207
Option 3 ID : 264330521208
Option 4 ID : 264330521210
Status : Answered
Chosen Option : 1

Q.6 When did the Paris Agreement on Climate Change come into force (become effective from)?

- Ans
- 1. 22nd April 2016
 - 2. 4th November 2016
 - 3. 27th January 2017
 - 4. 12th December 2015

Question ID : 264330137310
Option 1 ID : 264330537868
Option 2 ID : 264330537869
Option 3 ID : 264330537870
Option 4 ID : 264330537867
Status : Not Answered
Chosen Option : --

Q.7 Who among the following is associated with the Mridangam instrument?

- Ans
- 1. Zarin S Sharma
 - 2. Hari Prasad Chaurasia
 - 3. Palghat Mani Iyer
 - 4. Ali Akbar Khan

Question ID : 264330111947
Option 1 ID : 264330439873
Option 2 ID : 264330439875
Option 3 ID : 264330439876
Option 4 ID : 264330439874
Status : Answered
Chosen Option : 4

Q.8 According to Census 2011, which group of states have the highest males literacy rates?

- Ans
- 1. Rajasthan and Bihar
 - 2. Kerala and Tamil Nadu
 - 3. Kerala and Mizoram
 - 4. Sikkim and Nagaland

Question ID : 264330119912
Option 1 ID : 264330469923
Option 2 ID : 264330469926
Option 3 ID : 264330469925
Option 4 ID : 264330469924
Status : Answered
Chosen Option : 3

Q.9 According to Census 2011, what was the population density of India?

- Ans
- 1. 382 persons
 - 2. 343 persons
 - 3. 372 persons
 - 4. 362 persons

Question ID : 264330138074
Option 1 ID : 264330540903
Option 2 ID : 264330540906
Option 3 ID : 264330540904
Option 4 ID : 264330540905
Status : Answered
Chosen Option : 1

Q.10 Which of the following statements is correct?

- a) The Indian desert lies towards the eastern margins of the Aravali Hills. It is an undulating sandy plain covered with sand dunes.
- b) This region has arid climate with low vegetation cover and streams appear during the rainy season.

- Ans
- 1. Only a is correct.
 - 2. Both a and b are correct.
 - 3. Only b is correct.
 - 4. Both a and b are incorrect.

Question ID : 264330178101
Option 1 ID : 264330698467
Option 2 ID : 264330698469
Option 3 ID : 264330698468
Option 4 ID : 264330698470
Status : Answered
Chosen Option : 2

Q.11 Who among the following was the first person in British India to get the scholarship of Indian Society of Oriental Arts, established in 1906?

- Ans
- 1. Jagdish Chandra Bose
 - 2. Subrahmanyam Chandrasekhar
 - 3. Nandalal Bose
 - 4. Prafulla Chandra Roy

Question ID : 264330120264
Option 1 ID : 264330471313
Option 2 ID : 264330471311
Option 3 ID : 264330471312
Option 4 ID : 264330471314
Status : Answered
Chosen Option : 4

Q.12 Which state has two headquarters of Indian Railway Zones?

- Ans
- 1. Rajasthan
 - 2. Uttar Pradesh
 - 3. Bihar
 - 4. Assam

Question ID : 264330182904
Option 1 ID : 264330717360
Option 2 ID : 264330717361
Option 3 ID : 264330717362
Option 4 ID : 264330717363
Status : Answered
Chosen Option : 2

Q.13 Untouchability is against which of the following fundamental rights?

- Ans
- 1. Right to freedom of religion
 - 2. Right to constitutional remedy
 - 3. Right to liberty
 - 4. Right to equality

Question ID : 264330109838
Option 1 ID : 264330431631
Option 2 ID : 264330431632
Option 3 ID : 264330431630
Option 4 ID : 264330431629
Status : Answered
Chosen Option : 4

Q.14 Elections under which act gave the control of seven provinces in 1937 to the Congress?

- Ans
- 1. Government of India Act, 1935
 - 2. Government of India Act, 1937
 - 3. Provincial Act, 1935
 - 4. Municipalities Act, 1935

Question ID : 264330120148
Option 1 ID : 264330470847
Option 2 ID : 264330470850
Option 3 ID : 264330470849
Option 4 ID : 264330470848
Status : Answered
Chosen Option : 3

Q.15 Turmeric powder is adulterated with:

- Ans 1. lead chromate
 2. zinc carbonate
 3. silicon oxide
 4. magnesium chloride

Question ID : 264330120973
Option 1 ID : 264330474109
Option 2 ID : 264330474108
Option 3 ID : 264330474107
Option 4 ID : 264330474110
Status : Answered
Chosen Option : 4

Q.16 In which king's honour and praise was the Prayag Prashasti written by the Sanskrit poet Harisena?

- Ans 1. Vikramaditya
 2. Chandragupta
 3. Samudragupta
 4. Ashoka

Question ID : 264330118958
Option 1 ID : 264330466490
Option 2 ID : 264330466487
Option 3 ID : 264330466489
Option 4 ID : 264330466488
Status : Answered
Chosen Option : 3

Q.17 When was the Bengal Partition Plan implemented?

- Ans 1. 10 September 1910
 2. 16 October 1905
 3. 7 August 1899
 4. 15 August 1915

Question ID : 264330114043
Option 1 ID : 264330448259
Option 2 ID : 264330448258
Option 3 ID : 264330448257
Option 4 ID : 264330448260
Status : Answered
Chosen Option : 2

Q.18 Gram Nyayalaya Act was enacted in the year _____.

- Ans 1. 2006
 2. 2008
 3. 2000
 4. 2004

Question ID : 264330120179
Option 1 ID : 264330470973
Option 2 ID : 264330470974
Option 3 ID : 264330470971
Option 4 ID : 264330470972
Status : Not Answered
Chosen Option : --

Q.19 Who became the first Indian woman to win two Olympic medals?

- Ans 1. Karnam Malleswari
 2. PV Sindhu
 3. Saina Nehwal
 4. Mary Kom

Question ID : 264330119262
Option 1 ID : 264330467338
Option 2 ID : 264330467336
Option 3 ID : 264330467335
Option 4 ID : 264330467337
Status : Answered
Chosen Option : 2

Q.20 The three-second rule is applicable for the game of _____.

- Ans 1. kho-kho
 2. badminton
 3. basketball
 4. kabaddi

Question ID : 264330110390
Option 1 ID : 264330433838
Option 2 ID : 264330433840
Option 3 ID : 264330433839
Option 4 ID : 264330433837
Status : Answered
Chosen Option : 1

Q.21 Which of the following is a merit of the parliamentary system?

- Ans 1. Autocracy
 2. Narrow representation
 3. Non responsible government
 4. Harmony between legislature and executive

Question ID : 264330177768
Option 1 ID : 264330697182
Option 2 ID : 264330697181
Option 3 ID : 264330697179
Option 4 ID : 264330697180
Status : Answered
Chosen Option : 4

Q.22 'Godaan', a famous novel, was authored by _____.

- Ans 1. Jaishankar Prasad
 2. Harivansh Rai Bachchan
 3. Suryakant Tripathi Nirala
 4. Munshi Premchand

Question ID : 26433064230
Option 1 ID : 264330251512
Option 2 ID : 264330251515
Option 3 ID : 264330251514
Option 4 ID : 264330251513
Status : Answered
Chosen Option : 4

Q.23 Expenditure incurred by residents during their foreign tour will be added to which component while calculating national income?

- Ans
- 1. Government final consumption expenditure
 - 2. Private final consumption expenditure
 - 3. Gross foreign capital formation
 - 4. Gross domestic capital formation

Question ID : 264330116514
Option 1 ID : 264330458141
Option 2 ID : 264330458143
Option 3 ID : 264330458144
Option 4 ID : 264330458142
Status : Answered
Chosen Option : 2

Q.24 FIH Asia Cup Men's Hockey 2022 was hosted by:

- Ans
- 1. Japan
 - 2. Pakistan
 - 3. Indonesia
 - 4. India

Question ID : 264330118896
Option 1 ID : 264330466242
Option 2 ID : 264330466241
Option 3 ID : 264330466240
Option 4 ID : 264330466239
Status : Answered
Chosen Option : 4

Q.25 Who was India's 12th Prime Minister?

- Ans
- 1. Inder Kumar Gujral
 - 2. Atal Bihari Vajpayee
 - 3. PV Narasimha Rao
 - 4. Manmohan Singh

Question ID : 264330110817
Option 1 ID : 264330435545
Option 2 ID : 264330435546
Option 3 ID : 264330435547
Option 4 ID : 264330435548
Status : Answered
Chosen Option : 1

Q.26 Name the Indian social reformer who played a crucial role in the passing of the Age of Consent Bill, 1891.

- Ans
- 1. Rabindranath Tagore
 - 2. C. Subramania Bharathi
 - 3. Behramji Malabari
 - 4. Ishwarchandra Vidyasagar

Question ID : 264330114115
Option 1 ID : 264330448546
Option 2 ID : 264330448548
Option 3 ID : 264330448547
Option 4 ID : 264330448545
Status : Not Answered
Chosen Option : --

Q.27 'Why I am an Atheist' is an autobiography of whom among the following Revolutionaries?

- Ans
- 1. Chandrashekhar Azad
 - 2. Suryakant Sen
 - 3. Ramprasad Bismil
 - 4. Bhagat Singh

Question ID : 26433064212
Option 1 ID : 264330251440
Option 2 ID : 264330251441
Option 3 ID : 264330251443
Option 4 ID : 264330251442
Status : Answered
Chosen Option : 4

Q.28 Who among the following was the captain of the Indian cricket team in the 1983 World Cup?

- Ans
- 1. Kapil Dev
 - 2. Mohinder Amarnath
 - 3. Dilip Vengsarkar
 - 4. Sunil Gavaskar

Question ID : 264330176921
Option 1 ID : 264330693880
Option 2 ID : 264330693882
Option 3 ID : 264330693879
Option 4 ID : 264330693881
Status : Answered
Chosen Option : 1

Q.29 Identify the artist who is NOT related to the musical instrument pakhwaj.

- Ans
- 1. Pandit Kishan Maharaj
 - 2. Ayodhya Prasad
 - 3. Gopal Das
 - 4. Totaram Sharma

Question ID : 264330111193
Option 1 ID : 264330436860
Option 2 ID : 264330436858
Option 3 ID : 264330436859
Option 4 ID : 264330436857
Status : Answered
Chosen Option : 1

Q.30 Which of the following temples is located in Uttarakhand?

- Ans
- 1. Neelkanth Mahadev
 - 2. Ranakpur
 - 3. Gomateshwara
 - 4. Kamakhya

Question ID : 264330111850
Option 1 ID : 264330439486
Option 2 ID : 264330439487
Option 3 ID : 264330439488
Option 4 ID : 264330439485
Status : Answered
Chosen Option : 1

Q.31 Sonal Mansingh is an eminent Indian classical dancer and a leading exponent of Bharatanatyam, Kuchipudi, Odissi and _____ .

- Ans
- 1. Satriya
 - 2. Kathakali
 - 3. Chhau
 - 4. Kathak

Question ID : 264330106198
Option 1 ID : 264330417096
Option 2 ID : 264330417095
Option 3 ID : 264330417094
Option 4 ID : 264330417093
Status : Answered
Chosen Option : 2

Q.32 By which name was the Head of the Panchayat or the Village Headman called in Mughal India?

- Ans
- 1. Samant
 - 2. Mahant
 - 3. Muqaddam
 - 4. Khoran

Question ID : 264330118989
Option 1 ID : 264330466613
Option 2 ID : 264330466614
Option 3 ID : 264330466612
Option 4 ID : 264330466611
Status : Answered
Chosen Option : 1

Q.33 Sodium hydrogen carbonate is called:

- Ans
- 1. Washing soda
 - 2. Baking soda
 - 3. Gypsum
 - 4. Plaster of Paris

Question ID : 264330177337
Option 1 ID : 264330695539
Option 2 ID : 264330695540
Option 3 ID : 264330695542
Option 4 ID : 264330695541
Status : Answered
Chosen Option : 1

Q.34 According to the Ministry of Commerce and Industry 2021-22, which of the following is the largest exported agricultural product from India?

- Ans
- 1. Rice
 - 2. Maize
 - 3. Spices
 - 4. Wheat

Question ID : 264330138066
Option 1 ID : 264330540873
Option 2 ID : 264330540871
Option 3 ID : 264330540874
Option 4 ID : 264330540872
Status : Answered
Chosen Option : 1

Q.35 Milk is good source of:

- Ans
- 1. phosphorous, iron, and protein
 - 2. calcium, magnesium, and fibre
 - 3. calcium, iron, and fibre
 - 4. calcium, phosphorous, and protein

Question ID : 264330120970
Option 1 ID : 264330474097
Option 2 ID : 264330474098
Option 3 ID : 264330474096
Option 4 ID : 264330474095
Status : Answered
Chosen Option : 3

Q.36 Which of the following Ministries introduced the Venture Capital Assistance Scheme?

- Ans
- 1. Ministry of Science and Technology
 - 2. Ministry of Micro, Small and Medium Enterprises
 - 3. Ministry of Agriculture and Farmers Welfare
 - 4. Ministry of Finance

Question ID : 264330116547
Option 1 ID : 264330458275
Option 2 ID : 264330458276
Option 3 ID : 264330458273
Option 4 ID : 264330458274
Status : Not Answered
Chosen Option : --

Q.37 Which form of art is celebrated at the Mando festival of Goa?

- Ans
- 1. Painting
 - 2. Literature
 - 3. Sports
 - 4. Music

Question ID : 264330132421
Option 1 ID : 264330518781
Option 2 ID : 264330518782
Option 3 ID : 264330518780
Option 4 ID : 264330518779
Status : Answered
Chosen Option : 4

Q.38 Economic reform measures in India were formally introduced in _____.

- Ans
- 1. 1990
 - 2. 1991
 - 3. 1980
 - 4. 1947

Question ID : 264330110021
Option 1 ID : 264330432364
Option 2 ID : 264330432361
Option 3 ID : 264330432363
Option 4 ID : 264330432362
Status : Answered
Chosen Option : 2

Q.39 Which of the following statements is correct about India for the period between 1950 and 1990?

- Ans**
- 1. The proportion of GDP contributed by agriculture and population engaged in the sector declined significantly.
 - 2. The proportion of GDP contributed by agriculture declined significantly but not the population engaged in the sector.
 - 3. Being an agricultural economy, the contribution of agricultural sector is not considerable for Indian economy
 - 4. The proportion of GDP contributed by agriculture increased significantly but not the population engaged in the sector.

Question ID : 264330120896

Option 1 ID : 264330473801

Option 2 ID : 264330473800

Option 3 ID : 264330473802

Option 4 ID : 264330473799

Status : Answered

Chosen Option : 2

Q.40 Which of the following Constitutional Amendment Acts added Fundamental Duties in the Indian Constitution?

- Ans**
- 1. 65th
 - 2. 74th
 - 3. 73rd
 - 4. 42nd

Question ID : 264330173482

Option 1 ID : 264330680408

Option 2 ID : 264330680410

Option 3 ID : 264330680409

Option 4 ID : 264330680407

Status : Answered

Chosen Option : 4

Q.41 According to the Census of India 2011, which group of states recorded the lowest male literacy rate?

- Ans**
- 1. Bihar and Arunachal Pradesh
 - 2. Rajasthan and Arunachal Pradesh
 - 3. Bihar and Rajasthan
 - 4. Arunachal Pradesh and Odisha

Question ID : 264330179512

Option 1 ID : 264330704050

Option 2 ID : 264330704048

Option 3 ID : 264330704047

Option 4 ID : 264330704049

Status : Answered

Chosen Option : 3

Q.42 The first chairman of the Planning Commission in India was _____.

- Ans
- 1. Jaiprakash Narayan
 - 2. Sriman Narayan
 - 3. Jawaharlal Nehru
 - 4. Radha Mohan Singh

Question ID : 264330109991
Option 1 ID : 264330432243
Option 2 ID : 264330432242
Option 3 ID : 264330432241
Option 4 ID : 264330432244
Status : Answered
Chosen Option : 3

Q.43 The Ghode Modni dance, to celebrate the victory of warriors, is performed in which of the following states of India?

- Ans
- 1. Goa
 - 2. West Bengal
 - 3. Karnataka
 - 4. Tamil Nadu

Question ID : 264330110427
Option 1 ID : 264330433986
Option 2 ID : 264330433988
Option 3 ID : 264330433985
Option 4 ID : 264330433987
Status : Not Answered
Chosen Option : --

Q.44 The Charminar was constructed by which of the following dynasties?

- Ans
- 1. Pandya
 - 2. Chera
 - 3. Chalukya
 - 4. Qutb Shahi

Question ID : 264330111851
Option 1 ID : 264330439491
Option 2 ID : 264330439490
Option 3 ID : 264330439492
Option 4 ID : 264330439489
Status : Answered
Chosen Option : 4

Q.45 Net investment can be best expressed using which of the following elements?

- Ans
- 1. Net investment-Depreciation
 - 2. Depletion Value
 - 3. Replacement Cost
 - 4. Gross Investment-Depreciation

Question ID : 264330130661
Option 1 ID : 264330511756
Option 2 ID : 264330511758
Option 3 ID : 264330511757
Option 4 ID : 264330511755
Status : Answered
Chosen Option : 4

Q.46 What is the chemical formula of sodium nitrate?

- Ans
- 1. NaNH_3
 - 2. NaNO_4
 - 3. NaNO_3
 - 4. NaNO_2

Question ID : 264330173646
Option 1 ID : 264330681063
Option 2 ID : 264330681066
Option 3 ID : 264330681065
Option 4 ID : 264330681064
Status : Answered
Chosen Option : 3

Q.47 Geeta Mahalik won the Sangeet Natak Akademi Award for which form of dance?

- Ans
- 1. Odissi
 - 2. Kathakali
 - 3. Bharatanatyam
 - 4. Kuchipudi

Question ID : 26433074883
Option 1 ID : 264330293623
Option 2 ID : 264330293622
Option 3 ID : 264330293621
Option 4 ID : 264330293620
Status : Not Answered
Chosen Option : --

Q.48 'Mahatma Gandhi National Fellowship' ('MGNF') is a two-year academic programme that was launched by _____ in 2020 as part of the SANKALP programme.

- Ans
- 1. IIT Madras
 - 2. IIM Ahmedabad
 - 3. IIT Delhi
 - 4. IIM Bangalore

Question ID : 264330111593
Option 1 ID : 264330438459
Option 2 ID : 264330438458
Option 3 ID : 264330438460
Option 4 ID : 264330438457
Status : Not Answered
Chosen Option : --

Q.49 Who among the following was one of the court poets of the King Samudragupta?

- Ans
- 1. Harisena
 - 2. Surdas
 - 3. Pragyajan
 - 4. Hariharan

Question ID : 264330118957
Option 1 ID : 264330466485
Option 2 ID : 264330466483
Option 3 ID : 264330466486
Option 4 ID : 264330466484
Status : Answered
Chosen Option : 1

Q.50 Which of the following Articles provides the minorities the right to establish and administer educational institutions of their choice?

- Ans
- 1. Article 31
 - 2. Article 30
 - 3. Article 29
 - 4. Article 28

Question ID : 264330120099
Option 1 ID : 264330470654
Option 2 ID : 264330470653
Option 3 ID : 264330470652
Option 4 ID : 264330470651
Status : Answered
Chosen Option : 4

Section : Reasoning

Q.1 Two statements are given followed by two conclusions numbered I and II. Assuming the statements to be true, even if they seem to be at variance with commonly known facts, decide which of the conclusions logically follow(s) from the statements.

Statements:

All hens are dogs.

All dogs are peacocks.

Conclusions:

I. All hens are peacocks.

II. All peacocks are dogs.

- Ans
- 1. Only conclusion II follows
 - 2. Only conclusion I follows
 - 3. Neither conclusion I nor II follows
 - 4. Both conclusions I and II follow

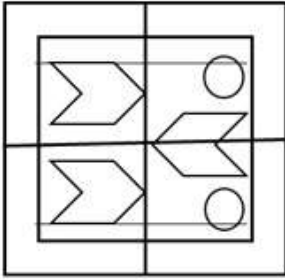
Question ID : 26433045342
Option 1 ID : 264330177804
Option 2 ID : 264330177803
Option 3 ID : 264330177806
Option 4 ID : 264330177805
Status : Answered
Chosen Option : 2

Q.2 In a code language, if PETROL is coded as ODSQNK and ENGINE is coded as DMFHMD, then how will VEHICLE be coded?

- Ans
- 1. UDGHBKD
 - 2. UDHGKBD
 - 3. WFIJDMF
 - 4. WDIHDKF

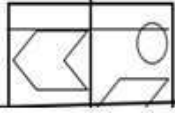
Question ID : 26433089488
Option 1 ID : 264330351454
Option 2 ID : 264330351456
Option 3 ID : 264330351453
Option 4 ID : 264330351455
Status : Answered
Chosen Option : 1

Q.3 Select the option figure which is embedded in the given figure as its part (rotation is NOT allowed).

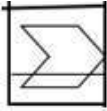


Ans

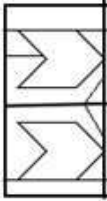
✗ 1.



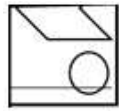
✗ 2.



✗ 3.



✓ 4.



Question ID : 264330116994

Option 1 ID : 264330460060

Option 2 ID : 264330460057

Option 3 ID : 264330460058

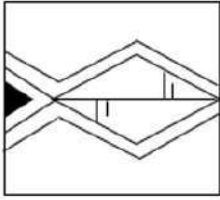
Option 4 ID : 264330460059

Status : Answered

Chosen Option : 4

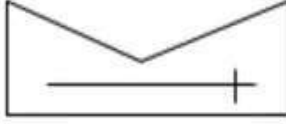
Adda247

Q.4 Select the option figure which is embedded in the given figure. (Rotation is NOT allowed).

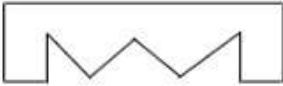


Ans

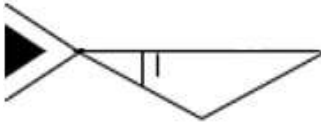
✗ 1.



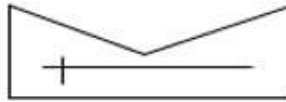
✗ 2.



✓ 3.



✗ 4.



Question ID : 2643308532

Option 1 ID : 264330335832

Option 2 ID : 264330335830

Option 3 ID : 264330335829

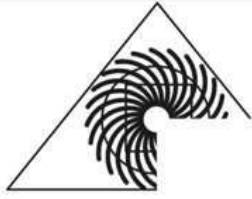
Option 4 ID : 264330335831

Status : Answered

Chosen Option : 3

Adda247

Q.5 Which of the following option figures will complete the pattern in the figure given below?



Ans

1.



2.



3.



4.



Question ID : 26433080625

Option 1 ID : 264330316436

Option 2 ID : 264330316434

Option 3 ID : 264330316433

Option 4 ID : 264330316435

Status : Answered

Chosen Option : 2

Adda247

Q.6 Which figure should replace the question mark (?) if the series were to be continued?

6	□	2	6	□	☆	8	□	
L		8	6		P			?
2	☆	☆	□	8	2	2	☆	

Ans

1.
2.
3.
4.

Question ID : 264330130792

Option 1 ID : 264330512280

Option 2 ID : 264330512279

Option 3 ID : 264330512282

Option 4 ID : 264330512281

Status : Not Answered

Chosen Option : --

Q.7 Which two signs should be interchanged to make the given equation correct?

$$98 - 49 \div 7 + 74 \times 55 = 3$$

- Ans
1. = and +
2. = and ×
3. = and ÷
4. = and -

Question ID : 26433085739

Option 1 ID : 264330336659

Option 2 ID : 264330336657

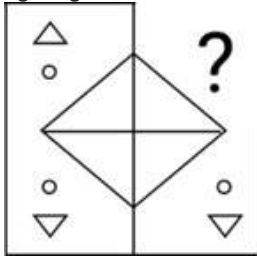
Option 3 ID : 264330336658

Option 4 ID : 264330336660

Status : Answered

Chosen Option : 3

Q.8 Select the figure from the given options that will replace the question mark (?) in the figure given below and complete the pattern.



Ans

- ✓ 1.
- ✗ 2.
- ✗ 3.
- ✗ 4.

Question ID : 264330111706
 Option 1 ID : 264330438909
 Option 2 ID : 264330438910
 Option 3 ID : 264330438912
 Option 4 ID : 264330438911
 Status : Answered
 Chosen Option : 1

Q.9 Select the correct mirror image of the given combination when the mirror is placed at MN as shown below.

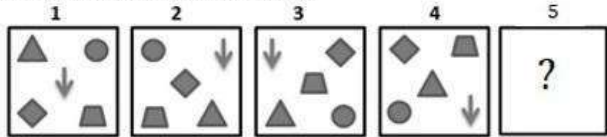


Ans

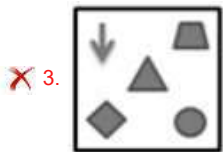
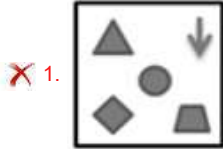
- ✗ 1. W 4 7 N h t 2
- ✗ 2. 2 t h N 4 7 w
- ✗ 3. 2 t 4 N 4 7 t 2
- ✓ 4. w 7 4 N h t 2

Question ID : 264330117004
 Option 1 ID : 264330460099
 Option 2 ID : 264330460097
 Option 3 ID : 264330460098
 Option 4 ID : 264330460100
 Status : Answered
 Chosen Option : 4

Q.10 Each of the following questions consists of 4 figures marked 1, 2, 3 and 4 called the Problem Figures followed by 4 other figures. Select a figure from amongst the Answer Figures which will continue the same series as established by the four Problem Figures.




Ans



Question ID : 264330110536
 Option 1 ID : 264330434421
 Option 2 ID : 264330434424
 Option 3 ID : 264330434423
 Option 4 ID : 264330434422

Status : Answered

Chosen Option : 2



Q.11 Which of the following option figures will complete the pattern in the figure given below?



Ans



Question ID : 26433089619

Option 1 ID : 264330351978

Option 2 ID : 264330351977

Option 3 ID : 264330351980

Option 4 ID : 264330351979

Status : Answered

Chosen Option : 4

Q.12 Select the option that is related to the fifth letter-cluster in the same way as the second letter-cluster is related to the first letter-cluster and the fourth letter-cluster is related to the third letter-cluster.

KEEP : SHHN :: HIDE : HGLK :: EXIT : ?

- Ans
- ✗ 1. XLAH
 - ✗ 2. WMBH
 - ✓ 3. WLAH
 - ✗ 4. WLAI

Question ID : 26433076453

Option 1 ID : 264330299878

Option 2 ID : 264330299877

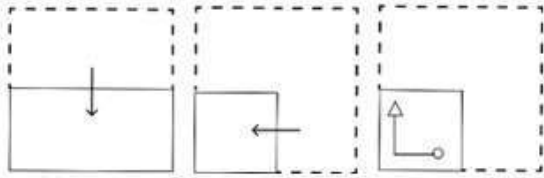
Option 3 ID : 264330299879

Option 4 ID : 264330299876

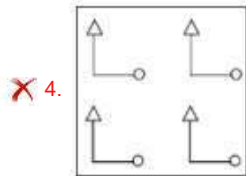
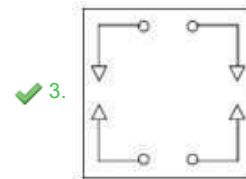
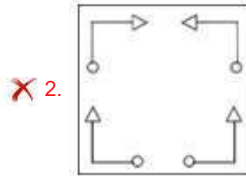
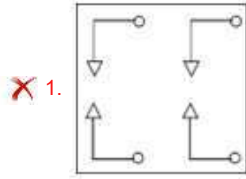
Status : Answered

Chosen Option : 3

Q.13 A paper is folded and cut as shown below. How will it appear when unfolded?



Ans



Question ID : 264330114714

Option 1 ID : 264330450944

Option 2 ID : 264330450942

Option 3 ID : 264330450941

Option 4 ID : 264330450943

Status : Answered

Chosen Option : 3

Q.14 Select the set in which the numbers are NOT related in the same way as are the numbers of the following sets.

(59, 236, 175), (24, 124, 98)

(NOTE: Operations should be performed on the whole numbers, without breaking down the numbers into its constituent digits.)

Ans ✗ 1. (22, 183, 159)

✓ 2. (21, 124, 108)

✗ 3. (64, 182, 116)

✗ 4. (16, 206, 188)

Question ID : 26433097244

Option 1 ID : 264330381675

Option 2 ID : 264330381673

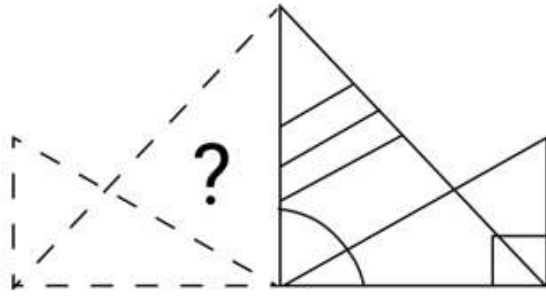
Option 3 ID : 264330381676

Option 4 ID : 264330381674

Status : Answered

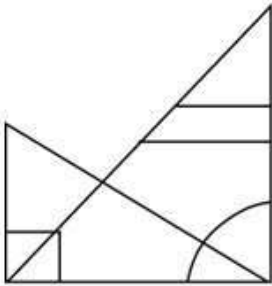
Chosen Option : 4

Q.15 Select the figure from the options that can replace the question mark (?) and complete the given pattern.

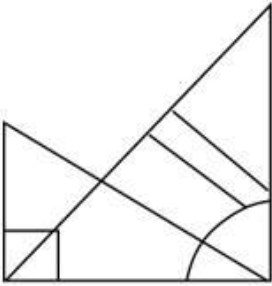


Ans

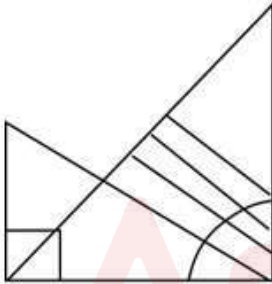
✗ 1.



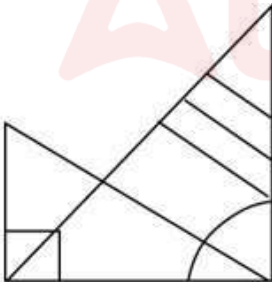
✗ 2.



✗ 3.



✓ 4.



Question ID : 264330106481

Option 1 ID : 264330418225

Option 2 ID : 264330418227

Option 3 ID : 264330418228

Option 4 ID : 264330418226

Status : Answered

Chosen Option : 4

Q.16 Select the correct mirror image of the given figure when the mirror is placed at MN as shown below.



- Ans
- 1. X45θ2TAU
 - 2. X4ζθ2TA∩
 - 3. X4ζθ2TAU
 - 4. X4ζθ2TAU

Question ID : 264330126676

Option 1 ID : 264330496377

Option 2 ID : 264330496376

Option 3 ID : 264330496379

Option 4 ID : 264330496378

Status : Answered

Chosen Option : 3

Q.17 Select the correct combination of mathematical signs to sequentially replace the * signs and to balance the given equation.
 $11 * 12 * 70 * 175 * 5 * 97$

- Ans
- 1. ×, +, -, +, =
 - 2. ×, -, +, +, =
 - 3. +, ×, -, +, =
 - 4. ×, -, +, =, +

Question ID : 26433076551

Option 1 ID : 264330300269

Option 2 ID : 264330300268

Option 3 ID : 264330300270

Option 4 ID : 264330300271

Status : Answered

Chosen Option : 2

Q.18 C, D, E, F, G and H were six women, sitting around a circular table, equidistant from each other, facing the centre. D and E were sitting immediately next to each other. F and H were sitting immediately next to each other. G was to the immediate right of C. E was to the immediate right of F. D was to the immediate left of C. Who among the following was sitting third to the left of D?

- Ans
- 1. F
 - 2. G
 - 3. C
 - 4. H

Question ID : 26433087010
Option 1 ID : 264330341681
Option 2 ID : 264330341683
Option 3 ID : 264330341684
Option 4 ID : 264330341682
Status : Answered
Chosen Option : 4

Q.19 Which of the following options will replace the question mark (?) in the given series?
13, 104, 52, 416, 208, ?, 832

- Ans
- 1. 1664
 - 2. 1158
 - 3. 790
 - 4. 690

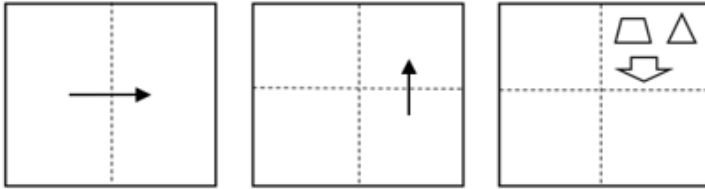
Question ID : 264330109435
Option 1 ID : 264330430020
Option 2 ID : 264330430018
Option 3 ID : 264330430019
Option 4 ID : 264330430017
Status : Answered
Chosen Option : 1

Q.20 Which of the following letter clusters will replace the question mark (?) in the given series to make it logically complete?
RTE, PVC, NXA, LZY, ?

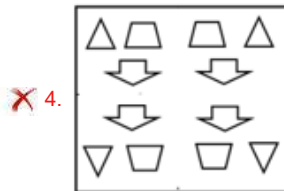
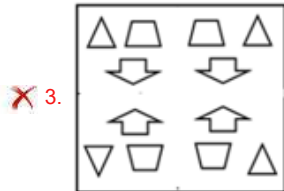
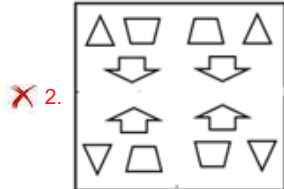
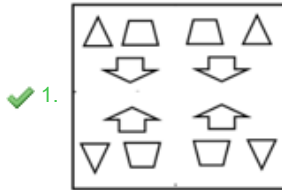
- Ans
- 1. JBW
 - 2. JBX
 - 3. KXV
 - 4. JBA

Question ID : 264330102230
Option 1 ID : 264330401385
Option 2 ID : 264330401387
Option 3 ID : 264330401388
Option 4 ID : 264330401386
Status : Answered
Chosen Option : 1

Q.21 A paper is folded and cut as shown below. How will it appear when unfolded?



Ans



Question ID : 264330113647

Option 1 ID : 264330446674

Option 2 ID : 264330446676

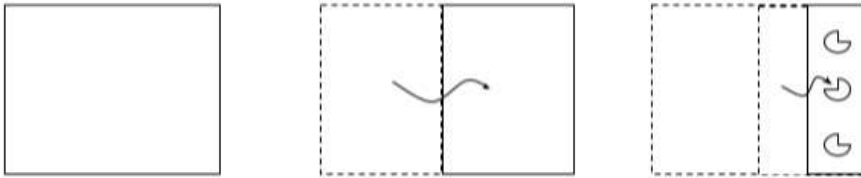
Option 3 ID : 264330446675

Option 4 ID : 264330446673

Status : Answered


Chosen Option : 1

Q.22 A paper is folded and cut as shown below. How will it appear when unfolded?




Ans

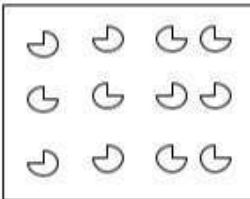
✓ 1.




✗ 2.



✗ 3.



✗ 4.



Question ID : 264330118716

Option 1 ID : 264330466117

Option 2 ID : 264330466116

Option 3 ID : 264330466118

Option 4 ID : 264330466115

Status : Answered

Chosen Option : 1

Q.23 Select the option that is related to the fourth term in the same way as the first term is related to the second term and the fifth term is related to the sixth term.

8 : 199 :: ? : 439 :: 5 : 82

Ans ✗ 1. 16

✗ 2. 14

✓ 3. 12

✗ 4. 10

Question ID : 26433059943

Option 1 ID : 264330234607

Option 2 ID : 264330234606

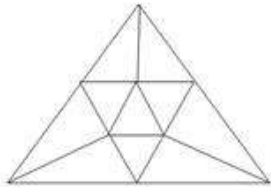
Option 3 ID : 264330234605

Option 4 ID : 264330234604

Status : Not Answered

Chosen Option : --

Q.24 How many triangles are there in the following figure?



- Ans
- 1. 18
 - 2. 12
 - 3. 15
 - 4. 10

Question ID : 26433076732
 Option 1 ID : 264330300995
 Option 2 ID : 264330300993
 Option 3 ID : 264330300994
 Option 4 ID : 264330300992
 Status : Answered
 Chosen Option : 3

Q.25 Which figure should replace the question mark (?) if the series were to be continued?

Z	L	T	3	L	T	3	O	
	O		Z		P		L	?
3		T	L	O	O	3	T	P

Ans

- 1.

P	T
	O
L	3
- 2.

O	P
	☆
3	T
- 3.

T	3
	☆
P	O
- 4.

O	P
	L
3	T

Question ID : 264330130812
 Option 1 ID : 264330512360
 Option 2 ID : 264330512361
 Option 3 ID : 264330512359
 Option 4 ID : 264330512362
 Status : Not Answered
 Chosen Option : --

Q.1 A hemispherical bowl is made of steel whose thickness is 2 cm. The inside radius of the bowl is 3 cm. Find the volume (in cm^3) of the steel used in making the bowl. (Rounded off to 2 decimal places)

(Take $\pi = \frac{22}{7}$)

- Ans**
- 1. 245.14
 - 2. 280.75
 - 3. 211.25
 - 4. 205.33

Question ID : 264330112432
Option 1 ID : 264330441815
Option 2 ID : 264330441813
Option 3 ID : 264330441816
Option 4 ID : 264330441814
Status : Answered
Chosen Option : 4

Q.2 What is the difference (in ₹) between the compound interest, when interest is compounded 6-monthly, and the simple interest on a sum of ₹10,000 for $1\frac{1}{2}$ years at 10% p.a.?

- Ans**
- 1. 75.26
 - 2. 76.25
 - 3. 71.65
 - 4. 72.65

Question ID : 264330103676
Option 1 ID : 264330407012
Option 2 ID : 264330407011
Option 3 ID : 264330407009
Option 4 ID : 264330407010
Status : Answered
Chosen Option : 2

Q.3 The smallest 4-digit prime number is:

- Ans**
- 1. 1009
 - 2. 1007
 - 3. 1003
 - 4. 1001

Question ID : 264330104479
Option 1 ID : 264330410219
Option 2 ID : 264330410220
Option 3 ID : 264330410218
Option 4 ID : 264330410217
Status : Answered
Chosen Option : 3

Q.4 14 men can complete a piece of work in 6 days, while 20 women can complete the same work in 8 days. 7 men started working on the job, and after working for 3 days all of them stopped working. How many women should be put on the job to complete the remaining work, if it is to be completed in 6 days?

Ans 1. 20

2. 25

3. 15

4. 30

Question ID : 264330103745

Option 1 ID : 264330407286

Option 2 ID : 264330407287

Option 3 ID : 264330407285

Option 4 ID : 264330407288

Status : Answered

Chosen Option : 1

Q.5 What is the greatest possible length (in cm) of scale to measure exactly the following lengths : 1 m, 20 cm, 3 m, 90 cm?

Ans 1. 30

2. 10

3. 45

4. 50

Question ID : 264330119496

Option 1 ID : 264330468267

Option 2 ID : 264330468269

Option 3 ID : 264330468268

Option 4 ID : 264330468270

Status : Answered

Chosen Option : 2

Q.6 By selling an article, a shopkeeper makes a profit of 30% of its selling price. Find his profit percentage.

Ans 1. 40%

2. $46\frac{1}{3}\%$

3. $42\frac{6}{7}\%$

4. 44%

Question ID : 264330111461

Option 1 ID : 264330437929

Option 2 ID : 264330437932

Option 3 ID : 264330437930

Option 4 ID : 264330437931

Status : Answered

Chosen Option : 3

Q.7 Find the total percentage change in the volume of a cuboid if its length and breadth are decreased by 10% and 20%, respectively, while its height is increased by 30%.

- Ans 1. 6.4%
 2. 8.2%
 3. 9.1%
 4. 8.6%

Question ID : 264330103698
Option 1 ID : 264330407097
Option 2 ID : 264330407098
Option 3 ID : 264330407099
Option 4 ID : 264330407100
Status : Answered
Chosen Option : 1

Q.8 Trader A offers a discount of 25% on the marked price for cash purchase. Trader B offers a trade discount of 20% and a cash discount of 4% on the same article marked at the same price as that of Trader A. If the discount given by Trader A is ₹360 more than the discount given by Trader B, then what is the marked price of the item (in rupees)?

- Ans 1. 19,000
 2. 18,000
 3. 30,000
 4. 20,000

Question ID : 264330131351
Option 1 ID : 264330514518
Option 2 ID : 264330514516
Option 3 ID : 264330514515
Option 4 ID : 264330514517
Status : Answered
Chosen Option : 4

Q.9 If the average of 8, 6, 14, 7 and x is 11, then the value of x is:

- Ans 1. 18
 2. 20
 3. 22
 4. 15

Question ID : 264330118197
Option 1 ID : 264330464604
Option 2 ID : 264330464605
Option 3 ID : 264330464606
Option 4 ID : 264330464603
Status : Answered
Chosen Option : 2

Q.10 A policeman chases a thief. The speed of the policeman and thief is 8 km/h and 7 km/h, respectively. If the policeman started 6 minutes late, after running how much distance will he be able to catch the thief?

- Ans
- 1. 5.5 km
 - 2. 5.6 km
 - 3. 6 km
 - 4. 6.3 km

Question ID : 264330183832
Option 1 ID : 264330721004
Option 2 ID : 264330721005
Option 3 ID : 264330721006
Option 4 ID : 264330721007
Status : Answered
Chosen Option : 2

Q.11 Simplify $1.6 + 1.2 \times \frac{1}{4} - \left\{ \frac{1}{5} + (1 - 0.8) \right\}$.

- Ans
- 1. 1.5
 - 2. 1.4
 - 3. 1.6
 - 4. 1.8

Question ID : 264330104216
Option 1 ID : 264330409167
Option 2 ID : 264330409168
Option 3 ID : 264330409168
Option 4 ID : 264330409165
Status : Answered
Chosen Option : 3

Q.12 A person took a loan of ₹1,200 on simple interest for as many years as the rate of interest. If he paid ₹432 as interest at the end of the loan period, what was the rate of interest per annum?

- Ans
- 1. 9%
 - 2. 8%
 - 3. 5%
 - 4. 6%

Question ID : 264330119420
Option 1 ID : 264330467967
Option 2 ID : 264330467969
Option 3 ID : 264330467968
Option 4 ID : 264330467970
Status : Answered
Chosen Option : 4

Q.13 एक सभा में 350 स्काउट्स को दूध परोसा गया। उनमें से प्रत्येक को 10 cm आधार त्रिज्या और 15 cm ऊँचाई वाले बेलनाकार गिलास में दूध दिया गया। यदि दाता ने ₹50 प्रति लीटर की दर से दूध खरीदा, तो कितनी राशि खर्च की गई? (बेलनाकार कागज के गिलास आदि की कीमत पर ध्यान न दें)

- Ans
- 1. ₹80,000
 - 2. ₹82,500
 - 3. ₹81,000
 - 4. ₹83,000

Question ID : 26433090273
Option 1 ID : 264330354569
Option 2 ID : 264330354571
Option 3 ID : 264330354570
Option 4 ID : 264330354572
Status : Answered
Chosen Option : 2

Q.14 Ajay's test marks in two subjects, Mathematics and Science, are in the ratio 9 : 13. If he got 16 marks more in Science than in Mathematics, what are his marks in Mathematics?

- Ans
- 1. 27
 - 2. 36
 - 3. 54
 - 4. 45

Question ID : 264330129425
Option 1 ID : 264330507068
Option 2 ID : 264330507067
Option 3 ID : 264330507069
Option 4 ID : 264330507066
Status : Answered
Chosen Option : 2

Q.15 A man loses 25% of his money. After spending 60% of the remaining money, he has ₹360 left. What is the amount of money (in ₹) he originally had?

- Ans
- 1. 1200
 - 2. 1962
 - 3. 654
 - 4. 2400

Question ID : 264330104238
Option 1 ID : 264330409254
Option 2 ID : 264330409253
Option 3 ID : 264330409255
Option 4 ID : 264330409256
Status : Answered
Chosen Option : 1

Q.1 Which of the following is an address on the world wide web that is used to access specific web resources and is the specific path to a resource?

- Ans
- 1. Hyperlink
 - 2. Web server
 - 3. Web pages
 - 4. Uniform resource locator

Question ID : 264330180809
Option 1 ID : 264330709199
Option 2 ID : 264330709202
Option 3 ID : 264330709201
Option 4 ID : 264330709200
Status : Answered
Chosen Option : 4

Q.2 The keyboard shortcut for opening a new document in Microsoft Word 365, while another document is already open, is _____.

- Ans
- 1. Ctrl + N
 - 2. Ctrl + Y
 - 3. Ctrl + S
 - 4. Ctrl + P

Question ID : 264330182072
Option 1 ID : 264330714128
Option 2 ID : 264330714130
Option 3 ID : 264330714127
Option 4 ID : 264330714129
Status : Answered
Chosen Option : 1

Q.3 Which of the following is NOT used to edit text in MS-Word 365?

- Ans
- 1. Making text as Bold/Italic
 - 2. Changing Font Color
 - 3. Making text as Left align
 - 4. Changing Font Style

Question ID : 264330178285
Option 1 ID : 264330699197
Option 2 ID : 264330699196
Option 3 ID : 264330699198
Option 4 ID : 264330699195
Status : Answered
Chosen Option : 3

Q.4 Which of the following tabs in MS Word 365, allows you to customise the page size in the Page Setup dialog box?

- Ans
- 1. Layout
 - 2. File
 - 3. Edit
 - 4. Insert

Question ID : 264330180429
Option 1 ID : 264330707685
Option 2 ID : 264330707684
Option 3 ID : 264330707683
Option 4 ID : 264330707686
Status : Answered
Chosen Option : 4

Q.5 While composing an email, what does the user have to write in the 'Subject' field?

- Ans**
- 1. A smiley or emoji to make the email more interesting
 - 2. The recipient's email address
 - 3. The main topic of an email message
 - 4. The sender's email address

Question ID : 264330182094
Option 1 ID : 264330714218
Option 2 ID : 264330714215
Option 3 ID : 264330714216
Option 4 ID : 264330714217
Status : Answered
Chosen Option : 3

Q.6 Which of the following document settings can be changed from the layout tab of MS word 365?

- Ans**
- 1. Change styles
 - 2. Margins
 - 3. Macros
 - 4. Spelling grammar

Question ID : 264330175982
Option 1 ID : 264330690226
Option 2 ID : 264330690223
Option 3 ID : 264330690224
Option 4 ID : 264330690225
Status : Answered
Chosen Option : 3

Q.7 Which Microsoft Excel 365, function is used to join or concatenate text strings from different cells?

- Ans**
- 1. CONCATENATE
 - 2. MERGE
 - 3. ADD
 - 4. JOIN

Question ID : 264330180692
Option 1 ID : 264330708735
Option 2 ID : 264330708737
Option 3 ID : 264330708736
Option 4 ID : 264330708738
Status : Answered
Chosen Option : 2

Q.8 Which of the following statements about autofitting the row height in MS Excel 365 is correct?

- Ans**
- 1. Single-clicking on the boundary between row headers will automatically adjust the row height to fit the content.
 - 2. Double-clicking on the boundary between row headers will automatically adjust the row height to fit the content.
 - 3. Double-clicking on the boundary between column headers will automatically adjust the column height to fit the content.
 - 4. Single-clicking on the boundary between column headers will automatically adjust the column height to fit the content.

Question ID : 264330180824

Option 1 ID : 264330709262

Option 2 ID : 264330709259

Option 3 ID : 264330709261

Option 4 ID : 264330709260

Status : Not Answered

Chosen Option : --

Q.9 In MS Excel 365, Which function from the following list is used to tally the quantity of empty cells within a specified cell range?

- Ans**
- 1. COUNTB()
 - 2. COUNTA()
 - 3. COUNT()
 - 4. COUNTBLANK()

Question ID : 264330179437

Option 1 ID : 264330703754

Option 2 ID : 264330703752

Option 3 ID : 264330703751

Option 4 ID : 264330703753

Status : Answered

Chosen Option : 2

Q.10 Which of the following is used to print the document in MS-Word 365?

- Ans**
- 1. File->print
 - 2. Design->print
 - 3. Home->print
 - 4. View->print

Question ID : 264330178279

Option 1 ID : 264330699171

Option 2 ID : 264330699173

Option 3 ID : 264330699172

Option 4 ID : 264330699174

Status : Answered

Chosen Option : 3

Constable Executive Male and Female in Delhi Police Examination 2023

Roll Number	
Candidate Name	
Venue Name	R K Digital Computer Centre 1
Exam Date	15/11/2023
Exam Time	3:00 PM - 4:30 PM
Subject	Constable Executive Male and Female in Delhi Police Examination 2023

Section : General Knowledge

Q.1 सरकार ने नवाचार के लिए सक्षम बुनियादी ढांचा और सुगमकारी माहौल प्रदान करके भारत के अल्पसेवित/असेवित क्षेत्रों में उद्यमिता की भावना को प्रोत्साहित करने के लिए _____ की शुरुआत की है।

- Ans
- 1. उत्पादन सम्बद्ध प्रोत्साहन योजना
 - 2. वन नेशन वन राशन नीति
 - 3. अटल समुदाय नवाचार केंद्र कार्यक्रम
 - 4. डिजिटल लाइब्रेरी मिशन

Question ID : 264330109124
Option 1 ID : 264330428776
Option 2 ID : 264330428775
Option 3 ID : 264330428773
Option 4 ID : 264330428774
Status : Answered
Chosen Option : 3

Q.2 Hydrogen ions cannot exist alone, but they exist after combining with water molecules. Which of the following is the correct way to show hydrogen ions?

- Ans
- 1. HO-
 - 2. H₃O⁺
 - 3. H₂
 - 4. H₂SO₄

Question ID : 264330138723
Option 1 ID : 264330543502
Option 2 ID : 264330543500
Option 3 ID : 264330543501
Option 4 ID : 264330543499
Status : Answered
Chosen Option : 2

Q.3 Which factor contributes to the occurrence of rainfall in the north-western parts of India during winters?

- Ans
- 1. Southwest Monsoon
 - 2. Trade Winds
 - 3. Western Disturbances
 - 4. Northeast Monsoon

Question ID : 264330174341
Option 1 ID : 264330683785
Option 2 ID : 264330683783
Option 3 ID : 264330683784
Option 4 ID : 264330683786
Status : Answered
Chosen Option : 3

Q.4 किस समिति ने सुझाव दिया कि करों का भुगतान करना भी नागरिकों का मौलिक कर्तव्य होना चाहिए?

- Ans
- 1. भूटा सिंह समिति
 - 2. स्वर्ण सिंह समिति
 - 3. चरण सिंह समिति
 - 4. जे एस वर्मा समिति

Question ID : 264330137413
Option 1 ID : 264330538280
Option 2 ID : 264330538282
Option 3 ID : 264330538281
Option 4 ID : 264330538279
Status : Answered
Chosen Option : 2

Q.5 Which of the following is NOT covered by the appellate jurisdiction of the Supreme Court?

- Ans
- 1. Civil cases
 - 2. Criminal cases
 - 3. Constitutional cases
 - 4. Conflicts between central and state

Question ID : 264330173527
Option 1 ID : 264330680587
Option 2 ID : 264330680588
Option 3 ID : 264330680589
Option 4 ID : 264330680590
Status : Not Answered
Chosen Option : --

Q.6 Har Ghar Tiranga movement was proposed in which year's Independence Day?

- Ans
- 1. 2020
 - 2. 2022
 - 3. 2021
 - 4. 2019

Question ID : 264330109616
Option 1 ID : 264330430742
Option 2 ID : 264330430744
Option 3 ID : 264330430743
Option 4 ID : 264330430741
Status : Answered
Chosen Option : 2

Q.7 Which of the following Constitutional Amendment Acts is related to the addition of eleventh fundamental duty in the Indian Constitution?

- Ans
- 1. 69th Constitutional Amendment Act
 - 2. 81st Constitutional Amendment Act
 - 3. 83rd Constitutional Amendment Act
 - 4. 86th Constitutional Amendment Act

Question ID : 264330180617
Option 1 ID : 264330708435
Option 2 ID : 264330708436
Option 3 ID : 264330708437
Option 4 ID : 264330708438
Status : Answered
Chosen Option : 4

Q.8 The festival of Pushkaralu is celebrated to promote the cultural heritage of which Indian state?

- Ans
- 1. Tamil Nadu
 - 2. Karnataka
 - 3. Kerala
 - 4. Andhra Pradesh

Question ID : 264330132419
Option 1 ID : 264330518771
Option 2 ID : 264330518774
Option 3 ID : 264330518773
Option 4 ID : 264330518772
Status : Answered
Chosen Option : 3

Q.9 The first edition of the Commonwealth Youth Games was held in the year:

- Ans
- 1. 2008
 - 2. 2004
 - 3. 2000
 - 4. 2011

Question ID : 264330118897
Option 1 ID : 264330466245
Option 2 ID : 264330466244
Option 3 ID : 264330466243
Option 4 ID : 264330466246
Status : Not Answered
Chosen Option : --

Q.10 विधान-परिषद के सदस्य के रूप में निर्वाचित होने के लिए किसी व्यक्ति की आयु वर्ष से कम नहीं होनी चाहिए।

- Ans
- 1. 25
 - 2. 35
 - 3. 30
 - 4. 21

Question ID : 264330120197
Option 1 ID : 264330471043
Option 2 ID : 264330471045
Option 3 ID : 264330471044
Option 4 ID : 264330471046
Status : Answered
Chosen Option : 1

Q.11 As we go down under water in a ocean the water pressure:

- Ans
- 1. decreases
 - 2. remains constant and equal to the atmospheric pressure
 - 3. increases
 - 4. remains less than atmospheric pressure

Question ID : 264330169097
Option 1 ID : 264330663193
Option 2 ID : 264330663194
Option 3 ID : 264330663192
Option 4 ID : 264330663191
Status : Answered
Chosen Option : 3

Q.12 1993-94 तक, गरीबी रेखा, _____ के आंकड़ों पर आधारित होती थी।

- Ans
- 1. मिश्रित संदर्भ अवधि (Mixed Reference Period)
 - 2. मिश्रित शोध अवधि (Mixed Research Period)
 - 3. समान संसाधन अवधि (Uniform Resource Period)
 - 4. समान शोध अवधि (Uniform Research Period)

Question ID : 264330183044
Option 1 ID : 264330717909
Option 2 ID : 264330717908
Option 3 ID : 264330717911
Option 4 ID : 264330717910
Status : Answered
Chosen Option : 4

Q.13 The ocean has _____ main temperature layers.

- Ans
- 1. five
 - 2. two
 - 3. four
 - 4. three

Question ID : 264330116382
Option 1 ID : 264330457613
Option 2 ID : 264330457614
Option 3 ID : 264330457616
Option 4 ID : 264330457615
Status : Not Answered
Chosen Option : --

Q.14 Which state does the noted Sindhi Sarangi player Lakha Khan belong to?

- Ans
- 1. Rajasthan
 - 2. Punjab
 - 3. Uttarakhand
 - 4. Haryana

Question ID : 264330110242
Option 1 ID : 264330433245
Option 2 ID : 264330433247
Option 3 ID : 264330433248
Option 4 ID : 264330433246
Status : Answered
Chosen Option : 1

Q.15 The headquarters of West Central Railway Zone of Indian Railway is located in _____.

- Ans
- 1. Jaipur
 - 2. Bhopal
 - 3. Agra
 - 4. Jabalpur

Question ID : 264330181118
Option 1 ID : 264330710417
Option 2 ID : 264330710416
Option 3 ID : 264330710415
Option 4 ID : 264330710418
Status : Answered
Chosen Option : 4

Q.16 मोरमुगाओ बंदरगाह किस राज्य में स्थित है?

- Ans
- 1. तमिलनाडु
 - 2. पश्चिम बंगाल
 - 3. गोवा
 - 4. महाराष्ट्र

Question ID : 264330182958
Option 1 ID : 264330717567
Option 2 ID : 264330717566
Option 3 ID : 264330717564
Option 4 ID : 264330717565
Status : Not Answered
Chosen Option : --

Q.17 दिए गए विकल्पों में से कौन-सा विकल्प, नागर मंदिर वास्तुकला में 'जगती' शब्द का सबसे अच्छा वर्णन करता है?

- Ans
- 1. ऊंचा चबूतरा, जो मुख्य देवी देवताओं का स्थान होता है
 - 2. ऊंचा चबूतरा, जिस पर ध्वज (झंडा) लगाया जाता है
 - 3. ऊंचा चबूतरा, जिस पर कलश होता है
 - 4. ऊंचा चबूतरा, जिस पर मंदिर बना होता है

Question ID : 264330165332
Option 1 ID : 264330648407
Option 2 ID : 264330648410
Option 3 ID : 264330648409
Option 4 ID : 264330648408
Status : Answered
Chosen Option : 4

Q.18 When was Rajiv Gandhi Khel Ratna Award renamed as Major Dhyan Chand Khel Ratna Award?

- Ans
- 1. 2022
 - 2. 2021
 - 3. 2020
 - 4. 2019

Question ID : 264330176746
Option 1 ID : 264330693202
Option 2 ID : 264330693200
Option 3 ID : 264330693199
Option 4 ID : 264330693201
Status : Answered
Chosen Option : 3

Q.19 कम्युनिस्ट जर्नल 'वैनगार्ड (Vanguard)' के संपादक बनने वाले स्वतंत्रता सेनानी का नाम बताइए।

- Ans
- 1. सी. राजगोपालाचारी
 - 2. एम.एन. रॉय
 - 3. के. केलप्पन
 - 4. पी. कृष्णा पिल्लई

Question ID : 264330171707
Option 1 ID : 264330673434
Option 2 ID : 264330673433
Option 3 ID : 264330673432
Option 4 ID : 264330673431
Status : Not Answered
Chosen Option : --

Q.20 The second edition of the Khelo India Winter Games 2021 was held in which of the following states/Union Territories?

- Ans
- 1. Sikkim
 - 2. Himachal Pradesh
 - 3. Jammu and Kashmir
 - 4. Uttarakhand

Question ID : 264330118444
Option 1 ID : 264330465177
Option 2 ID : 264330465180
Option 3 ID : 264330465179
Option 4 ID : 264330465178
Status : Answered
Chosen Option : 2

Q.21 Vyjayanthi Kashi is an exponent of which Indian classical dance form?

- Ans
- 1. Kuchipudi
 - 2. Bharatanatyam
 - 3. Mohiniattam
 - 4. Odissi

Question ID : 264330141329
Option 1 ID : 264330553652
Option 2 ID : 264330553651
Option 3 ID : 264330553654
Option 4 ID : 264330553653
Status : Answered
Chosen Option : 4

Q.22 Globalisation is a _____ phenomenon.

- Ans
- 1. multi-dimensional
 - 2. cultural only
 - 3. uni-dimensional only
 - 4. political only

Question ID : 264330117795
Option 1 ID : 264330462998
Option 2 ID : 264330462997
Option 3 ID : 264330462995
Option 4 ID : 264330462996
Status : Answered
Chosen Option : 1

Q.23 Which of the following statements is NOT correct about cell cycle?

- Ans
- 1. M is a meiosis phase.
 - 2. In G₂, phase cell prepare to divide.
 - 3. The correct sequence of cell cycle is G₁, S, G₂, M.
 - 4. DNA replication takes place in S cycle.

Question ID : 264330111892
Option 1 ID : 264330439655
Option 2 ID : 264330439656
Option 3 ID : 264330439653
Option 4 ID : 264330439654
Status : Not Answered
Chosen Option : --

Q.24 Which of the following cricketers has written an autobiography titled 'Six Machine'?

- Ans 1. Brendon McCullum
 2. Chris Gayle
 3. Jacques Kallis
 4. Adam Gilchrist

Question ID : 26433055354
Option 1 ID : 264330216400
Option 2 ID : 264330216401
Option 3 ID : 264330216403
Option 4 ID : 264330216402
Status : Not Answered
Chosen Option : --

Q.25 Who among the following is a Sangeet Natak Akademi award-winning Bharatanatyam dancer?

- Ans 1. Jayalakshmi Eshwar
 2. Kumkum Dhar
 3. Sunanda Nair
 4. M Sailaja

Question ID : 264330182985
Option 1 ID : 264330717674
Option 2 ID : 264330717675
Option 3 ID : 264330717673
Option 4 ID : 264330717672
Status : Answered
Chosen Option : 1

Q.26 लघु उद्योग को परिभाषित करने के लिए एक मानदंड क्या है?

- Ans 1. एक वर्ष की अवधि के दौरान कारोबार की राशि
 2. इकाई का आकार
 3. किसी विशेष वर्ष के दौरान इकाई की कुल बिक्री
 4. एक इकाई की संपत्ति पर अधिकतम निवेश की अनुमति

Question ID : 26433054614
Option 1 ID : 264330213443
Option 2 ID : 264330213440
Option 3 ID : 264330213441
Option 4 ID : 264330213442
Status : Answered
Chosen Option : 3

Q.27 मक्कू, तुइवई, सोनाई और रुक्नी किस नदी की सहायक नदियाँ हैं?

- Ans 1. बराक
 2. पेन्नार
 3. साबरमती
 4. तापी

Question ID : 264330141743
Option 1 ID : 264330555294
Option 2 ID : 264330555292
Option 3 ID : 264330555293
Option 4 ID : 264330555291
Status : Not Answered
Chosen Option : --

Q.28 When was Tattvabodhini Sabha established?

- Ans 1. 1851
 2. 1831
 3. 1843
 4. 1839

Question ID : 264330123742
Option 1 ID : 264330485006
Option 2 ID : 264330485003
Option 3 ID : 264330485004
Option 4 ID : 264330485005
Status : Answered
Chosen Option : 4

Q.29 As per Census 2011, which of the following states/union territories has the highest male literacy rate?

- Ans 1. Kerala
 2. Mizoram
 3. Chandigarh
 4. Lakshadweep

Question ID : 264330183021
Option 1 ID : 264330717816
Option 2 ID : 264330717817
Option 3 ID : 264330717819
Option 4 ID : 264330717818
Status : Answered
Chosen Option : 1

Q.30 पुदुक्कोट्टई दक्षिणमूर्ति पिल्लई एक प्रसिद्ध _____ वादक है।

- Ans 1. मेज़
 2. गिटार
 3. बाँसुरी
 4. कंजीरा

Question ID : 264330111933
Option 1 ID : 264330439820
Option 2 ID : 264330439817
Option 3 ID : 264330439819
Option 4 ID : 264330439818
Status : Not Answered
Chosen Option : --

Q.31 Which of the following states was selected by the Indian Government to try a new variety of wheat seeds for the first time during the green revolution?

- Ans 1. Madhya Pradesh
 2. Punjab
 3. Uttar Pradesh
 4. Bihar

Question ID : 264330116531
Option 1 ID : 264330458212
Option 2 ID : 264330458209
Option 3 ID : 264330458211
Option 4 ID : 264330458210
Status : Answered
Chosen Option : 2

Q.32 1969 में बैंकों के राष्ट्रीयकरण के दौरान निम्नलिखित में से किस बैंक का राष्ट्रीयकरण नहीं किया गया था?

- Ans
- 1. केनरा बैंक
 - 2. एसबीआई
 - 3. यूको बैंक
 - 4. बैंक ऑफ बड़ौदा

Question ID : 264330118182
Option 1 ID : 264330464545
Option 2 ID : 264330464543
Option 3 ID : 264330464544
Option 4 ID : 264330464546
Status : Answered
Chosen Option : 4

Q.33 'Sunny Days: An Autobiography' is written by which of the following Indian cricketers?

- Ans
- 1. Sunil Gavaskar
 - 2. Rahul Dravid
 - 3. Mohinder Amarnath
 - 4. Kapil Dev

Question ID : 26433055353
Option 1 ID : 264330216396
Option 2 ID : 264330216399
Option 3 ID : 264330216397
Option 4 ID : 264330216398
Status : Not Answered
Chosen Option : --

Q.34 Which of the following is NOT an element of the Competition Act 2002?

- Ans
- 1. Prohibition of anti-competitive agreements
 - 2. Regulation of combination
 - 3. Abuse of dominant position
 - 4. Prohibition of trade

Question ID : 264330111621
Option 1 ID : 264330438572
Option 2 ID : 264330438570
Option 3 ID : 264330438569
Option 4 ID : 264330438571
Status : Answered
Chosen Option : 3

Q.35 In which language is the Hathigumpha Inscription engraved?

- Ans
- 1. Sanskrit
 - 2. Hindi
 - 3. Pali
 - 4. Marathi

Question ID : 264330120010
Option 1 ID : 264330470298
Option 2 ID : 264330470295
Option 3 ID : 264330470296
Option 4 ID : 264330470297
Status : Not Answered
Chosen Option : --

Q.36 Who among the following Gupta kings is popularly known as the Napoleon of India?

- Ans 1. Samudragupta
 2. Kumaragupta I
 3. Ghatotkacha
 4. Vishnugupta

Question ID : 264330119472
Option 1 ID : 264330468171
Option 2 ID : 264330468172
Option 3 ID : 264330468173
Option 4 ID : 264330468174
Status : Answered
Chosen Option : 1

Q.37 अनुच्छेद 166 के अनुसार किसी राज्य सरकार की समस्त कार्यपालिका कार्यवाही किसके नाम पर व्यक्त की जाएगी ?

- Ans 1. राज्यपाल
 2. मुख्यमंत्री
 3. राज्य महाधिवक्ता
 4. राष्ट्रपति

Question ID : 26433069889
Option 1 ID : 264330274061
Option 2 ID : 264330274062
Option 3 ID : 264330274063
Option 4 ID : 264330274060
Status : Answered
Chosen Option : 1

Q.38 Who among the following was given the title of 'Queen of Kathak' by Gurudev Rabindranath Tagore?

- Ans 1. Rukmini Devi Arundale
 2. Sanjukta Panigrahi
 3. Shanta Rao
 4. Sitara Devi

Question ID : 26433097125
Option 1 ID : 264330381197
Option 2 ID : 264330381199
Option 3 ID : 264330381200
Option 4 ID : 264330381198
Status : Answered
Chosen Option : 4

Q.39 इल्लुतमिश का कुतुबुद्दीन ऐबक से क्या संबंध था?

- Ans 1. दामाद
 2. भाई
 3. बहनोई
 4. पुत्र

Question ID : 264330120287
Option 1 ID : 264330471400
Option 2 ID : 264330471401
Option 3 ID : 264330471402
Option 4 ID : 264330471399
Status : Answered
Chosen Option : 1

Q.40 बौद्धों द्वारा निर्मित कन्हेरी गुफाएँ निम्नलिखित में से किस राज्य में स्थित हैं?

- Ans 1. गुजरात
 2. महाराष्ट्र
 3. बिहार
 4. मध्य प्रदेश

Question ID : 26433074095
Option 1 ID : 264330290502
Option 2 ID : 264330290503
Option 3 ID : 264330290500
Option 4 ID : 264330290501
Status : Answered
Chosen Option : 3

Q.41 Which of the following fundamental duties was added by the 86th Constitutional Act, 2002?

- Ans 1. To protect and improve the natural environment
 2. To safeguard public property
 3. To uphold and protect the sovereignty, unity and integrity of India
 4. To provide opportunities for education to his/her child between 6 and 14 years

Question ID : 264330110110
Option 1 ID : 264330432718
Option 2 ID : 264330432717
Option 3 ID : 264330432720
Option 4 ID : 264330432719
Status : Answered
Chosen Option : 4

Q.42 In which year did the Indian Government develop 'SMILE' ('Support for Marginalized Individuals for Livelihood and Enterprise')?

- Ans 1. 2019
 2. 2021
 3. 2022
 4. 2018

Question ID : 264330130601
Option 1 ID : 264330511517
Option 2 ID : 264330511516
Option 3 ID : 264330511515
Option 4 ID : 264330511518
Status : Not Answered
Chosen Option : --

Q.43 Qandahar was lost to the _____ during the reign of Shah Jahan.

- Ans 1. Seljuks
 2. Uzbegs
 3. Pahlavis
 4. Safavids

Question ID : 264330106568
Option 1 ID : 264330418575
Option 2 ID : 264330418573
Option 3 ID : 264330418576
Option 4 ID : 264330418574
Status : Not Answered
Chosen Option : --

Q.44 In which of the following kingdoms is the eukaryotic cell NOT found?

- Ans 1. Monera
 2. Animalia
 3. Protista
 4. Fungi

Question ID : 264330117589
Option 1 ID : 264330462383
Option 2 ID : 264330462381
Option 3 ID : 264330462382
Option 4 ID : 264330462384
Status : Answered
Chosen Option : 2

Q.45 1875 में स्थापित निम्नलिखित में से कौन-सा संगठन मूर्ति पूजा का विरोध करता है और वेदों की अचूकता का समर्थन करता है?

- Ans 1. आर्य समाज
 2. परमहंस मंडली
 3. प्रार्थना समाज
 4. रामकृष्ण मिशन

Question ID : 264330130558
Option 1 ID : 264330511346
Option 2 ID : 264330511344
Option 3 ID : 264330511343
Option 4 ID : 264330511345
Status : Answered
Chosen Option : 4

Q.46 The 97th Constitutional Amendment Act of 2011 added a new directive principle of state policy relating to _____.

- Ans 1. interstate relations
 2. quasi-judicial bodies
 3. cooperative societies
 4. rivers and water bodies

Question ID : 264330130455
Option 1 ID : 264330510932
Option 2 ID : 264330510931
Option 3 ID : 264330510933
Option 4 ID : 264330510934
Status : Not Answered
Chosen Option : --

Q.47 Through which of the following Government of India Acts the Montagu-Chelmsford Reforms introduced Dyarchy in the provinces?

- Ans 1. 1858
 2. 1894
 3. 1919
 4. 1935

Question ID : 264330118597
Option 1 ID : 264330465640
Option 2 ID : 264330465641
Option 3 ID : 264330465639
Option 4 ID : 264330465642
Status : Answered
Chosen Option : 3

Q.48 भारत सरकार ने क्षेत्रीय ग्रामीण बैंकों की स्थापना किस वर्ष शुरू की थी?

- Ans 1. 1975 में
 2. 1992 में
 3. 2005 में
 4. 1951 में

Question ID : 264330111726
Option 1 ID : 264330438990
Option 2 ID : 264330438991
Option 3 ID : 264330438992
Option 4 ID : 264330438989
Status : Not Answered
Chosen Option : --

Q.49 निम्नलिखित में से कौन एक प्रसिद्ध 'सत्रीया' नर्तकी है?

- Ans 1. शारोदी सैकिया
 2. अलुना काबुईनी
 3. सोनल मानसिंह
 4. मल्लिका साराभाई

Question ID : 264330106197
Option 1 ID : 264330417089
Option 2 ID : 264330417092
Option 3 ID : 264330417091
Option 4 ID : 264330417090
Status : Answered
Chosen Option : 2

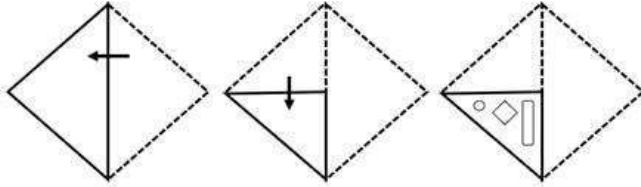
Q.50 निम्नलिखित में से कौन-सा अंतरराष्ट्रीय संगठन शतरंज का शासी निकाय है?

- Ans 1. ICC
 2. IOC
 3. FIDE
 4. FIFA

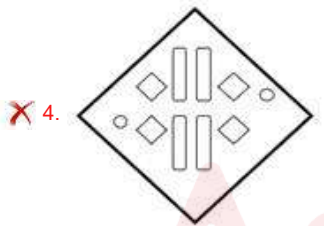
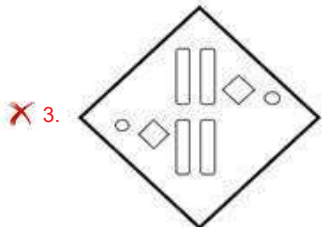
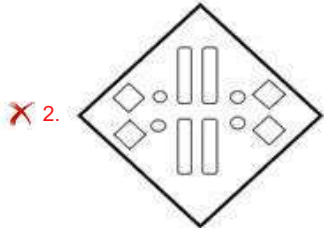
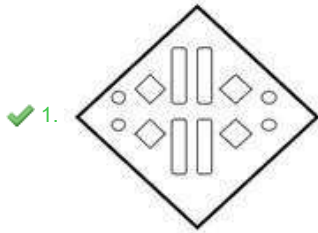
Question ID : 264330134271
Option 1 ID : 264330526082
Option 2 ID : 264330526081
Option 3 ID : 264330526080
Option 4 ID : 264330526079
Status : Answered
Chosen Option : 1

Section : Reasoning

Q.1 A paper is folded and cut as shown below. How will it appear when unfolded?



Ans



Question ID : 26433076502

Option 1 ID : 264330300073

Option 2 ID : 264330300075

Option 3 ID : 264330300074

Option 4 ID : 264330300072

Status : Answered

Chosen Option : 1

Q.2 Which figure should replace the question mark (?) if the series were to be continued?

N	9	2	9	
V 2 9 ☆	N 2	N V 9 ☆	2 V	?
☆	V	☆	N	

Ans

✗ 1.

N
V ☆ 2
9

✗ 2.

V
N ☆ 9
2

✓ 3.

V
2 N 9
☆

✗ 4.

V
9 2 N
☆

Question ID : 264330130802

Option 1 ID : 264330512322

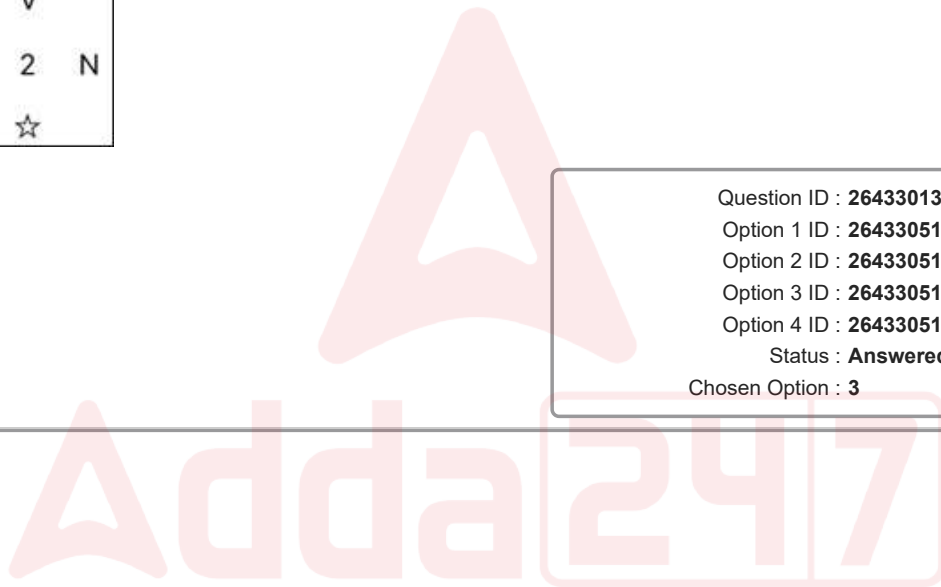
Option 2 ID : 264330512320

Option 3 ID : 264330512321

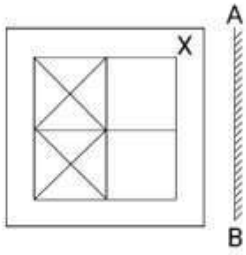
Option 4 ID : 264330512319

Status : Answered

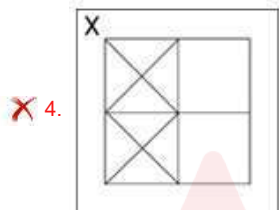
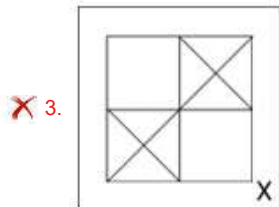
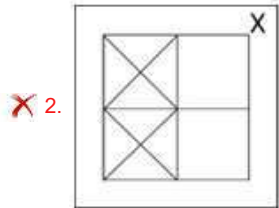
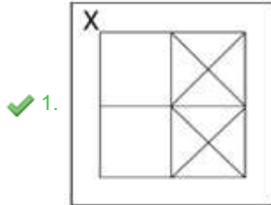
Chosen Option : 3



Q.3 Select the correct mirror image of the given figure when the mirror is placed at 'AB' as shown.



Ans



Question ID : 264330114261

Option 1 ID : 264330449132

Option 2 ID : 264330449129

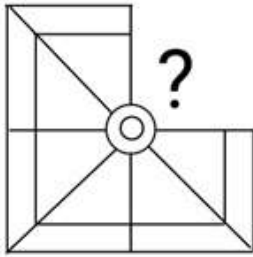
Option 3 ID : 264330449130

Option 4 ID : 264330449131

Status : Answered

Chosen Option : 1

Q.4 Select the figure from the given options that will replace the question mark (?) in the figure given below to complete the pattern.



Ans

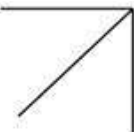
✓ 1.



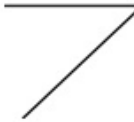
✗ 2.



✗ 3.



✗ 4.



Question ID : 264330118116

Option 1 ID : 264330464282

Option 2 ID : 264330464280

Option 3 ID : 264330464281

Option 4 ID : 264330464279

Status : Answered

Chosen Option : 1

Q.5 Read the given statements and conclusions carefully. Assuming that the information given in the statements is true, even if it appears to be at variance with commonly known facts, decide which of the given conclusions logically follow(s) from the statements.

Statements:

- All bags are pants.
- All pants are eggs.
- All eggs are flowers.

Conclusions:

- I. All pants are flowers.
- II. All pants are bags.
- III. All flowers are bags.
- IV. All flowers are pants.

- Ans
- ✗ 1. Only conclusion III follows
 - ✗ 2. Only conclusion IV follows
 - ✓ 3. Only conclusion I follows
 - ✗ 4. Only conclusion II follows

Question ID : 26433078847

Option 1 ID : 264330309402

Option 2 ID : 264330309403

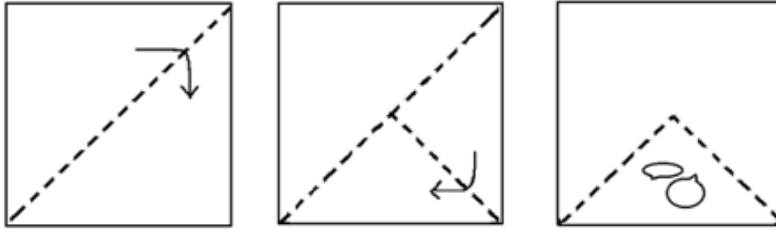
Option 3 ID : 264330309400

Option 4 ID : 264330309401

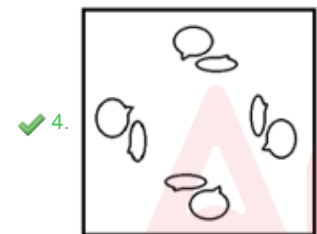
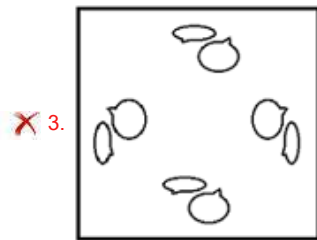

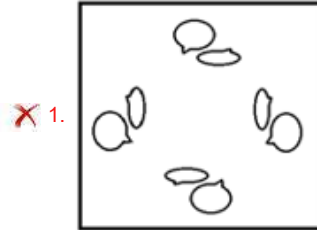
Status : Answered

Chosen Option : 3

Q.6 The sequence of folding a piece of paper and the manner in which the folded paper is cut is shown in the following figure. How would this paper look when unfolded?



Ans



Question ID : 264330111295

Option 1 ID : 264330437266

Option 2 ID : 264330437267

Option 3 ID : 264330437268

Option 4 ID : 264330437265

Status : Answered

Chosen Option : 4

Q.7 Six people, S, T, U, V, W and X, are sitting in a straight row facing north. Only two people sit to the left of U. Only two people sit between U and X. T sits to the immediate right of S. W sits to the immediate left of V. V is not a neighbour of X. Who sits at the extreme left end of the row?

- Ans
- 1. W
 - 2. X
 - 3. V
 - 4. S

Question ID : 26433089505
Option 1 ID : 264330351522
Option 2 ID : 264330351524
Option 3 ID : 264330351521
Option 4 ID : 264330351523
Status : Answered
Chosen Option : 1

Q.8 In a certain code language, 'SITE' is written as 'WMXI' and 'MAKE' is written as 'QEOI' . How will 'TERM' be written in that language?

- Ans
- 1. XHUP
 - 2. XIVQ
 - 3. WHVQ
 - 4. WIUO

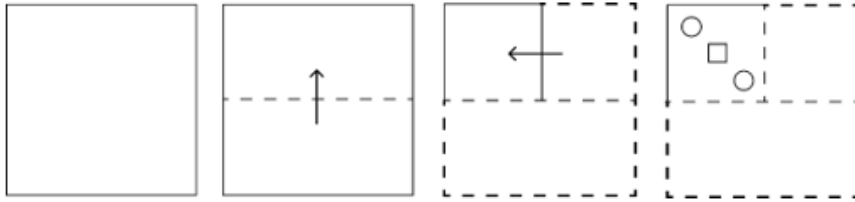
Question ID : 26433087173
Option 1 ID : 264330342330
Option 2 ID : 264330342331
Option 3 ID : 264330342329
Option 4 ID : 264330342332
Status : Answered
Chosen Option : 2

Q.9 Which of the following options will replace the question mark (?) in the given series?
286, 257, 230, 205, ?, 161

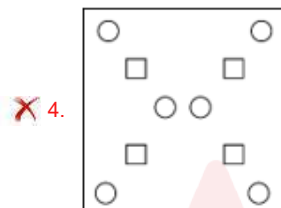
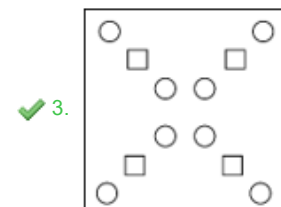
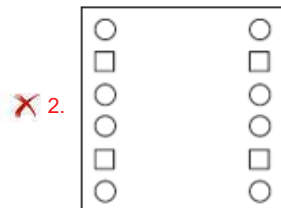
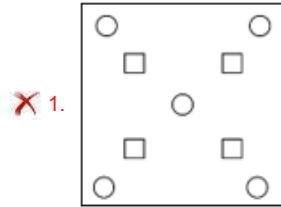
- Ans
- 1. 188
 - 2. 178
 - 3. 182
 - 4. 192

Question ID : 264330109430
Option 1 ID : 264330429997
Option 2 ID : 264330429999
Option 3 ID : 264330430000
Option 4 ID : 264330429998
Status : Answered
Chosen Option : 3

Q.10 A square sheet of paper is folded along the dotted line successively along the directions shown and is then punched in the last. How would the paper look when unfolded?



Ans



Question ID : 264330172416

Option 1 ID : 264330676216

Option 2 ID : 264330676217

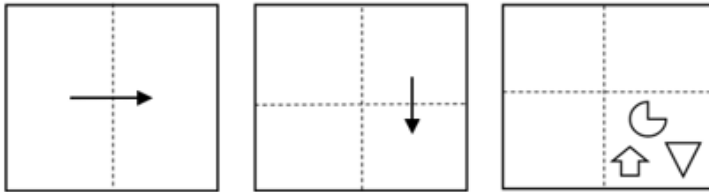
Option 3 ID : 264330676215

Option 4 ID : 264330676218

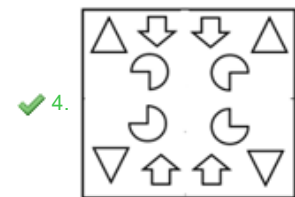
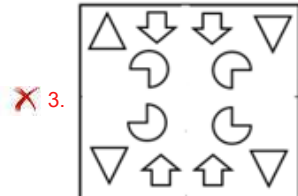
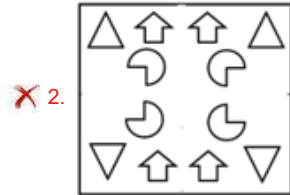
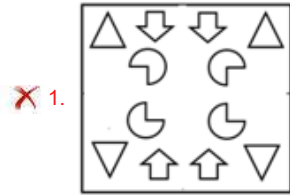
Status : Answered

Chosen Option : 3

Q.11 A paper is folded and cut as shown below. How will it appear when unfolded?



Ans



Adda247

Question ID : 264330113650

Option 1 ID : 264330446685

Option 2 ID : 264330446687

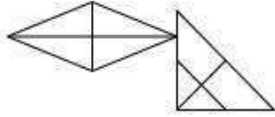
Option 3 ID : 264330446688

Option 4 ID : 264330446686

Status : Answered

Chosen Option : 4

Q.12 How many triangles are there in the given figure?



- Ans
- 1. 12
 - 2. 8
 - 3. 14
 - 4. 10

Question ID : 26433080667
Option 1 ID : 264330316603
Option 2 ID : 264330316601
Option 3 ID : 264330316604
Option 4 ID : 264330316602
Status : Answered
Chosen Option : 3

Q.13 1, 2, 3, 4, 5 and 6 are written on different faces of a dice. Three different positions of the same dice are shown below. Find the number on the face opposite to the one showing '6'.

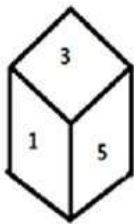


figure 1

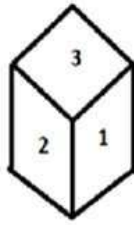


figure 2

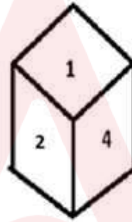


figure 3

- Ans
- 1. 4
 - 2. 5
 - 3. 2
 - 4. 1

Question ID : 264330111677
Option 1 ID : 264330438794
Option 2 ID : 264330438795
Option 3 ID : 264330438796
Option 4 ID : 264330438793
Status : Answered
Chosen Option : 4

Q.14 Select the option that is related to the third term in the same way as the second term is related to the first term and the sixth term is related to the fifth term.
63 : 9 :: 84 : ? :: 119 : 17

- Ans
- 1. 4
 - 2. 8
 - 3. 12
 - 4. 16

Question ID : 264330102256

Option 1 ID : 264330401489

Option 2 ID : 264330401490

Option 3 ID : 264330401492

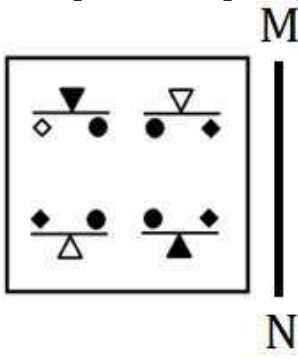
Option 4 ID : 264330401491

Status : Answered

Chosen Option : 3

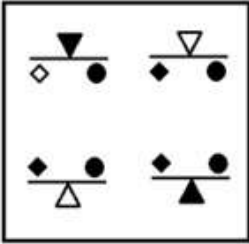


Q.15 Select the correct mirror image from the following options, when the mirror is placed on the right side of the given figure.

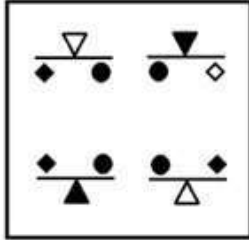


Ans

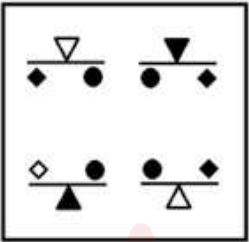
✗ 1.



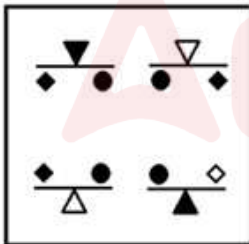
✓ 2.



✗ 3.



✗ 4.



Question ID : 264330112311

Option 1 ID : 264330441329

Option 2 ID : 264330441331

Option 3 ID : 264330441332

Option 4 ID : 264330441330

Status : Answered

Chosen Option : 2

Q.16 Select the set in which the numbers are related in the same way as are the numbers of the following sets.

(NOTE : Operations should be performed on the whole numbers, without breaking down the numbers into its constituent digits. E.g. 13 – Operations on 13 such as adding /deleting /multiplying etc. to 13 can be performed. Breaking down 13 into 1 and 3 and then performing mathematical operations on 1 and 3 is NOT allowed)
(676, 553), (784, 661)

Ans 1. (547, 424)

2. (421, 301)

3. (691, 581)

4. (752, 628)

Question ID : 26433052036

Option 1 ID : 264330203447

Option 2 ID : 264330203446

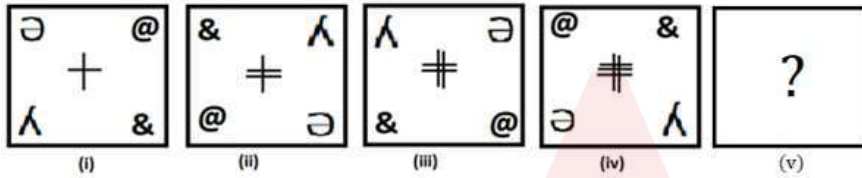
Option 3 ID : 264330203449

Option 4 ID : 264330203448

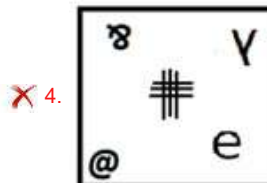
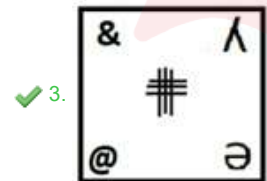
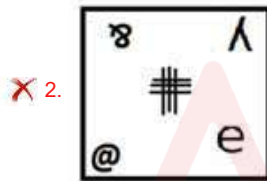
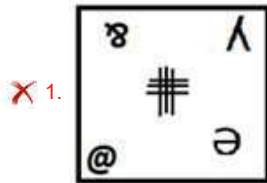
Status : Answered

Chosen Option : 1

Q.17 Select the figure from among the given options that can replace the question mark (?) in the following series.



Ans



Question ID : 264330106551

Option 1 ID : 264330418506

Option 2 ID : 264330418505

Option 3 ID : 264330418507

Option 4 ID : 264330418508

Status : Answered

Chosen Option : 3

Q.18 उस विकल्प का चयन कीजिए, जो तीसरे शब्द से उसी प्रकार संबंधित है, जिस प्रकार दूसरा शब्द पहले शब्द से संबंधित है।
(शब्दों को अंग्रेजी/हिंदी के अर्थपूर्ण शब्दों के रूप में माना जाना चाहिए और ये शब्द, अक्षरों की संख्या/ व्यंजनों/स्वरों की संख्या के आधार पर एक-दूसरे से संबंधित नहीं होने चाहिए।)
चूजे (Chicken) : ब्रूड (Brood) :: मधुमक्खियां (Bees) : ?

- Ans
- 1. गैंग (Gang)
 - 2. मॉब (Mob)
 - 3. लीग (League)
 - 4. स्वार्म (Swarm)

Question ID : 26433069169
Option 1 ID : 264330271189
Option 2 ID : 264330271188
Option 3 ID : 264330271191
Option 4 ID : 264330271190
Status : Answered
Chosen Option : 4

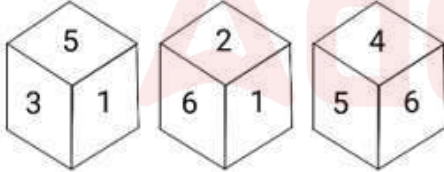
Q.19 Which two signs should be interchanged to make the following equation correct?

$$8 - 2 \times 49 \div 7 + 2 = 11$$

- Ans
- 1. + and -
 - 2. - and \times
 - 3. - and +
 - 4. + and \times

Question ID : 264330101086
Option 1 ID : 264330396889
Option 2 ID : 264330396891
Option 3 ID : 264330396890
Option 4 ID : 264330396892
Status : Answered
Chosen Option : 2

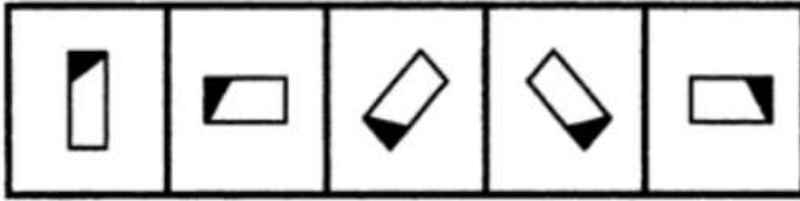
Q.20 Three different positions of the same dice are shown. Find the number on the face opposite to the face showing '6'.



- Ans
- 1. 4
 - 2. 5
 - 3. 3
 - 4. 1

Question ID : 264330112037
Option 1 ID : 264330440236
Option 2 ID : 264330440235
Option 3 ID : 264330440234
Option 4 ID : 264330440233
Status : Answered
Chosen Option : 3

Q.21 Select the figure that will come next in the following figure series.




Ans

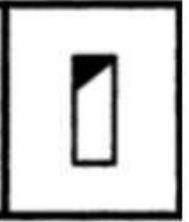
✗ 1.



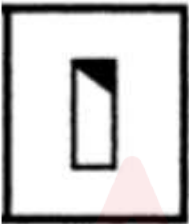
✗ 2.



✗ 3.



✓ 4.



Question ID : 26433090226

Option 1 ID : 264330354382

Option 2 ID : 264330354381

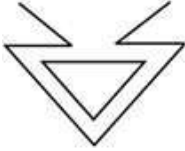
Option 3 ID : 264330354383

Option 4 ID : 264330354384

Status : Answered

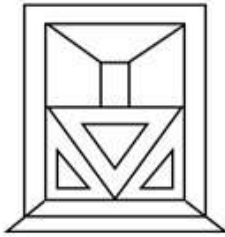
Chosen Option : 4

Q.22 Select the option in which the given figure is embedded (rotation is NOT allowed).



Ans

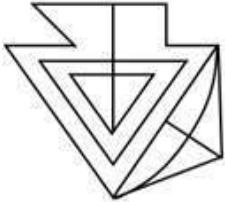
✗ 1.



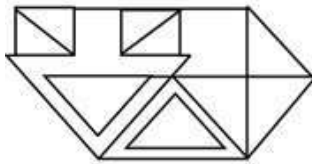
✗ 2.



✗ 3.



✓ 4.



Question ID : 264330114688

Option 1 ID : 264330450838

Option 2 ID : 264330450839

Option 3 ID : 264330450840

Option 4 ID : 264330450837

Status : Answered

Chosen Option : 4

Q.23 Which of the following terms will replace the question mark (?) in the given series?
BMXO, EOUM, ?, KSOI, NULG

Ans ✗ 1. FQRL

✓ 2. HQRK

✗ 3. HORL

✗ 4. FQSK

Question ID : 264330102174

Option 1 ID : 264330401161

Option 2 ID : 264330401162

Option 3 ID : 264330401163

Option 4 ID : 264330401164

Status : Answered


Chosen Option : 2

Q.24 Select the option in which the given figure is embedded. (Rotation is NOT allowed.)

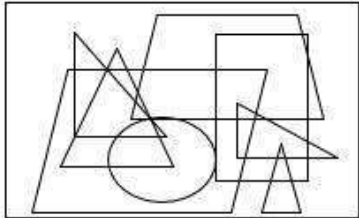


Ans

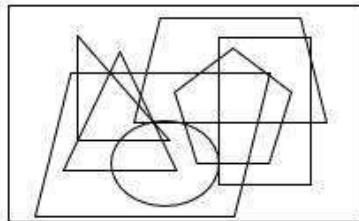
1.



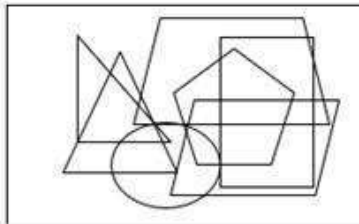
2.



3.



4.



Question ID : 26433092516

Option 1 ID : 264330363353

Option 2 ID : 264330363355

Option 3 ID : 264330363354

Option 4 ID : 264330363356

Status : Answered

Chosen Option : 3

Q.25 Select the correct combination of mathematical signs that can sequentially replace the * signs and balance the given equation.

$$12 * 6 * 3 * 2 * 8 * 4$$

Ans 1. +, x, -, +, =

2. +, x, -, =, +

3. +, -, x, +, =

4. ÷, -, x, +, =

Question ID : 26433079085

Option 1 ID : 264330310344

Option 2 ID : 264330310346

Option 3 ID : 264330310347

Option 4 ID : 264330310345

Status : Answered

Chosen Option : 4