

## Constable Executive Male and Female in Delhi Police Examination 2023

Roll Number	
Candidate Name	
Venue Name	iON Digital Zone iDZ 2 Sector 62
Exam Date	14/11/2023
Exam Time	9:00 AM - 10:30 AM
Subject	Constable Executive Male and Female in Delhi Police Examination 2023

Section : General Knowledge

**Q.1 When is Maha Shivaratri celebrated according to the Drik Panchang?**

- Ans**  1. Magha, Krishna Paksha, Chaturdashi  
 2. Ashadh, Krishna Paksha, Trayodashi  
 3. Phalguna, Shukla Paksha, Ekadashi  
 4. Chaitra, Shukla Paksha, Ekam

Question ID : 264330110462

Option 1 ID : 264330434127

Option 2 ID : 264330434128

Option 3 ID : 264330434126

Option 4 ID : 264330434125

Status : Not Attempted and Marked For Review

Chosen Option : --

**Q.2 Which of the following Indian Olympians has written the autobiography titled 'Playing to Win'?**

- Ans**  1. Abhinav Bindra  
 2. Saina Nehwal  
 3. Lovlina Borgohain  
 4. Karnam Malleswari

Question ID : 26433066677

Option 1 ID : 264330261234

Option 2 ID : 264330261235

Option 3 ID : 264330261233

Option 4 ID : 264330261232

Status : Answered

Chosen Option : 2

**Q.3 Which of the following is/are the goals of five year plans?**

- Ans**  1. Growth, Modernisation, and Equity only  
 2. Growth only  
 3. Growth, and Abolition of intermediaries  
 4. Growth, Modernisation, Equity and Self-reliance

Question ID : 264330117742

Option 1 ID : 264330462783

Option 2 ID : 264330462784

Option 3 ID : 264330462786

Option 4 ID : 264330462785

Status : Answered

Chosen Option : 4

**Q.4 Which of the following cultural festivals is organised by the Uttar Pradesh tourism department?**

- Ans**  1. Taj Mahotsav  
 2. Hampi Dance Utsav  
 3. Natyanjali Utsav  
 4. Nishagandhi Festival

Question ID : 264330141780  
Option 1 ID : 264330555441  
Option 2 ID : 264330555439  
Option 3 ID : 264330555442  
Option 4 ID : 264330555440  
Status : Answered  
Chosen Option : 1

**Q.5 Who among the following was the Prime Minister when the Globalisation Policy as part of 'New Economic Policy' was introduced?**

- Ans**  1. Manmohan Singh  
 2. PV Narasimha Rao  
 3. Narendra Modi  
 4. Atal Bihari Vajpayee

Question ID : 264330111577  
Option 1 ID : 264330438395  
Option 2 ID : 264330438396  
Option 3 ID : 264330438394  
Option 4 ID : 264330438393  
Status : Answered  
Chosen Option : 2

**Q.6 Which Article of the Indian Constitution deals with the Governor's assent to Bills?**

- Ans**  1. Article 201  
 2. Article 164  
 3. Article 264  
 4. Article 200

Question ID : 26433089974  
Option 1 ID : 264330353375  
Option 2 ID : 264330353373  
Option 3 ID : 264330353374  
Option 4 ID : 264330353376  
Status : Marked For Review  
Chosen Option : 3

**Q.7 Which part of the food is defecated?**

- Ans**  1. Vitamins in food  
 2. Glucose in food  
 3. Nutrients in food  
 4. Unused food

Question ID : 264330118272  
Option 1 ID : 264330464904  
Option 2 ID : 264330464906  
Option 3 ID : 264330464903  
Option 4 ID : 264330464905  
Status : Answered  
Chosen Option : 4

**Q.8 Who summons each house of State Legislature to meet from time to time?**

- Ans  1. Deputy Speaker  
 2. Chief Minister  
 3. Governor  
 4. Speaker

Question ID : 264330173545  
Option 1 ID : 264330680662  
Option 2 ID : 264330680660  
Option 3 ID : 264330680659  
Option 4 ID : 264330680661  
Status : Answered  
Chosen Option : 3

**Q.9 Who among the following performed religious rituals for the king during the Vedic period?**

- Ans  1. Vrajpati  
 2. Purohita  
 3. Gramani  
 4. Senani

Question ID : 264330120235  
Option 1 ID : 264330471195  
Option 2 ID : 264330471196  
Option 3 ID : 264330471197  
Option 4 ID : 264330471198  
Status : Answered  
Chosen Option : 2

**Q.10 National Waterways 10 (NW-10) is located in which state?**

- Ans  1. Kerala  
 2. West Bengal  
 3. Tamil Nadu  
 4. Maharashtra

Question ID : 264330119887  
Option 1 ID : 264330469823  
Option 2 ID : 264330469825  
Option 3 ID : 264330469824  
Option 4 ID : 264330469826  
Status : Not Attempted and Marked For Review  
Chosen Option : --

**Q.11 Which of the following pairs is INCORRECT?**

- Ans  1. Non-ferrous metal – Zinc  
 2. Precious metal – Platinum  
 3. Ferrous metal – Iron  
 4. Non-metal – Lead

Question ID : 264330116378  
Option 1 ID : 264330457599  
Option 2 ID : 264330457597  
Option 3 ID : 264330457598  
Option 4 ID : 264330457600  
Status : Answered  
Chosen Option : 1

Q.12 In which of the following years was the Rowlatt Act passed to suppress the political violence?

- Ans  1. 1919  
 2. 1915  
 3. 1921  
 4. 1924

Question ID : 264330118598  
Option 1 ID : 264330465646  
Option 2 ID : 264330465645  
Option 3 ID : 264330465644  
Option 4 ID : 264330465643  
Status : Answered  
Chosen Option : 1

Q.13 Ustad Allah Rakha, Sabir Khan, Pandit Kishan Maharaj and Pandit Jnan Prakash Ghosh are associated with which musical instrument?

- Ans  1. Shehnai  
 2. Tabla  
 3. Mridangam  
 4. Violin

Question ID : 264330111187  
Option 1 ID : 264330436834  
Option 2 ID : 264330436835  
Option 3 ID : 264330436833  
Option 4 ID : 264330436836  
Status : Answered  
Chosen Option : 2

Q.14 Which of the given monuments is NOT located in Karnataka?

- Ans  1. Kittur Fort  
 2. Hoysaleswara Temple  
 3. Gol Gumbaz  
 4. Palakkad Fort

Question ID : 264330165328  
Option 1 ID : 264330648391  
Option 2 ID : 264330648393  
Option 3 ID : 264330648392  
Option 4 ID : 264330648394  
Status : Answered  
Chosen Option : 4

Q.15 The Indian Parliament approved the 86<sup>th</sup> Constitutional Amendment Act of 2002, which establishes the fundamental right to elementary education for children aged \_\_\_\_\_.

- Ans  1. 5-11 years  
 2. 6-14 Years  
 3. 6-17 Years  
 4. 7-16 Years

Question ID : 264330182974  
Option 1 ID : 264330717628  
Option 2 ID : 264330717629  
Option 3 ID : 264330717631  
Option 4 ID : 264330717630  
Status : Answered  
Chosen Option : 2

Q.16 What was the name of the first dynasty that ruled over Magadh kingdom?

- Ans  1. Haryank dynasty  
 2. Nanda dynasty  
 3. Mauryan dynasty  
 4. Shishunga dynasty

Question ID : 264330123735  
Option 1 ID : 264330484975  
Option 2 ID : 264330484977  
Option 3 ID : 264330484978  
Option 4 ID : 264330484976  
Status : Answered  
Chosen Option : 2

Q.17 Through which of the following Acts does the government check restrictive trade?

- Ans  1. FEMA Act  
 2. Industrial Policy Act 1991  
 3. MRTP Act  
 4. Foreign Trade Policy

Question ID : 264330110194  
Option 1 ID : 264330433054  
Option 2 ID : 264330433055  
Option 3 ID : 264330433053  
Option 4 ID : 264330433056  
Status : Answered  
Chosen Option : 3

Q.18 The 'pawn' is associated with which of the following games?

- Ans  1. Cricket  
 2. Chess  
 3. Tennis  
 4. Badminton

Question ID : 264330130641  
Option 1 ID : 264330511678  
Option 2 ID : 264330511675  
Option 3 ID : 264330511677  
Option 4 ID : 264330511676  
Status : Answered  
Chosen Option : 2

Q.19 Which of the following States hosted the fourth edition of the Khelo India Youth Games?

- Ans  1. Telangana  
 2. Haryana  
 3. Karnataka  
 4. Assam

Question ID : 264330113755  
Option 1 ID : 264330447107  
Option 2 ID : 264330447105  
Option 3 ID : 264330447106  
Option 4 ID : 264330447108  
Status : Answered  
Chosen Option : 2

Q.20 Which of the following stations receives the highest annual rainfall?

- Ans  1. Shillong  
 2. Chennai  
 3. Jodhpur  
 4. Nagpur

Question ID : 264330175825  
Option 1 ID : 264330689599  
Option 2 ID : 264330689601  
Option 3 ID : 264330689602  
Option 4 ID : 264330689600  
Status : Answered  
Chosen Option : 1

Q.21 Which country hosted the IBA Women's World Boxing Championship-2023?

- Ans  1. Bangladesh  
 2. Sri Lanka  
 3. India  
 4. Pakistan

Question ID : 264330113729  
Option 1 ID : 264330447004  
Option 2 ID : 264330447003  
Option 3 ID : 264330447001  
Option 4 ID : 264330447002  
Status : Marked For Review  
Chosen Option : 3

Q.22 Which of the following Articles of the Indian Constitution is related with right to work, to education and to public assistance in certain cases?

- Ans  1. Article 41  
 2. Article 44  
 3. Article 43  
 4. Article 42

Question ID : 264330180057  
Option 1 ID : 264330706211  
Option 2 ID : 264330706214  
Option 3 ID : 264330706213  
Option 4 ID : 264330706212  
Status : Answered  
Chosen Option : 4

Q.23 Which of the following is an example of igneous rock?

- Ans  1. Breccia  
 2. Chert  
 3. Conglomerate  
 4. Rhyolite

Question ID : 264330131680  
Option 1 ID : 264330515821  
Option 2 ID : 264330515822  
Option 3 ID : 264330515820  
Option 4 ID : 264330515819  
Status : Answered  
Chosen Option : 2

**Q.24** Siddi Dhamal is performed in which of the following states as a dance to celebrate successful hunting activity?.

- Ans**
- 1. Rajasthan
  - 2. Punjab
  - 3. Haryana
  - 4. Gujarat

Question ID : 264330110420  
Option 1 ID : 264330433957  
Option 2 ID : 264330433959  
Option 3 ID : 264330433960  
Option 4 ID : 264330433958  
Status : Answered  
Chosen Option : 1

**Q.25** Who among the following was the Sultan of the Delhi Sultanate when the Bahmani Kingdom was established in South India?

- Ans**
- 1. Ghiyasuddin Tughluq
  - 2. Muhammad Bin Tughluq
  - 3. Nasir-ud-din Mohammed Tughluq
  - 4. Firuz Shah Tughluq

Question ID : 264330119763  
Option 1 ID : 264330469327  
Option 2 ID : 264330469330  
Option 3 ID : 264330469329  
Option 4 ID : 264330469328  
Status : Answered  
Chosen Option : 3

**Q.26** It is a Fundamental Duty of parents to provide educational opportunities to wards aged \_\_\_\_\_.

- Ans**
- 1. 7-14 years
  - 2. 6-16 years
  - 3. 6-14 years
  - 4. 6-15 years

Question ID : 264330130778  
Option 1 ID : 264330512224  
Option 2 ID : 264330512226  
Option 3 ID : 264330512225  
Option 4 ID : 264330512223  
Status : Answered  
Chosen Option : 3

Q.27 Which of the following pairs regarding the judicial powers of the Indian President and their definition is INCORRECTLY matched?

- Ans
- 1. Commutation – It denotes the substitution of one form of punishment for a lighter form
  - 2. Respite – It denotes awarding a lesser sentence in place of that which was originally awarded
  - 3. Reprieve – It implies reducing the period of sentence without changing its character
  - 4. Pardon – it removes both the sentences and the conviction

Question ID : 264330130468  
Option 1 ID : 264330510984  
Option 2 ID : 264330510985  
Option 3 ID : 264330510986  
Option 4 ID : 264330510983  
Status : Answered  
Chosen Option : 3

Q.28 Which of the following is an RBI-registered NBFC- MFI that works on a Joint Liability Group lending model of Grameen?

- Ans
- 1. Asirvad Microfinance Limited
  - 2. ESAF Microfinance and Investments (P) Ltd
  - 3. Fusion Microfinance Pvt Ltd
  - 4. BSS Microfinance Limited

Question ID : 264330116500  
Option 1 ID : 264330458085  
Option 2 ID : 264330458087  
Option 3 ID : 264330458088  
Option 4 ID : 264330458086  
Status : Not Attempted and Marked For Review  
Chosen Option : --

Q.29 Which of the following is an example of subsistence crop of Uttar Pradesh?

- Ans
- 1. Jute
  - 2. Cotton
  - 3. Wheat
  - 4. Sugarcane

Question ID : 264330119879  
Option 1 ID : 264330469791  
Option 2 ID : 264330469794  
Option 3 ID : 264330469792  
Option 4 ID : 264330469793  
Status : Answered  
Chosen Option : 4

Q.30 Annie Besant was a Fabian socialist under the influence of \_\_\_\_\_.

- Ans  1. Charles Turner  
 2. George Bernard Shaw  
 3. Sigmund Freud  
 4. Arthur Miller

Question ID : 264330119028  
Option 1 ID : 264330466769  
Option 2 ID : 264330466767  
Option 3 ID : 264330466768  
Option 4 ID : 264330466770  
Status : Answered  
Chosen Option : 4

Q.31 Ibn Battuta's book of travels, called Rihla was originally written in:

- Ans  1. Persian  
 2. Prakrit  
 3. Arabic  
 4. Urdu

Question ID : 264330111377  
Option 1 ID : 264330437593  
Option 2 ID : 264330437596  
Option 3 ID : 264330437595  
Option 4 ID : 264330437594  
Status : Answered  
Chosen Option : 3

Q.32 Which Article of the Indian Constitution states that no citizen of India shall accept any title from any foreign State?

- Ans  1. Article 18 (3)  
 2. Article 18 (4)  
 3. Article 18 (2)  
 4. Article 18 (1)

Question ID : 264330180046  
Option 1 ID : 264330706169  
Option 2 ID : 264330706170  
Option 3 ID : 264330706168  
Option 4 ID : 264330706167  
Status : Not Attempted and Marked For Review  
Chosen Option : --

Q.33 Anantha R Krishnan is a famous \_\_\_\_\_ player.

- Ans  1. flute  
 2. mridangam  
 3. santoor  
 4. sitar

Question ID : 264330111962  
Option 1 ID : 264330439934  
Option 2 ID : 264330439933  
Option 3 ID : 264330439936  
Option 4 ID : 264330439935  
Status : Answered  
Chosen Option : 2

**Q.34** Prior to India, which country introduced Five-Year Plans for policy-making purposes?

- Ans
- 1. Great Britain
  - 2. Germany
  - 3. The US
  - 4. The Union of Soviet Socialist Republics

Question ID : 264330111737  
Option 1 ID : 264330439034  
Option 2 ID : 264330439036  
Option 3 ID : 264330439033  
Option 4 ID : 264330439035  
Status : Answered  
Chosen Option : 4

**Q.35** The Great Bath in Mohenjo-Daro was excavated in which of the following areas?

- Ans
- 1. Citadel
  - 2. Residential complex
  - 3. Lower town
  - 4. House courtyard

Question ID : 264330109639  
Option 1 ID : 264330430834  
Option 2 ID : 264330430836  
Option 3 ID : 264330430833  
Option 4 ID : 264330430835  
Status : Answered  
Chosen Option : 2

**Q.36** Which of the following options is/are correct about cropland ecosystem?

Statement 1. Cropland is a man-made ecosystem.

Statement 2. Very less genetic diversity is found in cropland ecosystem.

- Ans
- 1. Only statement 1 correct
  - 2. Both statements 1 and 2 correct
  - 3. Both statements 1 and 2 incorrect
  - 4. Only statement 2 correct

Question ID : 264330131804  
Option 1 ID : 264330516315  
Option 2 ID : 264330516318  
Option 3 ID : 264330516317  
Option 4 ID : 264330516316  
Status : Answered  
Chosen Option : 2

**Q.37** Bharatanatyam has originated from which of these states?

- Ans
- 1. Tamil Nadu
  - 2. Maharashtra
  - 3. Andhra Pradesh
  - 4. Telangana

Question ID : 264330109276  
Option 1 ID : 264330429382  
Option 2 ID : 264330429381  
Option 3 ID : 264330429384  
Option 4 ID : 264330429383  
Status : Answered  
Chosen Option : 1

**Q.38** Who won India's first medal at the Tokyo Olympics 2021?

- Ans  1. Lovlina Borgohain  
 2. Mirabai Chanu  
 3. Mary Kom  
 4. PV Sindhu

Question ID : 264330119259  
Option 1 ID : 264330467326  
Option 2 ID : 264330467324  
Option 3 ID : 264330467323  
Option 4 ID : 264330467325  
Status : Answered  
Chosen Option : 2

**Q.39** Which of the following is NOT a noble gas?

- Ans  1. Argon (Ar)  
 2. Nitrogen (N)  
 3. Neon (Ne)  
 4. Helium (He)

Question ID : 264330173653  
Option 1 ID : 264330681093  
Option 2 ID : 264330681094  
Option 3 ID : 264330681092  
Option 4 ID : 264330681091  
Status : Answered  
Chosen Option : 2

**Q.40** National income at current prices are calculated based on \_\_\_\_\_

- Ans  1. constant prices  
 2. future prices  
 3. comparative prices  
 4. prevailing prices

Question ID : 264330120878  
Option 1 ID : 264330473728  
Option 2 ID : 264330473729  
Option 3 ID : 264330473730  
Option 4 ID : 264330473727  
Status : Answered  
Chosen Option : 1

Q.41 Which of the following is the correct match between column-A and column-B?

**Column-A**

- i. Producer
- ii. Primary consumer
- iii. Secondary consumer
- iv. Decomposer

**Column-B**

- a. Rabbit
- b. Green plants
- c. Bacteria and fungus
- d. Fox

- Ans
- 1. i-b, ii-a, iii-d, iv-c
  - 2. i-d, ii-c, iii-b, iv-a
  - 3. i-a, ii-b, iii-c, iv-d
  - 4. i-c, ii-d, iii-a, iv-b

Question ID : 264330111896  
Option 1 ID : 264330439671  
Option 2 ID : 264330439672  
Option 3 ID : 264330439669  
Option 4 ID : 264330439670  
Status : Answered  
Chosen Option : 1

Q.42 The much-loved English novel, 'Alice's Adventures in Wonderland' was written by which of the following authors?

- Ans
- 1. Herman Melville
  - 2. Edgar Allan Poe
  - 3. Lewis Carroll
  - 4. Mary Shelly

Question ID : 26433055369  
Option 1 ID : 264330216462  
Option 2 ID : 264330216463  
Option 3 ID : 264330216460  
Option 4 ID : 264330216461  
Status : Answered  
Chosen Option : 4

Q.43 Which of the following words were added in the Preamble by the Forty-second Amendment Act?

- Ans
- 1. Justice, social
  - 2. Fraternity assuring dignity
  - 3. Liberty of thought
  - 4. Socialist, secular

Question ID : 264330110560  
Option 1 ID : 264330434517  
Option 2 ID : 264330434520  
Option 3 ID : 264330434519  
Option 4 ID : 264330434518  
Status : Answered  
Chosen Option : 4

**Q.44** Identify the scheme that was launched by the Prime Minister on 8 April 2015 for providing loans upto ₹10 lakh to the non-corporate, non-farm small/micro enterprises?

- Ans
- 1. Bharat Rojgar Yojana
  - 2. Pradhan Mantri Mudra Yojana
  - 3. Mahatma Gandhi National Rural Employment Guarantee Act
  - 4. Pradhan Mantri Shram Yogi Maan-dhan

Question ID : 264330130603  
Option 1 ID : 264330511526  
Option 2 ID : 264330511523  
Option 3 ID : 264330511524  
Option 4 ID : 264330511525  
Status : Answered  
Chosen Option : 2

**Q.45** According to the census of India 2011, which group of states and union territories from the following recorded the highest literacy rate?

- Ans
- 1. Goa and Lakshadweep
  - 2. Mizoram and Delhi
  - 3. Kerala and Lakshadweep
  - 4. Kerala and Puducherry

Question ID : 264330167029  
Option 1 ID : 264330655120  
Option 2 ID : 264330655122  
Option 3 ID : 264330655121  
Option 4 ID : 264330655119  
Status : Answered  
Chosen Option : 3

**Q.46** Who among the following founded the Forward Bloc in 1939?

- Ans
- 1. Mahatma Gandhi
  - 2. Chittaranjan Das
  - 3. Subhash Chandra Bose
  - 4. Jawaharlal Nehru

Question ID : 264330119004  
Option 1 ID : 264330466671  
Option 2 ID : 264330466674  
Option 3 ID : 264330466673  
Option 4 ID : 264330466672  
Status : Answered  
Chosen Option : 3

**Q.47** The Pradhan Mantri Garib Kalyan Yojana (PMGKY) was launched in the year \_\_\_\_\_.

- Ans
- 1. 2014
  - 2. 2017
  - 3. 2016
  - 4. 2015

Question ID : 264330110010  
Option 1 ID : 264330432317  
Option 2 ID : 264330432320  
Option 3 ID : 264330432319  
Option 4 ID : 264330432318  
Status : Answered  
Chosen Option : 1

**Q.48** Who among the following Bharatnatyam dancers received the prestigious Natya Kalanidhi award in 2021?

- Ans**  1. Chitra Visweswaran  
 2. Padma Subrahmanyam  
 3. Guru Bipin Singh  
 4. Pandit Birju Maharaj

Question ID : 264330112873  
Option 1 ID : 264330443580  
Option 2 ID : 264330443579  
Option 3 ID : 264330443578  
Option 4 ID : 264330443577  
Status : Answered  
Chosen Option : 2

**Q.49** Who among the following was known for creating fusion arts by adapting European theatrical techniques to Indian Classical dance combined with Indian folk and tribal dance?

- Ans**  1. Uday Shankar  
 2. Kelucharan Mahopatra  
 3. Vempsi Chinna Satyam  
 4. Bipin Singh

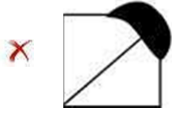
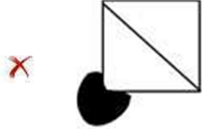

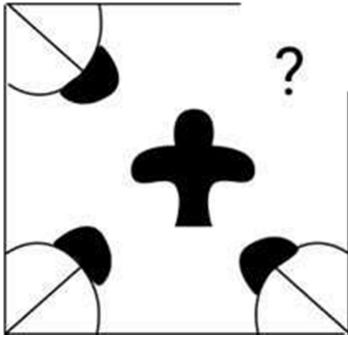
Question ID : 264330111967  
Option 1 ID : 264330439955  
Option 2 ID : 264330439953  
Option 3 ID : 264330439956  
Option 4 ID : 264330439954  
Status : Answered  
Chosen Option : 1

**Q.50** The great poet and humanist writer Rabindra Nath Thakur returned his knighthood in protest of which incident?

- Ans**  1. Bengal partition, 1905  
 2. Pitt's India Act of 1784  
 3. Kamagatamaru case, 1914  
 4. Jallianwala Bagh Massacre, 1919

Question ID : 264330123743  
Option 1 ID : 264330485007  
Option 2 ID : 264330485010  
Option 3 ID : 264330485008  
Option 4 ID : 264330485009  
Status : Answered  
Chosen Option : 4

Section : Reasoning



Q.2 Which figure should replace the question mark (?) if the following series were to be continued?

L D 3 A	B L D R	= □ L D	A = □ R	3 S = □	
S	A	B	D	A	?
B = □ R	= □ 3 S	A 3 S R	3 S L B	D L B R	

Ans

1.

= 3 S A
□
B D L R

2.

S = B R
□
3 D L A

3.

D 3 S R
□
L B = A

4.

D 3 S =
□
L B R A

Question ID : 264330103898

Option 1 ID : 264330407896

Option 2 ID : 264330407893

Option 3 ID : 264330407895

Option 4 ID : 264330407894

Status : Answered

Chosen Option : 4

Q.3 Which of the following options will replace the question mark (?) in the given series?  
9000, 7200, 5760, ?, 3686.4

Ans  1. 4600

2. 3860

3. 4608

4. 3456

Question ID : 264330109436

Option 1 ID : 264330430023

Option 2 ID : 264330430024

Option 3 ID : 264330430021

Option 4 ID : 264330430022

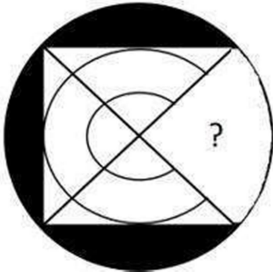
Status : Answered

Chosen Option : 3

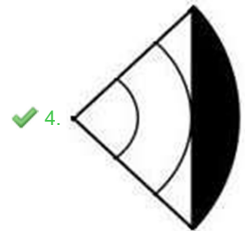
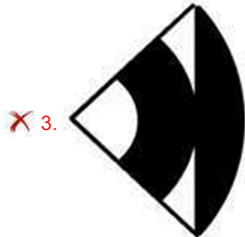
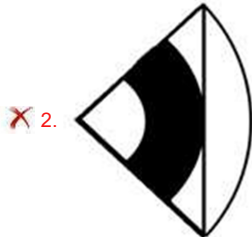
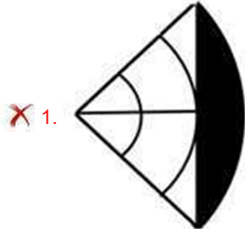
Which of the following option figures will complete the pattern in the figure given below?



**Q.5** Select the figure from the options that can replace the question mark (?) and complete the given pattern.



**Ans**



Question ID : 26433082913

Option 1 ID : 264330325485

Option 2 ID : 264330325488

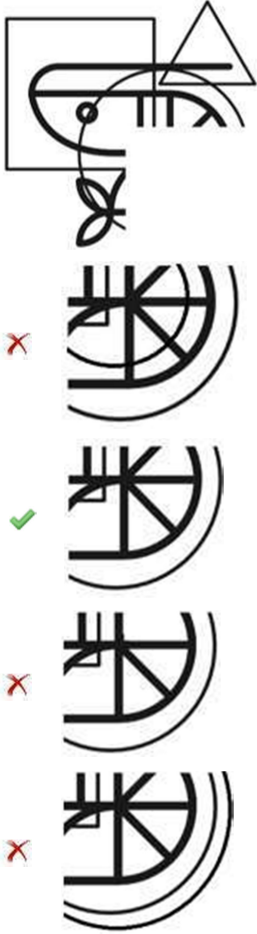
Option 3 ID : 264330325487

Option 4 ID : 264330325486

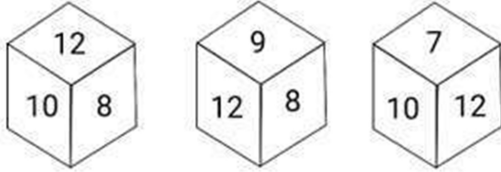
Status : Answered

Chosen Option : 4

Which of the following option figures will complete the pattern in the figure given below?



Q.7 Six numbers, 7, 8, 9, 10, 11 and 12 are written on different faces of a dice. Three positions of this dice are shown here. Find the number on the face opposite 12.



- Ans
- 1. 10
  - 2. 9
  - 3. 11
  - 4. 8

Question ID : 264330106398  
 Option 1 ID : 264330417895  
 Option 2 ID : 264330417894  
 Option 3 ID : 264330417896  
 Option 4 ID : 264330417893  
 Status : Answered  
 Chosen Option : 3

Q.8 Select the correct combination of mathematical signs to sequentially replace the \* signs and to balance the given equation.

$$198 * 11 * 18 * 20 * 50 * 294$$

- Ans
- 1. ÷, ×, =, +, -
  - 2. ÷, +, ×, -, =
  - 3. ÷, ×, -, +, =
  - 4. ÷, ×, +, -, =

Question ID : 26433076550  
 Option 1 ID : 264330300267  
 Option 2 ID : 264330300265  
 Option 3 ID : 264330300264  
 Option 4 ID : 264330300266  
 Status : Answered  
 Chosen Option : 4

Q.9 Read the given statements and conclusions carefully. Assuming that the information given in the statements is true, even if it appears to be at variance with commonly known facts, decide which of the given conclusions logically follow(s) from the statements.

Statements:

Some roses are lilies.

Some lilies are jasmine.

Conclusions:

I. Some jasmines are roses.

II. All jasmines are roses.

- Ans
- 1. Only conclusion II follows
  - 2. Neither conclusion I nor II follows
  - 3. Both conclusions I and II follow
  - 4. Only conclusion I follows

Question ID : 26433069508  
 Option 1 ID : 264330272545  
 Option 2 ID : 264330272547  
 Option 3 ID : 264330272546  
 Option 4 ID : 264330272544  
 Status : Answered  
 Chosen Option : 2

Q.10 Which of the following option figures will complete the pattern in the figure given below?

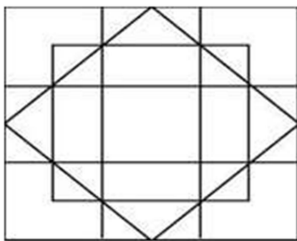


Ans



Question ID : 26433080610  
 Option 1 ID : 264330316375  
 Option 2 ID : 264330316374  
 Option 3 ID : 264330316373  
 Option 4 ID : 264330316376  
 Status : Answered  
 Chosen Option : 1

Q.11 How many triangles are there in the given figure?



Ans

✗ 1. 32

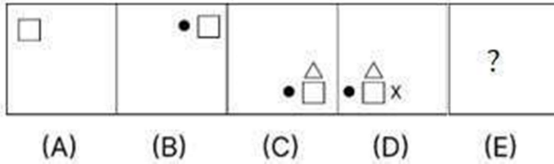
✗ 2. 24

✓ 3. 28

✗ 4. 20

Question ID : 26433091712  
 Option 1 ID : 264330360216  
 Option 2 ID : 264330360215  
 Option 3 ID : 264330360214  
 Option 4 ID : 264330360213  
 Status : Answered  
 Chosen Option : 3

Q.12 Given below is a series of figures – A, B, C and D which follow a particular pattern. Which of the given option figures should come in place of E to continue the series?



Ans

- 1.
- 2.
- 3.
- 4.

Question ID : 264330111291

Option 1 ID : 264330437249

Option 2 ID : 264330437252

Option 3 ID : 264330437250

Option 4 ID : 264330437251

Status : Answered

Chosen Option : 2

Q.13 Select the option that is related to the third word in the same way as the second word is related to the first word.

(The words must be considered as meaningful English words and must not be related to each other based on the number of letters/number of consonants/vowels in the word)

Virus : Influenza :: Fungus : ?

- 1. Algae
- 2. Amaltas
- 3. Bacteria
- 4. Aspergilliosis

Question ID : 26433070281

Option 1 ID : 264330275602

Option 2 ID : 264330275601

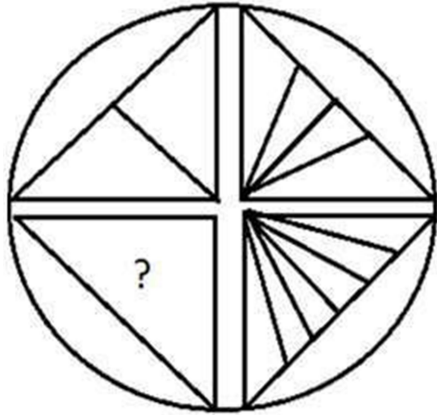
Option 3 ID : 264330275603

Option 4 ID : 264330275600

Status : Answered

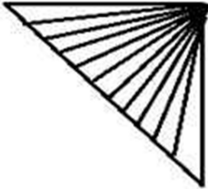
Chosen Option : 4

Q.14 Select the option figure that will replace the question mark (?) in the figure given below to complete the pattern.

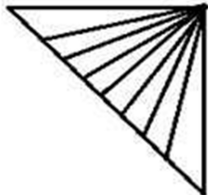


Ans

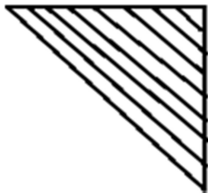
1.



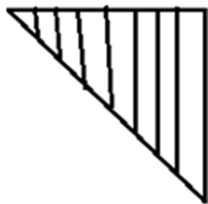
2.



3.



4.



Question ID : 264330118230  
Option 1 ID : 264330464738  
Option 2 ID : 264330464737  
Option 3 ID : 264330464736  
Option 4 ID : 264330464735  
Status : Answered  
Chosen Option : 2

Q.15 Select the option that is related to the fourth term in the same way as the first term is related to the second term and the fifth term is related to the sixth term.

7 : 46 :: ? : 78 :: 11 : 118

- Ans
- 1. 13
  - 2. 11
  - 3. 9
  - 4. 10

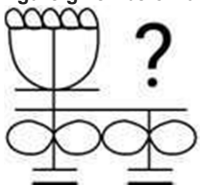
Question ID : 26433052093  
Option 1 ID : 264330203677  
Option 2 ID : 264330203676  
Option 3 ID : 264330203674  
Option 4 ID : 264330203675  
Status : Answered  
Chosen Option : 3

Q.16 Which of the following terms will replace the question mark (?) in the given series?  
KYIB, IUKF, GQMJ, ?, CIQR

- Ans
- 1. HNON
  - 2. ENOM
  - 3. HMNO
  - 4. EMON

Question ID : 264330102175  
Option 1 ID : 264330401165  
Option 2 ID : 264330401168  
Option 3 ID : 264330401167  
Option 4 ID : 264330401166  
Status : Answered  
Chosen Option : 4

Q.17 Select the figure from the given options that will replace the question mark (?) in the figure given below and complete the pattern.



- Ans
- 1.
  - 2.
  - 3.
  - 4.

Question ID : 264330111712  
Option 1 ID : 264330438933  
Option 2 ID : 264330438934  
Option 3 ID : 264330438936  
Option 4 ID : 264330438935  
Status : Answered  
Chosen Option : 1

Q.18 Select the correct mirror image of the given figure when the mirror is placed at 'AB' as shown.



Ans

- 1. V 2 33 5 t e
- 2. V 2 33 5 t e
- 3. V 2 33 5 t e
- 4. e t 5 33 2 V

Question ID : 264330114699

Option 1 ID : 264330450882

Option 2 ID : 264330450884

Option 3 ID : 264330450881

Option 4 ID : 264330450883

Status : Answered

Chosen Option : 2

Q.19 Select the correct mirror image of the given combination when the mirror is placed at 'XY' as shown below.



Ans

- 1. V N I 2 e 3 4 D
- 2. D Q Z 6 5 I N A
- 3. D 0 Z 9 5 I N V
- 4. D 0 2 e 3 I N A

Question ID : 264330129693

Option 1 ID : 264330508139

Option 2 ID : 264330508141

Option 3 ID : 264330508138

Option 4 ID : 264330508140

Status : Answered

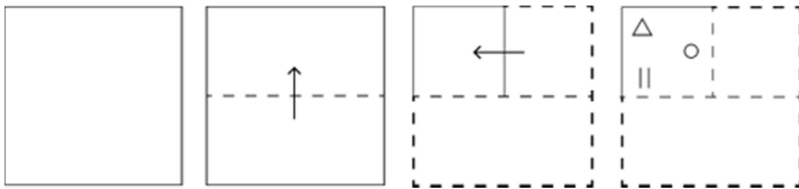
Chosen Option : 4

Q.20 Select the correct combination of mathematical signs to sequentially replace the \* signs and to balance the given equation.  
 $242 * 11 * 76 * 34 * 2 * 32$

- Ans
- 1.  $\div - + \times =$
  - 2.  $\div + - \times =$
  - 3.  $+ \div - = \times$
  - 4.  $\div + - = \times$

Question ID : 26433085722  
 Option 1 ID : 264330336591  
 Option 2 ID : 264330336589  
 Option 3 ID : 264330336592  
 Option 4 ID : 264330336590  
 Status : Answered  
 Chosen Option : 4

Q.21 A square sheet of paper is folded along the dotted line successively along the directions shown and is then punched in the last. How would the paper look when unfolded?



Ans

- 1.
- 2.
- 3.
- 4.

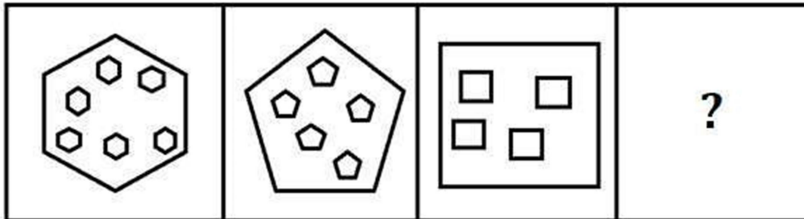
Question ID : 264330172431  
 Option 1 ID : 264330676277  
 Option 2 ID : 264330676275  
 Option 3 ID : 264330676278  
 Option 4 ID : 264330676276  
 Status : Answered  
 Chosen Option : 4

Q.22 C, D, E, F, M and N are sitting around a circular table facing the centre. D sits second to the right of M. F sits to the immediate left of N. N is not an immediate neighbour of D. C is not an immediate neighbour of D. Who among the following is an immediate neighbour of E?

- Ans
- 1. N
  - 2. F
  - 3. D
  - 4. C

Question ID : 264330104021  
 Option 1 ID : 264330408387  
 Option 2 ID : 264330408385  
 Option 3 ID : 264330408386  
 Option 4 ID : 264330408388  
 Status : Answered  
 Chosen Option : 3

Q.23 Select the figure that will come next in the following figure series.



Ans

- 1.
- 2.
- 3.
- 4.

Question ID : 264330129653  
 Option 1 ID : 264330507980  
 Option 2 ID : 264330507979  
 Option 3 ID : 264330507981  
 Option 4 ID : 264330507978  
 Status : Answered  
 Chosen Option : 1

**Q.24** In a certain code language, 'CALIBER' is written as 'ECNGDGT' and 'BURNING' is written as 'DWTLPKI'. How will 'AUCTION' be written in that language?

- Ans
- 1. BVERQKST
  - 2. CVBTKQR
  - 3. BWDSKPR
  - 4. CWERKQP

Question ID : 26433089418  
Option 1 ID : 264330351173  
Option 2 ID : 264330351175  
Option 3 ID : 264330351176  
Option 4 ID : 264330351174  
Status : Answered  
Chosen Option : 4

**Q.25** Select the set in which the numbers are related in the same way as are the numbers of the following sets.

(NOTE : Operations should be performed on the whole numbers, without breaking down the numbers into its constituent digits. E.g. 13 – Operations on 13 such as adding/deleting/multiplying etc. to 13 can be performed. Breaking down 13 into 1 and 3 and then performing mathematical operations on 1 and 3 is NOT allowed)  
(40, 253, 17)  
(30, 187, 13)

- Ans
- 1. (50, 385, 15)
  - 2. (25, 100, 15)
  - 3. (40, 240, 20)
  - 4. (17, 77, 9)

Question ID : 26433097438  
Option 1 ID : 264330382443  
Option 2 ID : 264330382442  
Option 3 ID : 264330382441  
Option 4 ID : 264330382444  
Status : Answered  
Chosen Option : 1

Section : Numerical Ability



**Q.2** A shopkeeper marks an article 35% above the cost price, and offers 20% discount on the marked price, what is his gain percentage?

- Ans  1. 8%  
 2. 7%  
 3. 5%  
 4. 9%

Question ID : 264330168926  
Option 1 ID : 264330662510  
Option 2 ID : 264330662508  
Option 3 ID : 264330662507  
Option 4 ID : 264330662509  
Status : Answered  
Chosen Option : 1

**Q.3** What is the unit digit of the product of all the prime numbers between 51 and 78?

- Ans  1. 2  
 2. 3  
 3. 7  
 4. 6

Question ID : 264330104275  
Option 1 ID : 264330409403  
Option 2 ID : 264330409404  
Option 3 ID : 264330409402  
Option 4 ID : 264330409401  
Status : Answered  
Chosen Option : 3

**Q.4** If a box was sold at a loss of ₹350 for ₹4,650, then the percentage loss is equal to:

- Ans  1. 7%  
 2. 6%  
 3. 5%  
 4. 8%

Question ID : 264330169418  
Option 1 ID : 264330664429  
Option 2 ID : 264330664428  
Option 3 ID : 264330664427  
Option 4 ID : 264330664430  
Status : Answered  
Chosen Option : 1

**Q.5** The product of the LCM and HCF of two numbers is 48. The difference between the two numbers is 13. Find the numbers.

- Ans  1. 9 and 22  
 2. 6 and 19  
 3. 3 and 16  
 4. 10 and 23

Question ID : 264330104267  
Option 1 ID : 264330409372  
Option 2 ID : 264330409369  
Option 3 ID : 264330409370  
Option 4 ID : 264330409371  
Status : Answered  
Chosen Option : 3

**Q.6** The slant height of a cone is 5 cm and its diameter is 8 cm. What is the volume of the cone (correct to two decimal places)? (Where  $\pi = \frac{22}{7}$ )

- Ans**
- 1. 35.66 cm<sup>3</sup>
  - 2. 50.28 cm<sup>3</sup>
  - 3. 59.82 cm<sup>3</sup>
  - 4. 28.28 cm<sup>3</sup>

Question ID : 264330118142  
Option 1 ID : 264330464384  
Option 2 ID : 264330464385  
Option 3 ID : 264330464386  
Option 4 ID : 264330464383  
Status : Answered  
Chosen Option : 2

**Q.7** After a 15% decline, the income of Ajay stands at ₹2,12,500. What was his original income (in ₹)?

- Ans**
- 1. 2,25,000
  - 2. 1,80,625
  - 3. 2,50,000
  - 4. 2,40,000

Question ID : 264330103308  
Option 1 ID : 264330405540  
Option 2 ID : 264330405538  
Option 3 ID : 264330405539  
Option 4 ID : 264330405537  
Status : Answered  
Chosen Option : 3

**Q.8** In a 600 m race, A gave B a head start of 5 seconds and still won the race by 20 seconds. If the ratio of the speed of A to the speed of B is 2 : 1, then the speed of B is:

- Ans**
- 1. 21 m/sec
  - 2. 12 m/sec
  - 3. 10 m/sec
  - 4. 18 m/sec

Question ID : 264330168935  
Option 1 ID : 264330662546  
Option 2 ID : 264330662544  
Option 3 ID : 264330662543  
Option 4 ID : 264330662545  
Status : Answered  
Chosen Option : 2

**Q.9** There are 50 students in a class. The average marks of 20 students is 70 and the remaining 30 have average marks of 80. Calculate the average score of the whole class.

- Ans  1. 70  
 2. 75  
 3. 76  
 4. 74

Question ID : 264330126555  
Option 1 ID : 264330495892  
Option 2 ID : 264330495894  
Option 3 ID : 264330495893  
Option 4 ID : 264330495895  
Status : Answered  
Chosen Option : 3

**Q.10** A man borrowed a sum of money and agreed to pay off by paying ₹4,200 at the end of the first year and ₹4,410 at the end of the second year. If the rate of compound interest was 5% per annum, find the sum borrowed.

- Ans  1. ₹7,500  
 2. ₹7,000  
 3. ₹8,500  
 4. ₹8,000

Question ID : 264330104317  
Option 1 ID : 264330409570  
Option 2 ID : 264330409569  
Option 3 ID : 264330409572  
Option 4 ID : 264330409571  
Status : Answered  
Chosen Option : 4

**Q.11** By what percentage should a woman increase the speed of her car to reduce the time by 80% to cover a fixed distance?

- Ans  1. 400%  
 2. 100%  
 3. 300%  
 4. 200%

Question ID : 264330112845  
Option 1 ID : 264330443467  
Option 2 ID : 264330443466  
Option 3 ID : 264330443468  
Option 4 ID : 264330443465  
Status : Answered  
Chosen Option : 1

Q.12 A, B, C work one after the other in that order. Each can finish a work individually in 10, 16, 12 days, respectively. After working for 3 such cycles ABC, ABC, ABC, then A and C leave the work. B alone will complete the rest of the work in:

Ans

- 1.  $4\frac{1}{5}$  days
- 2.  $1\frac{4}{5}$  days
- 3.  $5\frac{4}{5}$  days
- 4.  $5\frac{1}{4}$  days

Question ID : 264330103748  
Option 1 ID : 264330407297  
Option 2 ID : 264330407299  
Option 3 ID : 264330407298  
Option 4 ID : 264330407300  
Status : Answered  
Chosen Option : 1

Q.13 An ice cream cone is to be made to have volume  $\frac{128}{3}\pi$  and the height of the cone is double the radius of the cone. What is the slant height of the cone?

Ans

- 1.  $\sqrt{40}$
- 2.  $\sqrt{90}$
- 3.  $\sqrt{60}$
- 4.  $\sqrt{80}$

Question ID : 264330112120  
Option 1 ID : 264330440567  
Option 2 ID : 264330440568  
Option 3 ID : 264330440565  
Option 4 ID : 264330440566  
Status : Answered  
Chosen Option : 4

Q.14 Which of the following is a pair of co-primes?

Ans

- 1. (7, 35)
- 2. (217, 651)
- 3. (32, 62)
- 4. (198, 175)

Question ID : 264330105984  
Option 1 ID : 264330416237  
Option 2 ID : 264330416239  
Option 3 ID : 264330416240  
Option 4 ID : 264330416238  
Status : Answered  
Chosen Option : 1

Let  $x = 5, y = 8$ . Arrange the following numbers in ascending order.

$$\frac{x+1}{y-1}, \frac{2x}{2y-3}, \frac{y+1}{2x-1}, \frac{y+1}{3x-y}$$

✗  $\frac{2x}{2y-3}, \frac{x+1}{y-1}, \frac{y+1}{3x-y}, \frac{y+1}{2x-1}$

✗  $\frac{2x}{2y-3}, \frac{y+1}{2x-1}, \frac{x+1}{y-1}, \frac{y+1}{3x-y}$

✓  $\frac{2x}{2y-3}, \frac{x+1}{y-1}, \frac{y+1}{2x-1}, \frac{y+1}{3x-y}$

✗  $\frac{x+1}{y-1}, \frac{2x}{2y-3}, \frac{y+1}{2x-1}, \frac{y+1}{3x-y}$

Section : Computer Proficiency

Q.1 In MS-Word 2010, Page number option comes under which of the following menus?

- Ans
- ✗ 1. Pages
  - ✓ 2. Header and Footer
  - ✗ 3. Home Tab
  - ✗ 4. Page layout

Question ID : 264330176705  
Option 1 ID : 264330693038  
Option 2 ID : 264330693035  
Option 3 ID : 264330693037  
Option 4 ID : 264330693036  
Status : Answered  
Chosen Option : 1

Q.2 In MS Excel 365, when entering data into an MS Excel 365 spreadsheet, which data type is most suitable for a person's first name?

- Ans
- ✗ 1. Date
  - ✗ 2. Currency
  - ✓ 3. Text
  - ✗ 4. Number

Question ID : 264330178569  
Option 1 ID : 264330700303  
Option 2 ID : 264330700306  
Option 3 ID : 264330700304  
Option 4 ID : 264330700305  
Status : Answered  
Chosen Option : 3

**Q.3** Which option allows you to adjust the line spacing between lines of text in a paragraph in MS-Word 365?

- Ans**
- 1. Line Spacing
  - 2. Text Indentation
  - 3. Paragraph Border
  - 4. Paragraph Alignment

Question ID : 264330173333  
Option 1 ID : 264330679813  
Option 2 ID : 264330679811  
Option 3 ID : 264330679814  
Option 4 ID : 264330679812  
Status : Answered  
Chosen Option : 1

**Q.4** What is the default print range in Microsoft Excel 365, when printing an entire worksheet?

- Ans**
- 1. Entire Workbook
  - 2. Active Sheet
  - 3. Selected Range
  - 4. All Sheets

Question ID : 264330178082  
Option 1 ID : 264330698394  
Option 2 ID : 264330698392  
Option 3 ID : 264330698393  
Option 4 ID : 264330698391  
Status : Answered  
Chosen Option : 2

**Q.5** In MS Excel 365, you are working on an Excel worksheet and need to select an entire row above the current row. Which keyboard shortcut combination should you use?

- Ans**
- 1. Ctrl + Spacebar
  - 2. Shift + Spacebar
  - 3. Alt + Spacebar
  - 4. Ctrl + +

Question ID : 264330182782  
Option 1 ID : 264330716900  
Option 2 ID : 264330716899  
Option 3 ID : 264330716902  
Option 4 ID : 264330716901  
Status : Not Attempted and Marked For Review  
Chosen Option : --

Q.6 Which of the following is NOT a layer of the Internet Protocol Suite (TCP/IP)?

- Ans  1. Application layer  
 2. Physical layer  
 3. Network layer  
 4. Transport layer

Question ID : 264330178552  
Option 1 ID : 264330700235  
Option 2 ID : 264330700238  
Option 3 ID : 264330700237  
Option 4 ID : 264330700236  
Status : Answered  
Chosen Option : 2

Q.7 In MS Word 365, what happens when you select text and then press the 'Backspace' key?

- Ans  1. The text is moved to the end of the document  
 2. The text is formatted with a bold style  
 3. The text is copied to the clipboard  
 4. The text is deleted to the left of the cursor

Question ID : 264330180855  
Option 1 ID : 264330709386  
Option 2 ID : 264330709384  
Option 3 ID : 264330709383  
Option 4 ID : 264330709385  
Status : Answered  
Chosen Option : 4

Q.8 Which of the following operations is done using shortcut key Ctrl + Shift + > in MS Word 365?

- Ans  1. Increase the font size  
 2. Decrease the font size  
 3. Left Alignment of text  
 4. Right Alignment of text

Question ID : 264330180445  
Option 1 ID : 264330707747  
Option 2 ID : 264330707748  
Option 3 ID : 264330707749  
Option 4 ID : 264330707750  
Status : Answered  
Chosen Option : 1

Q.9 Which formatting feature in MS Word 365, is used to emphasise text by making it bold, italic or underlined in documents?

- Ans  1. Hyperlinking  
 2. Page margins  
 3. Font styling  
 4. Text wrapping

Question ID : 264330178578  
Option 1 ID : 264330700340  
Option 2 ID : 264330700342  
Option 3 ID : 264330700341  
Option 4 ID : 264330700339  
Status : Answered  
Chosen Option : 3

Q.10 An attachment in an E-mail can be:

- 1) Digital photos
- 2) Documents

- Ans
- 1. Only (2)
  - 2. Only (1)
  - 3. Both (1) and (2)
  - 4. Neither (1) nor (2)

Question ID : 264330175931  
Option 1 ID : 264330690020  
Option 2 ID : 264330690019  
Option 3 ID : 264330690021  
Option 4 ID : 264330690022  
Status : Answered  
Chosen Option : 3

## Constable Executive Male and Female in Delhi Police Examination 2023

Roll Number	
Candidate Name	
Venue Name	Jaipur Engineering College
Exam Date	14/11/2023
Exam Time	12:00 PM - 1:30 PM
Subject	Constable Executive Male and Female in Delhi Police Examination 2023

Section : General Knowledge

Q.1 Who was defeated by Chandragupta Maurya in order to found the Maurya dynasty?

- Ans
- 1. Dhana Nanda.
  - 2. Bimbisara
  - 3. Mahapadma Nanda
  - 4. Ajatshatru

Question ID : 264330119709  
Option 1 ID : 264330469114  
Option 2 ID : 264330469112  
Option 3 ID : 264330469111  
Option 4 ID : 264330469113  
Status : Answered  
Chosen Option : 2

Q.2 Any dispute between the Government of India and one or more States or between the Government of India and any State or States comes under \_\_\_\_\_ jurisdiction of the Supreme Court of India.

- Ans
- 1. Advisory
  - 2. Appellate
  - 3. Exclusive Original
  - 4. Writ

Question ID : 264330130479  
Option 1 ID : 264330511029  
Option 2 ID : 264330511028  
Option 3 ID : 264330511027  
Option 4 ID : 264330511030  
Status : Answered  
Chosen Option : 1

Q.3 Kajli Teej is the cultural festival of which Indian state?

- Ans  1. Rajasthan  
 2. Goa  
 3. West Bengal  
 4. Maharashtra

Question ID : 264330109608  
Option 1 ID : 264330430711  
Option 2 ID : 264330430710  
Option 3 ID : 264330430712  
Option 4 ID : 264330430709  
Status : Not Answered  
Chosen Option : --

Q.4 In whose presence does the Governor take oath or make affirmation in case of the absence of the Chief Justice of the High Court?

- Ans  1. Nominated judge by President  
 2. Secretary of State Legislature  
 3. Senior-most judge of High Court available  
 4. Speaker of State legislature

Question ID : 26433069888  
Option 1 ID : 264330274058  
Option 2 ID : 264330274056  
Option 3 ID : 264330274059  
Option 4 ID : 264330274057  
Status : Answered  
Chosen Option : 4

Q.5 What is the slogan of the Pradhan Mantri Jan Dhan Yojana?

- Ans  1. MeraAdhikar, MeraKhaata  
 2. Khaata, MeraAdhikar  
 3. Mera Paisa, Mere Bank Me  
 4. Mera Khaata, Bhagya Vidhaata

Question ID : 26433059311  
Option 1 ID : 264330232122  
Option 2 ID : 264330232121  
Option 3 ID : 264330232123  
Option 4 ID : 264330232120  
Status : Answered  
Chosen Option : 2

Q.6 According to Census 2011 of India, which religion recorded highest literacy rate from following?

- Ans  1. Hindu  
 2. Muslim  
 3. Jain  
 4. Sikh

Question ID : 264330138114  
Option 1 ID : 264330541064  
Option 2 ID : 264330541065  
Option 3 ID : 264330541063  
Option 4 ID : 264330541066  
Status : Not Answered  
Chosen Option : --

Q.7 In 1932, the Poona Pact was signed between Mahatma Gandhi and \_\_\_\_\_.

- Ans
- 1. C. Natesa Mudaliar
  - 2. Taravath Madhavan Nair
  - 3. Ramaswami Naicker-Periyar
  - 4. Dr. Babasaheb Ambedkar

Question ID : 264330114860  
Option 1 ID : 264330451525  
Option 2 ID : 264330451526  
Option 3 ID : 264330451528  
Option 4 ID : 264330451527  
Status : Answered  
Chosen Option : 4

Q.8 In which year did India adopt a dual exchange rate for the interim period?

- Ans
- 1. 1994
  - 2. 1990
  - 3. 1996
  - 4. 1992

Question ID : 264330109396  
Option 1 ID : 264330429863  
Option 2 ID : 264330429861  
Option 3 ID : 264330429864  
Option 4 ID : 264330429862  
Status : Not Answered  
Chosen Option : --

Q.9 The Hindi novel 'Indrajal' is written by:

- Ans
- 1. Ramdhari Singh Dinkar
  - 2. Harivansh Rai Bachchan
  - 3. Jaishankar Prasad
  - 4. Namvar Singh

Question ID : 26433072947  
Option 1 ID : 264330285980  
Option 2 ID : 264330285982  
Option 3 ID : 264330285983  
Option 4 ID : 264330285981  
Status : Not Answered  
Chosen Option : --

Q.10 Rafflesia arnoldii is famous because:

- Ans
- 1. it has the thickest trunk
  - 2. it has the largest leaves in the plant kingdom
  - 3. it is the tallest plant in the plant kingdom
  - 4. it has the largest flower in the plant kingdom

Question ID : 264330120904  
Option 1 ID : 264330473833  
Option 2 ID : 264330473834  
Option 3 ID : 264330473831  
Option 4 ID : 264330473832  
Status : Not Answered  
Chosen Option : --

**Q.11 National Investment Fund in India is a corpus fund that mobilises its financial receipts from \_\_\_\_\_.**

- Ans**
- 1. proceeds of profits of Central Public Sector Undertakings
  - 2. proceeds from disinvestment of Central Public Sector Undertakings
  - 3. savings of General Provident Fund
  - 4. contributory pension scheme

Question ID : 264330111786

Option 1 ID : 264330439232

Option 2 ID : 264330439231

Option 3 ID : 264330439230

Option 4 ID : 264330439229

Status : **Not Answered**

Chosen Option : --

Q.12 When did India host the Asian Games for the first time?

Ans  1. 1951

2. 1954

3. 1962

4. 1990

Question ID : 264330119257

Option 1 ID : 264330467317

Option 2 ID : 264330467315

Option 3 ID : 264330467316

Option 4 ID : 264330467318

Status : Answered

Chosen Option : 1

Q.13 Destruction, weathering, dissolving, rainfall, and lithification are the major geological processes that contribute to the formation of which of the following rocks?

Ans  1. Igneous rocks

2. Sedimentary rocks

3. Sub-metamorphic rocks

4. Metamorphic rocks

Question ID : 264330131816

Option 1 ID : 264330516363

Option 2 ID : 264330516364

Option 3 ID : 264330516366

Option 4 ID : 264330516365

Status : Not Answered

Chosen Option : --

Q.14 Which of the following statements are correct regarding festivals followed in Christianity?

A. Easter is the day celebrated for the 'Resurrection of Jesus Christ'.

B. According to the Bible, 'Three days after Jesus was crucified, he was resurrected'.

C. Good Friday is to commemorate the day of crucifixion of Jesus Christ.

Ans  1. A and C only

2. B and C only

3. A, B and C

4. A and B only

Question ID : 264330119656

Option 1 ID : 264330468901

Option 2 ID : 264330468900

Option 3 ID : 264330468902

Option 4 ID : 264330468899

Status : Answered

Chosen Option : 1

Q.15 Which of the following is NOT a key player in the microfinance sector?

- Ans  1. IDBI  
 2. Regional rural banks  
 3. Small finance banks  
 4. Commercial banks

Question ID : 264330119669  
Option 1 ID : 264330468952  
Option 2 ID : 264330468954  
Option 3 ID : 264330468953  
Option 4 ID : 264330468951  
Status : Not Answered  
Chosen Option : --

Q.16 The Begumpuri mosque was built during the reign of Sultan \_\_\_\_\_.

- Ans  1. Ghiyasuddin Balban  
 2. Qutbuddin Aybak  
 3. Muhammad Bin Tughluq  
 4. Jalaluddin Khalji

Question ID : 264330183098  
Option 1 ID : 264330718127  
Option 2 ID : 264330718126  
Option 3 ID : 264330718125  
Option 4 ID : 264330718124  
Status : Not Answered  
Chosen Option : --

Q.17 R Muthukannammal was conferred the Padma Shri award in 2022. Which of the following is her contribution?

- Ans  1. Working with Orissa's poor and backward communities  
 2. Specializing in the study of Indian society  
 3. Being a custodian of the early dance form of Bharatnatyam  
 4. Playing a key role in powering India's Blue Revolution

Question ID : 26433091036  
Option 1 ID : 264330357555  
Option 2 ID : 264330357554  
Option 3 ID : 264330357556  
Option 4 ID : 264330357553  
Status : Answered  
Chosen Option : 4

Q.18 Which of the following ministries collaborated with NCERT on a joint mission for the NISHTHA capacity-building programme for Eklavya school teachers and principals?

- Ans  1. Ministry of Skill Development and Entrepreneurship  
 2. Ministry of Minority Affairs  
 3. Ministry of Education  
 4. Ministry of Tribal Affairs

Question ID : 264330111589  
Option 1 ID : 264330438441  
Option 2 ID : 264330438443  
Option 3 ID : 264330438442  
Option 4 ID : 264330438444  
Status : Answered  
Chosen Option : 3

Q.19 What is the molecular mass of an ozone molecule?

Ans  1. 32

2. 48

3. 16

4. 18

Question ID : 264330177018

Option 1 ID : 264330694269

Option 2 ID : 264330694268

Option 3 ID : 264330694267

Option 4 ID : 264330694270

Status : Not Answered

Chosen Option : --

Q.20 The famous south Indian epic "Silappadikaram" was originally written in \_\_\_\_\_ language.

Ans  1. Sanskrit

2. Tamil

3. Malayalam

4. Telugu

Question ID : 264330119476

Option 1 ID : 264330468189

Option 2 ID : 264330468190

Option 3 ID : 264330468188

Option 4 ID : 264330468187

Status : Answered

Chosen Option : 2

Q.21 Jhali is the folk dance of which Indian state?

Ans  1. Uttar Pradesh

2. Madhya Pradesh

3. Bihar

4. Himachal Pradesh

Question ID : 264330141326

Option 1 ID : 264330553639

Option 2 ID : 264330553640

Option 3 ID : 264330553642

Option 4 ID : 264330553641

Status : Not Answered

Chosen Option : --

Q.22 Musician Bhajan Sopori was a Sautoor maestro from the \_\_\_\_\_ Gharana.

Ans  1. Maihar

2. Benaras

3. Punjab

4. Sufiana

Question ID : 264330112683

Option 1 ID : 264330442819

Option 2 ID : 264330442820

Option 3 ID : 264330442818

Option 4 ID : 264330442817

Status : Answered

Chosen Option : 2

Q.23 Which of the following is NOT a feature of India's parliamentary government?

- Ans  1. Dissolution of the Rajya Sabha  
 2. Presence of nominal and real executives  
 3. Membership of the ministers in the legislature  
 4. Majority party rule

Question ID : 264330114134  
Option 1 ID : 264330448624  
Option 2 ID : 264330448621  
Option 3 ID : 264330448623  
Option 4 ID : 264330448622  
Status : Answered  
Chosen Option : 2

Q.24 The Harappan city of Dholavira was divided into how many parts?

- Ans  1. 2  
 2. 4  
 3. 3  
 4. 5

Question ID : 264330109641  
Option 1 ID : 264330430841  
Option 2 ID : 264330430843  
Option 3 ID : 264330430842  
Option 4 ID : 264330430844  
Status : Answered  
Chosen Option : 1

Q.25 Identify the crop which is grown in Rabi season in North India from the following.

- Ans  1. Rice  
 2. Cotton  
 3. Gram  
 4. Bajra

Question ID : 264330181455  
Option 1 ID : 264330711743  
Option 2 ID : 264330711744  
Option 3 ID : 264330711746  
Option 4 ID : 264330711745  
Status : Not Answered  
Chosen Option : --

Q.26 'Freedom is my birth right and I shall have it'. Who among the following said this?

- Ans  1. Lala Lajpat Rai  
 2. Bal Gangadhar Tilak  
 3. Aurobindo Ghosh  
 4. Bipin Chandra pal

Question ID : 264330114872  
Option 1 ID : 264330451575  
Option 2 ID : 264330451574  
Option 3 ID : 264330451576  
Option 4 ID : 264330451573  
Status : Answered  
Chosen Option : 3

Q.27 The first battle of Panipat was fought between Babur and \_\_\_\_\_ .

- Ans  1. Ibrahim Lodhi  
 2. Maharana Pratap  
 3. Muhammad bin Tughlaq  
 4. Sikandar Lodhi

Question ID : 264330118984  
Option 1 ID : 264330466593  
Option 2 ID : 264330466594  
Option 3 ID : 264330466592  
Option 4 ID : 264330466591  
Status : Answered  
Chosen Option : 1

Q.28 The period between two FIFA Football World Cups is \_\_\_\_\_.

- Ans  1. 3 years  
 2. 5 years  
 3. 4 years  
 4. 6 years

Question ID : 264330134259  
Option 1 ID : 264330526031  
Option 2 ID : 264330526033  
Option 3 ID : 264330526032  
Option 4 ID : 264330526034  
Status : Answered  
Chosen Option : 3

Q.29 Ajita Srivastava is a famous folk singer from \_\_\_\_\_ and she received the Padma Shri in 2022.

- Ans  1. Maharashtra  
 2. Gujarat  
 3. Madhya Pradesh  
 4. Uttar Pradesh

Question ID : 264330111960  
Option 1 ID : 264330439927  
Option 2 ID : 264330439928  
Option 3 ID : 264330439925  
Option 4 ID : 264330439926  
Status : Not Answered  
Chosen Option : --

Q.30 The Katakhal, Jiri, Chiri, Modhura, Longai, Sonai, Rukni and Singla are the main tributaries of which river?

- Ans  1. Chambal  
 2. Barak  
 3. Damodar  
 4. Ghaghra

Question ID : 264330113523  
Option 1 ID : 264330446179  
Option 2 ID : 264330446177  
Option 3 ID : 264330446178  
Option 4 ID : 264330446180  
Status : Not Answered  
Chosen Option : --

Q.31 In India, which mode of transport provide door to door services?

- Ans  1. Waterways  
 2. Road transport  
 3. Railways  
 4. Airways

Question ID : 264330119885  
Option 1 ID : 264330469816  
Option 2 ID : 264330469818  
Option 3 ID : 264330469815  
Option 4 ID : 264330469817  
Status : Not Answered  
Chosen Option : --

Q.32 A novel based on the story of a family named 'Fasting, Feasting' was written by whom among the following?

- Ans  1. Anita Desai  
 2. Arundhati Roy  
 3. Arvind Adiga  
 4. Kiran Desai

Question ID : 26433064228  
Option 1 ID : 264330251507  
Option 2 ID : 264330251504  
Option 3 ID : 264330251506  
Option 4 ID : 264330251505  
Status : Answered  
Chosen Option : 3

Q.33 Pradhan Mantri Awas Yojana–Urban (PMAY-U) was launched in the year \_\_\_\_\_ by the Government of India.

- Ans  1. 2021  
 2. 2015  
 3. 2017  
 4. 2019

Question ID : 264330120480  
Option 1 ID : 264330472174  
Option 2 ID : 264330472171  
Option 3 ID : 264330472172  
Option 4 ID : 264330472173  
Status : Answered  
Chosen Option : 4

Q.34 Which of the following Articles of the Indian Constitution is related with provision for just and humane conditions of work and maternity relief?

- Ans  1. Article 42  
 2. Article 45  
 3. Article 44  
 4. Article 43

Question ID : 264330180058  
Option 1 ID : 264330706215  
Option 2 ID : 264330706218  
Option 3 ID : 264330706217  
Option 4 ID : 264330706216  
Status : Answered  
Chosen Option : 4

**Q.35 Article 39A of the Constitution of India gives the idea of:**

- Ans**  1. right to work, to education and to public assistance in certain cases  
 2. provisions for just and humane conditions of work  
 3. living wage, etc., for workers  
 4. equal justice and free legal aid

Question ID : 264330110802  
Option 1 ID : 264330435487  
Option 2 ID : 264330435485  
Option 3 ID : 264330435488  
Option 4 ID : 264330435486  
Status : Answered  
Chosen Option : 4

**Q.36 Who is the Head of the Secretariat of each house of the Parliament?**

- Ans**  1. Speaker  
 2. Secretary General  
 3. President  
 4. Deputy Speaker

Question ID : 264330173533  
Option 1 ID : 264330680611  
Option 2 ID : 264330680612  
Option 3 ID : 264330680614  
Option 4 ID : 264330680613  
Status : Answered  
Chosen Option : 3

**Q.37 According to the census of India 2011, which group of states from the following recorded the highest population?**

- Ans**  1. Maharashtra and Bihar  
 2. Tamil Nadu and Karnataka  
 3. West Bengal and Madhya Pradesh  
 4. Bihar and West Bengal

Question ID : 264330167028  
Option 1 ID : 264330655116  
Option 2 ID : 264330655118  
Option 3 ID : 264330655115  
Option 4 ID : 264330655117  
Status : Answered  
Chosen Option : 1

**Q.38 Which of the following dances of South India is known as peacock dance?**

- Ans**  1. Garadi  
 2. Padayani  
 3. Mayilattam  
 4. Kummi

Question ID : 264330110423  
Option 1 ID : 264330433972  
Option 2 ID : 264330433969  
Option 3 ID : 264330433970  
Option 4 ID : 264330433971  
Status : Not Answered  
Chosen Option : --

**Q.39** Which of the following statements about Indian river systems is correct?

- Ans
- 1. The Mahanadi river flows through the state of Chhattisgarh only.
  - 2. Godavari river flows through Haryana state.
  - 3. Yamuna River is a tributary of Ganga River.
  - 4. Sone River originates in Punjab.

Question ID : 264330174350  
Option 1 ID : 264330683819  
Option 2 ID : 264330683821  
Option 3 ID : 264330683822  
Option 4 ID : 264330683820  
Status : Answered  
Chosen Option : 1

**Q.40** Which of the following statements is true with regard to preference given in most Five-Year Plans in India?

- Ans
- 1. Extensive Promotion of private sector entrepreneurship
  - 2. Control of prices
  - 3. Regulation of financial sector
  - 4. Investment in basic and heavy industries

Question ID : 264330113540  
Option 1 ID : 264330446246  
Option 2 ID : 264330446247  
Option 3 ID : 264330446248  
Option 4 ID : 264330446245  
Status : Answered  
Chosen Option : 4

**Q.41** When was Singer and Nicolson's fluid mosaic model accepted as the foundational model for the interpretation of existing data on membrane proteins and lipids, and their dynamics?

- Ans
- 1. 1952
  - 2. 1972
  - 3. 1942
  - 4. 1982

Question ID : 264330141717  
Option 1 ID : 264330555188  
Option 2 ID : 264330555187  
Option 3 ID : 264330555190  
Option 4 ID : 264330555189  
Status : Answered  
Chosen Option : 1

**Q.42** How many temples and monasteries are there in Ellora caves?

- Ans
- 1. 18
  - 2. 29
  - 3. 34
  - 4. 23

Question ID : 264330106253  
Option 1 ID : 264330417314  
Option 2 ID : 264330417313  
Option 3 ID : 264330417316  
Option 4 ID : 264330417315  
Status : Answered  
Chosen Option : 1

**Q.43** Which of the following gave the British Indian government enormous powers to repress political activities, and allowed the detention of political prisoners without trial for two years?

- Ans**
- 1. Indian Slavery Act
  - 2. Rowlatt Act
  - 3. Indian Contract Act
  - 4. Negotiable Instruments Act

Question ID : 264330119489  
Option 1 ID : 264330468240  
Option 2 ID : 264330468242  
Option 3 ID : 264330468241  
Option 4 ID : 264330468239  
Status : Answered  
Chosen Option : 2

**Q.44** Autotrophs can fix \_\_\_\_\_.

- Ans**
- 1. carbon dioxides
  - 2. carbon monoxide
  - 3. methane
  - 4. oxygen

Question ID : 264330120070  
Option 1 ID : 264330470537  
Option 2 ID : 264330470536  
Option 3 ID : 264330470538  
Option 4 ID : 264330470535  
Status : Not Answered  
Chosen Option : --

**Q.45** Who among the following was the first President of the Indian Olympic Association (IOA)?

- Ans**
- 1. Sir Dorabji Tata
  - 2. Dr. AG Noehren
  - 3. Raja Bhalender Singh
  - 4. Maharaja Bhupinder Singh

Question ID : 264330118442  
Option 1 ID : 264330465171  
Option 2 ID : 264330465169  
Option 3 ID : 264330465172  
Option 4 ID : 264330465170  
Status : Not Answered  
Chosen Option : --

Q.46 Ram Sahay Panday got Padma Shri for promoting the dance form "Raai" from Bundelkhand region. Which State does this dance form belong to?

- Ans
- 1. Rajasthan
  - 2. Madhya Pradesh
  - 3. Bihar
  - 4. Chhattisgarh

Question ID : 2643308666  
Option 1 ID : 264330340308  
Option 2 ID : 264330340305  
Option 3 ID : 264330340307  
Option 4 ID : 264330340306  
Status : Answered  
Chosen Option : 2

Q.47 Reserve Bank of India (RBI) was established on:

- Ans
- 1. 1 April 1945
  - 2. 1 April 1925
  - 3. 1 April 1955
  - 4. 1 April 1935

Question ID : 264330110162  
Option 1 ID : 264330432927  
Option 2 ID : 264330432925  
Option 3 ID : 264330432928  
Option 4 ID : 264330432926  
Status : Answered  
Chosen Option : 4

Q.48 निम्नलिखित में से किसने मद्रास में चमड़ा विक्रेताओं की बेहतरी के लिए सतनामी आंदोलन शुरू किया था?

- Ans
- 1. बी.आर. अंबेडकर
  - 2. महात्मा गांधी
  - 3. गुणदास
  - 4. रामजी विवेकानंद

Question ID : 264330119024  
Option 1 ID : 264330466751  
Option 2 ID : 264330466752  
Option 3 ID : 264330466754  
Option 4 ID : 264330466753  
Status : Answered  
Chosen Option : 3

Q.49 In a volleyball game, 'libero' is a \_\_\_\_\_.

- Ans
- 1. specialised defensive player
  - 2. blocking expert
  - 3. specialised attacking player
  - 4. smashing expert

Question ID : 264330118484  
Option 1 ID : 264330465337  
Option 2 ID : 264330465339  
Option 3 ID : 264330465340  
Option 4 ID : 264330465338  
Status : Not Answered  
Chosen Option : --

Q.50 The parliamentary system of the Government in India is based on the pattern of which of the following Parliamentary Governments?

- Ans  1. Russian  
 2. Canadian  
 3. USA  
 4. British

Question ID : 264330173469  
 Option 1 ID : 264330680357  
 Option 2 ID : 264330680356  
 Option 3 ID : 264330680355  
 Option 4 ID : 264330680358  
 Status : Not Answered  
 Chosen Option : --

Section : Reasoning


O 8	8 =	X O	O A	
= A	O ▽	A 8	X ▽	?
X ▽	A X	= ▽	8 =	

= 8
▽ X
A O

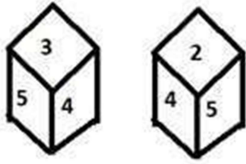
= 8
O A
▽ X

= X
8 O
A ▽

= 8
X O
A ▽



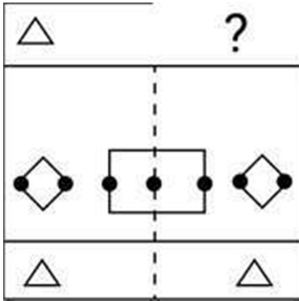
Q.2 Six numbers 1, 2, 3, 4, 5 and 6 are written on different faces of a dice. Two positions of this dice are shown in the figure. Find the number on the face opposite to 2.



- Ans
- 1. 3
  - 2. 4
  - 3. 1
  - 4. 6

Question ID : 264330117893  
 Option 1 ID : 264330463389  
 Option 2 ID : 264330463388  
 Option 3 ID : 264330463387  
 Option 4 ID : 264330463390  
 Status : Answered  
 Chosen Option : 3

Q.3 Select the figure from the given options that will replace the question mark (?) in the figure given below to complete the pattern.



- Ans
- 1.
  - 2.
  - 3.
  - 4.

Question ID : 264330116613  
 Option 1 ID : 264330458540  
 Option 2 ID : 264330458537  
 Option 3 ID : 264330458539  
 Option 4 ID : 264330458538  
 Status : Answered  
 Chosen Option : 2

Q.4 Which two signs should be interchanged to make the given equation correct?  
 $156 \div 12 - 4 \times 65 + 87 = 74$

- Ans  1. + and -  
 2. = and  $\times$   
 3.  $\times$  and -  
 4. + and =

Question ID : 26433090221  
Option 1 ID : 264330354361  
Option 2 ID : 264330354364  
Option 3 ID : 264330354362  
Option 4 ID : 264330354363  
Status : Answered  
Chosen Option : 3

Q.5 छह दो - A, B, C, D, E और F - एक वृत्ताकार मेज के परत: मेज के क5 की ओर मुख करके बैठे थे। वे एक दूसरे से समान दूरी पर बैठे थे। A, B के दाएं तीसरे <sup>TM</sup>ान पर बैठा था। E, D के ठीक बाएं बैठा था। A, F और D के ठीक बीच म बैठा था। िन िलिखत म से कौन D के बाएं तीसरे <sup>TM</sup>ान पर बैठा था?

- Ans  1. C  
 2. E  
 3. A  
 4. F

Question ID : 26433087005  
Option 1 ID : 264330341661  
Option 2 ID : 264330341663  
Option 3 ID : 264330341664  
Option 4 ID : 264330341662  
Status : Answered  
Chosen Option : 1

Q.6 Select the set in which the numbers are related in the same way as are the numbers of the following sets.

(NOTE : Operations should be performed on the whole numbers, without breaking down the numbers into its constituent digits. E.g. 13 – Operations on 13 such as adding/deleting/multiplying etc. to 13 can be performed. Breaking down 13 into 1 and 3 and then performing mathematical operations on 1 and 3 is NOT allowed)  
(39, 130, 13)  
(45, 150, 15)

- Ans  1. (39, 120, 17)  
 2. (25, 60, 12)  
 3. (35, 125, 10)  
 4. (40, 75, 15)

Question ID : 26433097437  
Option 1 ID : 264330382439  
Option 2 ID : 264330382437  
Option 3 ID : 264330382440  
Option 4 ID : 264330382438  
Status : Not Answered  
Chosen Option : --

Q.7 Which of the following terms will replace the question mark (?) in the given series?  
MAF, PCG, SEH, ?, YIJ

- Ans
- 1. UFI
  - 2. RHI
  - 3. WHI
  - 4. VGI

Question ID : 264330102169  
 Option 1 ID : 264330401143  
 Option 2 ID : 264330401141  
 Option 3 ID : 264330401144  
 Option 4 ID : 264330401142  
 Status : Answered  
 Chosen Option : 4

Q.8 Which figure should replace the question mark (?) in the following series to continue the pattern?

D	Z	V	□	D	V	V	□	D	=	V	D	
	=		Z		Z		Z			□		?
	□		=		=		=			Z		

Ans

1.

D	Z	=
	V	
	□	

2.

D	=	V
	□	
	Z	

3.

D	=	V
	Z	
	□	

4.

=	Z	D
	V	
	□	

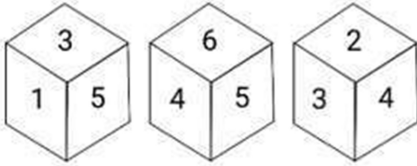
Question ID : 264330129629  
 Option 1 ID : 264330507883  
 Option 2 ID : 264330507882  
 Option 3 ID : 264330507885  
 Option 4 ID : 264330507884  
 Status : Answered  
 Chosen Option : 2

Q.9 In a certain code language, 'WAR' is written as '39' and 'ZIP' is written as '30'. How will 'YES' be written in that language?

- Ans  1. 36  
 2. 34  
 3. 32  
 4. 37

Question ID : 26433089410  
Option 1 ID : 264330351143  
Option 2 ID : 264330351142  
Option 3 ID : 264330351141  
Option 4 ID : 264330351144  
Status : Answered  
Chosen Option : 3

Q.10 Three different positions of the same dice are shown. Find the number on the face opposite to the face showing '4'.



- Ans  1. 2  
 2. 5  
 3. 6  
 4. 1

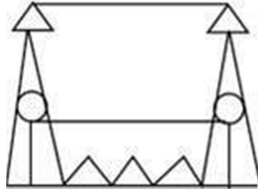
Question ID : 264330112034  
Option 1 ID : 264330440223  
Option 2 ID : 264330440221  
Option 3 ID : 264330440222  
Option 4 ID : 264330440224  
Status : Answered  
Chosen Option : 4

Q.11 Select the option in which the given figure is embedded (rotation is NOT allowed).

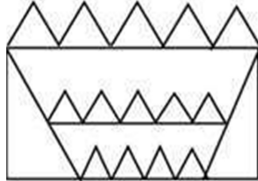


Ans

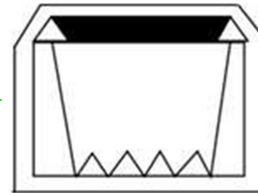
1.



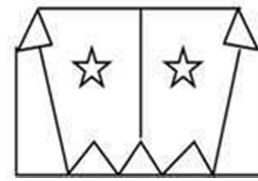
2.



3.



4.



Question ID : 264330111676

Option 1 ID : 264330438792

Option 2 ID : 264330438790

Option 3 ID : 264330438791

Option 4 ID : 264330438789

Status : Answered

Chosen Option : 3

Q.12 Read the given statements and conclusions carefully. Assuming that the information given in the statements is true, even if it appears to be at variance with commonly known facts, decide which of the given conclusions logically follow(s) from the statements.

Statements:

Some shoes are shirts.

All shirts are jackets.

Conclusions:

I. Some shoes are jackets.

II. All jackets are shoes.

Ans  1. Only conclusion II follows

2. Only conclusion I follows

3. Neither conclusion I nor II follows

4. Both conclusions I and II follow

Question ID : 26433068293

Option 1 ID : 264330267685

Option 2 ID : 264330267684

Option 3 ID : 264330267687

Option 4 ID : 264330267686

Status : Answered

Chosen Option : 2

Q.13 Select the option that is related to the fourth number in the same way as the first number is related to the second number and the fifth number is related to the sixth number.

17 : 69 :: ? : 109 :: 21 : 85

Ans  1. 40

2. 27

3. 37

4. 31

Question ID : 26433052023

Option 1 ID : 264330203397

Option 2 ID : 264330203394

Option 3 ID : 264330203396

Option 4 ID : 264330203395

Status : Answered

Chosen Option : 2

Q.14 How many triangles are there in the given figure?



Ans  1. 30

2. 28

3. 24

4. 32

Question ID : 26433080664

Option 1 ID : 264330316591

Option 2 ID : 264330316590

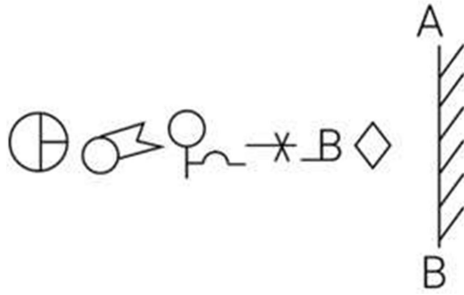
Option 3 ID : 264330316592

Option 4 ID : 264330316589

Status : Answered

Chosen Option : 1

Q.15 Select the correct mirror image of the given figure when the mirror is placed at 'AB' as shown.



Ans

- 1.
- 2.
- 3.
- 4.

Question ID : 264330114698

Option 1 ID : 264330450880

Option 2 ID : 264330450877

Option 3 ID : 264330450879

Option 4 ID : 264330450878

Status : Answered

Chosen Option : 3

Q.16 Three different positions of the same dice are shown, the faces of which are marked with the letters A, B, C, D, E and F. Select the letter that will be on the face opposite to the face having the letter 'D'.



Ans

- 1. F
- 2. A
- 3. C
- 4. B

Question ID : 264330117422

Option 1 ID : 264330461732

Option 2 ID : 264330461729

Option 3 ID : 264330461731

Option 4 ID : 264330461730

Status : Answered

Chosen Option : 1

Q.17 Select the option that is related to the fifth letter cluster in the same way as the second letter cluster is related to the first letter cluster and the fourth letter cluster is related to the third letter cluster.

YDVJ : PHMN :: FJBE : WNSI :: PXYS : ?

- Ans
- 1. PLEX
  - 2. GMNA
  - 3. JFBT
  - 4. GBPW

Question ID : 26433074692

Option 1 ID : 264330292856

Option 2 ID : 264330292859

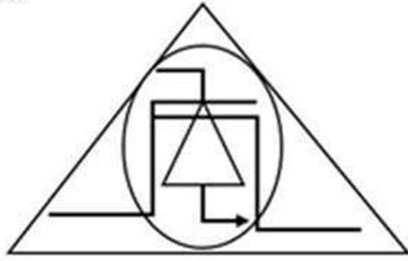
Option 3 ID : 264330292857

Option 4 ID : 264330292858

Status : Answered

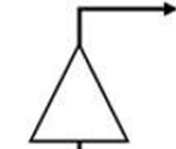
Chosen Option : 4

Q.18 Select the option that is embedded in the given figure (rotation is NOT allowed).

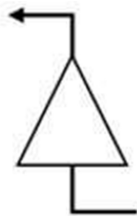


Ans

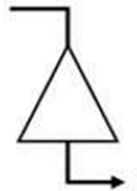
✗ 1.



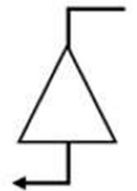
✗ 2.



✓ 3.



✗ 4.



Question ID : 26433082892

Option 1 ID : 264330325402

Option 2 ID : 264330325404

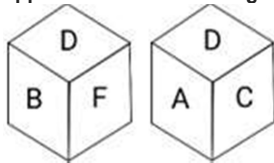
Option 3 ID : 264330325401

Option 4 ID : 264330325403

Status : Answered

Chosen Option : 3

Q.19 Six letters A, B, C, D, E and F are written on different faces of a dice. Two different positions of this dice are shown in the figure. Select the letter that will be on the face opposite to the one having E.



Ans  1. D

2. C

3. F

4. A

Question ID : 264330121788  
Option 1 ID : 264330477323  
Option 2 ID : 264330477325  
Option 3 ID : 264330477326  
Option 4 ID : 264330477324  
Status : Answered  
Chosen Option : 1

Q.20 Select the number from the given options that can replace the question mark (?) in the following series.  
40, 50, 30, 60, 20, ?

Ans  1. 40

2. 70

3. 50

4. 80

Question ID : 264330106384  
Option 1 ID : 264330417840  
Option 2 ID : 264330417838  
Option 3 ID : 264330417839  
Option 4 ID : 264330417837  
Status : Answered  
Chosen Option : 2

Which figure should replace the question mark (?) if the following series were to be continued?

L O T R	R T = E	S R T =	= T E A	4 = T E	?
=	O	E	R	A	
M A D E	L D A M	O L D A	S D L O	R S D L	

✗

R T A 4
=
L D S E

✓

E T A L
=
4 D S R

✗

E T A 4
=
L R S D

✗

L 4 = T
E
A R S D



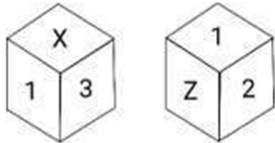
Q.22 Select the correct mirror image of the given figure when the mirror is placed at PQ as shown below.



- Ans
- 1. G H 6 D 2 L
  - 2. J S D 6 H 9
  - 3. J S D 2 L
  - 4. J S D 6 H 9

Question ID : 26433080771  
 Option 1 ID : 264330317017  
 Option 2 ID : 264330317018  
 Option 3 ID : 264330317020  
 Option 4 ID : 264330317019  
 Status : Answered  
 Chosen Option : 4

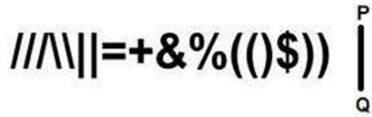
Q.23 Three numbers, 1, 2 and 3, and three letters, X, Y and Z, are written on the different faces of a dice. Two positions of this dice are shown in the given figure. Find the letter/number on the face opposite to Y.



- Ans
- 1. X
  - 2. Z
  - 3. 3
  - 4. 1

Question ID : 264330116608  
 Option 1 ID : 264330458520  
 Option 2 ID : 264330458519  
 Option 3 ID : 264330458518  
 Option 4 ID : 264330458517  
 Status : Answered  
 Chosen Option : 4

**Q.24** Select the correct mirror image of the given figure when the mirror is placed at PQ as shown below.



Ans

1. ((?))\°&+=//|\\

2. ((?)((\°&+=||//\

3. ((?))\°&+=||//\

4. ((?))\°&+=||//\

Question ID : 26433082028  
 Option 1 ID : 264330321947  
 Option 2 ID : 264330321945  
 Option 3 ID : 264330321946  
 Option 4 ID : 264330321948  
 Status : Answered  
 Chosen Option : 3

**Q.25** Select the correct combination of mathematical signs that can sequentially replace the \* signs and balance the given expression.  
 $13 * 7 * 32 * 56 * 4 * 73$

1. +, x, -, ÷, =

2. x, -, +, ÷, =

3. -, ÷, +, x, =

4. -, x, +, ÷, =

Question ID : 26433074788  
 Option 1 ID : 264330293242  
 Option 2 ID : 264330293240  
 Option 3 ID : 264330293241  
 Option 4 ID : 264330293243  
 Status : Answered  
 Chosen Option : 2

Q.1

What is the value of  $\frac{0.061 \times 0.061 \times 0.061 + 0.031 \times 0.031 \times 0.031}{0.061 \times 0.061 - 0.061 \times 0.031 + 0.031 \times 0.031}$ ?

Ans

- 1. 0.092
- 2. 0.0081
- 3. 0.27
- 4. 1.8

Question ID : 264330104342  
Option 1 ID : 264330409669  
Option 2 ID : 264330409670  
Option 3 ID : 264330409671  
Option 4 ID : 264330409672  
Status : Answered  
Chosen Option : 1

Q.2 A, B and C can complete a piece of work in 8, 10 and 12 days, respectively. In how many days would all of them complete the same work, working together?

Ans

- 1.  $\frac{123}{37}$  days
- 2.  $\frac{120}{37}$  days
- 3.  $\frac{130}{37}$  days
- 4.  $\frac{128}{37}$  days

Question ID : 264330103628  
Option 1 ID : 264330406819  
Option 2 ID : 264330406820  
Option 3 ID : 264330406817  
Option 4 ID : 264330406818  
Status : Not Answered  
Chosen Option : --

Q.3 A solid copper sphere of diameter 30 cm is drawn into a wire of diameter 10 cm. Find the length of the wire (in cm).

Ans

- 1. 180
- 2. 120
- 3. 240
- 4. 300

Question ID : 264330112445  
Option 1 ID : 264330441868  
Option 2 ID : 264330441865  
Option 3 ID : 264330441866  
Option 4 ID : 264330441867  
Status : Answered  
Chosen Option : 4

Q.4 If 45% of Ram's money is added to 50% of Soham's money, then the total amount will be 86% of Soham's money. What percentage of Ram's money did Soham have?

- Ans
- 1. 137%
  - 2. 85%
  - 3. 125%
  - 4. 95%

Question ID : 264330131332  
Option 1 ID : 264330514442  
Option 2 ID : 264330514439  
Option 3 ID : 264330514440  
Option 4 ID : 264330514441  
Status : Not Answered  
Chosen Option : --

Q.5 What is the product of the 5<sup>th</sup> prime number and the prime number immediately greater than 100?

- Ans
- 1. 1067
  - 2. 1717
  - 3. 1111
  - 4. 1261

Question ID : 264330104345  
Option 1 ID : 264330409681  
Option 2 ID : 264330409684  
Option 3 ID : 264330409682  
Option 4 ID : 264330409683  
Status : Answered  
Chosen Option : 3

Q.6 A person borrows ₹5,000 for 2 years at 4% p.a. simple interest. He immediately lends it to another person at  $\frac{25}{4}$ % p.a. for 2 years. Find his gain (in ₹) in the transaction.

- Ans
- 1. 225
  - 2. 250
  - 3. 275
  - 4. 200

Question ID : 264330119421  
Option 1 ID : 264330467971  
Option 2 ID : 264330467972  
Option 3 ID : 264330467974  
Option 4 ID : 264330467973  
Status : Not Answered  
Chosen Option : --

Q.7 The initial population of a country is 1,87,500. If the birth and the death rates are 13% and 9%, respectively, then find the population of the country after 2 years.

- Ans
- 1. 2,02,700
  - 2. 2,02,900
  - 3. 2,03,000
  - 4. 2,02,800

Question ID : 264330106009  
Option 1 ID : 264330416337  
Option 2 ID : 264330416339  
Option 3 ID : 264330416340  
Option 4 ID : 264330416338  
Status : Not Answered  
Chosen Option : --

Q.8 A trip to a destination is made in the following way:  
a) 550 km by train at an average speed of 55 km/h  
b) 4500 km by plane at an average speed of 500 km/h  
c) 400 km by boat at an average speed of 25 km/h  
d) 55 km by auto at an average speed of 35 km/h  
What is the average speed for the entire journey?

- Ans
- 1. 3300 km/h
  - 2. 9600 km/h
  - 3.  $121\frac{64}{25}$  km/h
  - 4.  $150\frac{135}{256}$  km/h

Question ID : 264330118133  
Option 1 ID : 264330464350  
Option 2 ID : 264330464348  
Option 3 ID : 264330464349  
Option 4 ID : 264330464347  
Status : Not Answered  
Chosen Option : --

Q.9 If  $k$ ,  $(k^2 + 3)$  and  $(k^3 + 5)$  are prime numbers, then what will be the value of  $k$ ?

- Ans
- 1. 4
  - 2. 3
  - 3. 7
  - 4. 2

Question ID : 264330104277  
Option 1 ID : 264330409410  
Option 2 ID : 264330409411  
Option 3 ID : 264330409409  
Option 4 ID : 264330409412  
Status : Answered  
Chosen Option : 3

Q.10 If the price of tea goes up by 28%, then by what percentage (correct to the nearest whole number) should its consumption be reduced so that the expenditure on it remains unchanged?

Ans  1. 22%

2. 27%

3. 21%

4. 28%

Question ID : 264330118051  
Option 1 ID : 264330464019  
Option 2 ID : 264330464021  
Option 3 ID : 264330464022  
Option 4 ID : 264330464020  
Status : Not Answered  
Chosen Option : --

Q.11 What is the area of a triangle (in "cm<sup>2</sup>") having sides of length 24 cm, 17 cm and 9 cm?

Ans  1.  $40\sqrt{2}$

2.  $35\sqrt{2}$

3.  $20\sqrt{2}$

4.  $40\sqrt{3}$

Question ID : 264330126533  
Option 1 ID : 264330495807  
Option 2 ID : 264330495806  
Option 3 ID : 264330495805  
Option 4 ID : 264330495804  
Status : Not Answered  
Chosen Option : --

Q.12 If marked price is 75% more than the cost price and a discount of 40% is allowed on the marked price, then percentage profit is:

Ans  1. 5%

2. 8%

3. 3%

4. 7%

Question ID : 264330126187  
Option 1 ID : 264330494423  
Option 2 ID : 264330494421  
Option 3 ID : 264330494422  
Option 4 ID : 264330494420  
Status : Not Answered  
Chosen Option : --

Q.13 Find the average of the first five composite numbers.

- Ans  1. 7.8  
 2. 6.8  
 3. 8.2  
 4. 7.4

Question ID : 264330131439  
Option 1 ID : 264330514861  
Option 2 ID : 264330514859  
Option 3 ID : 264330514862  
Option 4 ID : 264330514860  
Status : Not Answered  
Chosen Option : --

Q.14 A vertical pole of length 8.3 m casts a shadow of length 4.15 m. Find the height of the tree that casts a 40 m long shadow under similar conditions (in m).

- Ans  1. 60  
 2. 70  
 3. 100  
 4. 80

Question ID : 264330168549  
Option 1 ID : 264330661009  
Option 2 ID : 264330661008  
Option 3 ID : 264330661007  
Option 4 ID : 264330661010  
Status : Not Answered  
Chosen Option : --

Q.15 Arun bought 150 guavas for ₹525 and sold them at the rate of ₹36 per dozen. What is the profit or loss percentage of Arun (correct up to two decimal places)?

- Ans  1. 16.67% Loss  
 2. 14.29% Profit  
 3. 16.67% Profit  
 4. 14.29% Loss

Question ID : 264330103952  
Option 1 ID : 264330408112  
Option 2 ID : 264330408109  
Option 3 ID : 264330408111  
Option 4 ID : 264330408110  
Status : Not Answered  
Chosen Option : --

Section : Computer Proficiency

Q.1 Which of the following is the foundation of data communication on the web, enabling the transfer of web page content?

- Ans  1. Hypertext Transfer Protocol  
 2. Domain Name Server  
 3. World Wide Web  
 4. Uniform Resource Locator

Question ID : 264330180801  
Option 1 ID : 264330709167  
Option 2 ID : 264330709169  
Option 3 ID : 264330709168  
Option 4 ID : 264330709170  
Status : Answered  
Chosen Option : 1

Q.2 एमएस वर्ड 365 (MS Word 365) से संबंधित निम्न कथनों के आधार पर कौन-सा विकल्प सही है?

- 1) Ctrl + X का उपयोग डॉक्यूमेंट को कॉपी करने के लिए किया जाता है।  
2) Ctrl+V का उपयोग डॉक्यूमेंट को मूव करने के लिए किया जाता है।

- Ans  1. दोनों (1) और (2)  
 2. केवल (1)  
 3. न तो (1) और न ही (2)  
 4. केवल (2)

Question ID : 264330175969  
Option 1 ID : 264330690173  
Option 2 ID : 264330690171  
Option 3 ID : 264330690174  
Option 4 ID : 264330690172  
Status : Answered  
Chosen Option : 2

Q.3 Which of the following shortcut keys is used in MS Excel 365 to make the cell in edit mode, allowing you to make changes?

- Ans  1. Ctrl + F1  
 2. F1  
 3. F2  
 4. Ctrl + F2

Question ID : 264330180413  
Option 1 ID : 264330707622  
Option 2 ID : 264330707621  
Option 3 ID : 264330707620  
Option 4 ID : 264330707619  
Status : Answered  
Chosen Option : 4

Q.4 एमएस ए ेल 365 (MS Excel 365) का िन िलिखत म से कौन-सा फं न, ेक वै यू (value) के बीच एक 4ेस को छोड़ते ए अनियमित 4ेस को हटाता है?

- Ans
- 1. AVERAGE
  - 2. SUM
  - 3. VLOOKUP
  - 4. TRIM

Question ID : 264330180405  
Option 1 ID : 264330707589  
Option 2 ID : 264330707587  
Option 3 ID : 264330707590  
Option 4 ID : 264330707588  
Status : Not Answered  
Chosen Option : --

Q.5 MS-Word 365 म िन िलिखत म से िकिस िवक से आप चयिनत टे के फ्रॉ साइज़ को, फ्रॉ साइज़ सूची म उपल अगले बड़े साइज़ म प रवितत कर सकते ह?

- Ans
- 1. इटैिल
  - 2. बो
  - 3. फ्रॉU साइज़ बढ़ाएँ
  - 4. फ्रॉU साइज़ कम कर

Question ID : 264330173354  
Option 1 ID : 264330679898  
Option 2 ID : 264330679897  
Option 3 ID : 264330679895  
Option 4 ID : 264330679896  
Status : Answered  
Chosen Option : 3

Q.6 In MS Excel 365, what is the term for the area that contains specific and formatted data in MS Excel for printing?

- Ans
- 1. View
  - 2. Print preview
  - 3. Print area
  - 4. Print margin

Question ID : 264330182119  
Option 1 ID : 264330714315  
Option 2 ID : 264330714317  
Option 3 ID : 264330714318  
Option 4 ID : 264330714316  
Status : Answered  
Chosen Option : 3

Q.7 In MS Word 365 What is the primary purpose of using bullets and numbering in document formatting?

- Ans  1. To indicate the importance of specific text.
2. To organize information into lists or sequences.
3. To adjust the margins and spacing of the document.
4. To highlight text with a different font or colour.

Question ID : 264330173328  
Option 1 ID : 264330679791  
Option 2 ID : 264330679792  
Option 3 ID : 264330679794  
Option 4 ID : 264330679793  
Status : Answered  
Chosen Option : 3

Q.8 Which of the following is an example of a table style in Microsoft Word 365?

- Ans  1. Chicago Manual of Style
2. Plain Grid
3. MLA (Modern Language Association)
4. APA (American Psychological Association)

Question ID : 264330174492  
Option 1 ID : 264330684389  
Option 2 ID : 264330684390  
Option 3 ID : 264330684387  
Option 4 ID : 264330684388  
Status : Not Answered  
Chosen Option : --

Q.9 निम्नलिखित में से कौन-सा, यूजर्स के बीच संदेशों के आदान-दान के लिए एक क्लाइंट-आधारित ऐप्लिकेशन है?

- Ans  1. ई-मेल (Email)
2. क्रोम (chrome)
3. बिंग (Bing)
4. मोज़िला (Mozilla)

Question ID : 264330180792  
Option 1 ID : 264330709131  
Option 2 ID : 264330709132  
Option 3 ID : 264330709133  
Option 4 ID : 264330709134  
Status : Answered  
Chosen Option : 1

Q.10 नया खाली डॉक्यूमेंट बनाने का तरीका निम्नलिखित में से कौन-सा है? Ans  1. एमएस-एक्सेल

2. एमएस आउटलुक
3. एमएस-पावरपॉइंट
4. एमएस-वर्ड

Question ID : 264330178284  
Option 1 ID : 264330699191  
Option 2 ID : 264330699194  
Option 3 ID : 264330699193  
Option 4 ID : 264330699192  
Status : Not Answered  
Chosen Option : --

## Constable Executive Male and Female in Delhi Police Examination 2023

Roll Number	
Candidate Name	
Venue Name	MIT Meerut
Exam Date	14/11/2023
Exam Time	3:00 PM - 4:30 PM
Subject	Constable Executive Male and Female in Delhi Police Examination 2023

Section : General Knowledge

**Q.1** Cashpor Micro credit is a company that does NOT operate in the most backward districts of \_\_\_\_\_.

- Ans
- 1. Bihar
  - 2. Chhattisgarh
  - 3. Telangana
  - 4. Jharkhand

Question ID : 264330116497  
Option 1 ID : 264330458073  
Option 2 ID : 264330458076  
Option 3 ID : 264330458075  
Option 4 ID : 264330458074  
Status : Not Answered  
Chosen Option : --

**Q.2** Which Article of the Constitution of India states that the President shall appoint judges of the Supreme Court under his hand and seal after consultation with such of the judges of the Supreme Court as the President may deem necessary?

- Ans
- 1. Article 124 (2)
  - 2. Article 120 (2)
  - 3. Article 134 (2)
  - 4. Article 142(2)

Question ID : 264330110826  
Option 1 ID : 264330435584  
Option 2 ID : 264330435582  
Option 3 ID : 264330435581  
Option 4 ID : 264330435583  
Status : Answered  
Chosen Option : 1

**Q.3** Which of the following was replaced by the Green Revolution?

- Ans
- 1. Use of inorganic manures
  - 2. Use of seeds supplied by the government
  - 3. Use of groundwater for irrigation
  - 4. Use of organic manures

Question ID : 264330111765  
Option 1 ID : 264330439146  
Option 2 ID : 264330439148  
Option 3 ID : 264330439147  
Option 4 ID : 264330439145

Q.4 According to Census of India 2011, the growth rate of Hindu population in the decade 2001-2011 was \_\_\_\_\_.

- Ans
- 1. 10.0%
  - 2. 16.8%
  - 3. 20.1%
  - 4. 8.6%

Question ID : 264330179510  
Option 1 ID : 264330704039  
Option 2 ID : 264330704040  
Option 3 ID : 264330704041  
Option 4 ID : 264330704042  
Status : Not Answered  
Chosen Option : --

Q.5 In which of the following years Cripps Mission offered Dominion Status to India?

- Ans
- 1. 1942
  - 2. 1934
  - 3. 1939
  - 4. 1945

Question ID : 264330118600  
Option 1 ID : 264330465651  
Option 2 ID : 264330465654  
Option 3 ID : 264330465653  
Option 4 ID : 264330465652  
Status : Answered  
Chosen Option : 1

Q.6 किस सिंड्रोम के कारण कंधों के बीच एक मोटा कूबड़, एक गोल चेहरा और हाथों पर गुलाबी या बगनी सिंखाव के लक्षण होते हैं?

- Ans
- 1. डाउन सिंड्रोम (Down syndrome)
  - 2. एंजेलमैन सिंड्रोम (Angelman syndrome)
  - 3. कुशिंग सिंड्रोम (Cushing syndrome)
  - 4. मार्फन सिंड्रोम (Marfan syndrome)

Question ID : 264330130986  
Option 1 ID : 264330513056  
Option 2 ID : 264330513055  
Option 3 ID : 264330513057  
Option 4 ID : 264330513058  
Status : Not Answered  
Chosen Option : --

Q.7 After independence, who had complete control over the established industries?

- Ans
- 1. Private sector
  - 2. Foreign investors
  - 3. Britishers
  - 4. Government

Question ID : 264330174149  
Option 1 ID : 264330683038  
Option 2 ID : 264330683036  
Option 3 ID : 264330683035  
Option 4 ID : 264330683037  
Status : Answered  
Chosen Option : 4

Q.8 Who propounded the philosophy of 'One Caste, One Religion, One God for all men'?

- Ans  1. Shree Narayana Guru  
 2. Savitribai Phule  
 3. Mahatma Gandhi  
 4. Raja Ram Mohan Roy

Question ID : 264330114882  
Option 1 ID : 264330451614  
Option 2 ID : 264330451615  
Option 3 ID : 264330451613  
Option 4 ID : 264330451616  
Status : Not Answered  
Chosen Option : --

Q.9 What type of earthquake occurs when induced stresses around mine workings cause massive rocks to fly explosively from the mine face, creating seismic waves?

- Ans  1. Collapse earthquake  
 2. Explosion earthquake  
 3. Volcanic earthquake  
 4. Tectonic earthquake

Question ID : 264330141510  
Option 1 ID : 264330554377  
Option 2 ID : 264330554376  
Option 3 ID : 264330554378  
Option 4 ID : 264330554375  
Status : Answered  
Chosen Option : 2

Q.10 The term 'monsoon' denotes the seasonal change in wind direction that occurs during which specific time period?

- Ans  1. Two decades  
 2. Two months  
 3. One day  
 4. Year

Question ID : 264330174344  
Option 1 ID : 264330683798  
Option 2 ID : 264330683797  
Option 3 ID : 264330683795  
Option 4 ID : 264330683796  
Status : Answered  
Chosen Option : 2

Q.11 Sunlight is the main source of \_\_\_\_\_.

- Ans  1. Vitamin A  
 2. Vitamin B  
 3. Vitamin D  
 4. Vitamin C

Question ID : 264330120064  
Option 1 ID : 264330470511  
Option 2 ID : 264330470514  
Option 3 ID : 264330470512  
Option 4 ID : 264330470513  
Status : Answered  
Chosen Option : 3

Q.12 In which of the following dance genres is Mallika Sarabhai an accomplished dancer?

- Ans  1. Kathakali and Odissi  
 2. Odissi and Kuchipudi  
 3. Bharatnatyam and Odissi  
 4. Kuchipudi and Bharatnatyam

Question ID : 264330113797  
Option 1 ID : 264330447276  
Option 2 ID : 264330447273  
Option 3 ID : 264330447274  
Option 4 ID : 264330447275  
Status : Answered  
Chosen Option : 3

Q.13 In which of the following Indian states is Ghum Monastery located?

- Ans  1. Karnataka  
 2. Himachal Pradesh  
 3. West Bengal  
 4. Arunachal Pradesh

Question ID : 264330109635  
Option 1 ID : 264330430817  
Option 2 ID : 264330430819  
Option 3 ID : 264330430818  
Option 4 ID : 264330430820  
Status : Not Answered  
Chosen Option : --

Q.14 In which language was the largest newspaper published in India in the year 2021-22?

- Ans  1. Hindi  
 2. English  
 3. Urdu  
 4. Bengali

Question ID : 264330181434  
Option 1 ID : 264330711660  
Option 2 ID : 264330711659  
Option 3 ID : 264330711661  
Option 4 ID : 264330711662  
Status : Not Answered  
Chosen Option : --

Q.15 Which of the following statements is correct about privatisation?

Statements:

- I. It promotes economic efficiency
- II. It delimits the interference of bureaucracy
- III. It leads to market failure

Ans  1. Only statements I and II

2. Only statement II

3. Only statement III

4. Only statement I

Question ID : 26433066581

Option 1 ID : 264330260850

Option 2 ID : 264330260849

Option 3 ID : 264330260851

Option 4 ID : 264330260848

Status : Answered

Chosen Option : 4

Q.16 'नागे वाज़ा' जूडो म इ ेमाल की जाने वाली एक \_\_\_\_\_ की तकनीक है।

Ans  1. दम घटाने (चोकिंग)

2. जकड़ने (चिपिंग)

3. दूर हटाने (चोइंग)

4. पकड़े रखने (होचिंग)

Question ID : 264330118481

Option 1 ID : 264330465328

Option 2 ID : 264330465325

Option 3 ID : 264330465326

Option 4 ID : 264330465327

Status : Not Answered

Chosen Option : --

Q.17 In which budget was the policy of LERMS announced?

Ans  1. 1991-92

2. 1992-93

3. 1995-96

4. 1990-91

Question ID : 264330109418

Option 1 ID : 264330429950

Option 2 ID : 264330429951

Option 3 ID : 264330429952

Option 4 ID : 264330429949

Status : Not Answered

Chosen Option : --

Q.18 In the context of globalisation, what does PPP stand for?

- Ans
- 1. Purchase Power Parity
  - 2. Purchasing Par Parity
  - 3. Purchasing Power Parity
  - 4. Purchasing Par Parities

Question ID : 264330109581  
Option 1 ID : 264330430602  
Option 2 ID : 264330430603  
Option 3 ID : 264330430601  
Option 4 ID : 264330430604  
Status : Answered  
Chosen Option : 3

Q.19 \_\_\_\_\_ is the final interpreter of the Constitution of India.

- Ans
- 1. Attorney General
  - 2. Comptroller and Auditor General
  - 3. Supreme Court
  - 4. President of India

Question ID : 264330134562  
Option 1 ID : 264330527204  
Option 2 ID : 264330527203  
Option 3 ID : 264330527205  
Option 4 ID : 264330527206  
Status : Answered  
Chosen Option : 1

Q.20 Ram Sahay Pandey, a Padma Shri 2022 awardee, is associated with which of the following dance forms of the Bedia community of Madhya Pradesh?

- Ans
- 1. Karma
  - 2. Ravala
  - 3. Rai
  - 4. Badhai

Question ID : 26433071519  
Option 1 ID : 264330280503  
Option 2 ID : 264330280502  
Option 3 ID : 264330280501  
Option 4 ID : 264330280500  
Status : Not Answered  
Chosen Option : --

Q.21 Which of the following measures of credit control requires a well-developed money market?

- Ans
- 1. Open market operations
  - 2. Bank rate policy
  - 3. Variable reserve ratio
  - 4. Qualitative measures

Question ID : 264330112465  
Option 1 ID : 264330441945  
Option 2 ID : 264330441946  
Option 3 ID : 264330441947  
Option 4 ID : 264330441948  
Status : Not Answered  
Chosen Option : --

**Q.22** Which of the following festivals is celebrated in honour of Hidimba Devi in Himachal Pradesh?

- Ans
- 1. Shorai Festival
  - 2. Maghi Festival
  - 3. Bisua Festival
  - 4. Doongri Festival

Question ID : 264330141782  
Option 1 ID : 264330555450  
Option 2 ID : 264330555449  
Option 3 ID : 264330555448  
Option 4 ID : 264330555447  
Status : Answered  
Chosen Option : 2

**Q.23** Vijaydashami is also known as \_\_\_\_\_.

- Ans
- 1. Dussehra
  - 2. Holi
  - 3. Diwali
  - 4. Ganesh Chaturthi

Question ID : 264330109311  
Option 1 ID : 264330429523  
Option 2 ID : 264330429521  
Option 3 ID : 264330429522  
Option 4 ID : 264330429524  
Status : Answered  
Chosen Option : 1

**Q.24** Who among the following social reformers established Satyashodhak Samaj?

- Ans
- 1. Jyotiba Phule
  - 2. Narayana Guru
  - 3. Ramaswami Naicker-Periyar
  - 4. Dr. Babasaheb Ambedkar

Question ID : 264330113595  
Option 1 ID : 264330446465  
Option 2 ID : 264330446467  
Option 3 ID : 264330446468  
Option 4 ID : 264330446466  
Status : Answered  
Chosen Option : 1

**Q.25** Mein Kampf' has been written by which of the following politicians?

- Ans
- 1. Benito Mussolini
  - 2. Hirohito
  - 3. Adolf Hitler
  - 4. Clement Attlee

Question ID : 26433071507  
Option 1 ID : 264330280452  
Option 2 ID : 264330280454  
Option 3 ID : 264330280453  
Option 4 ID : 264330280455  
Status : Not Answered  
Chosen Option : --

Q.26 Pandit Ayodhya Prasad is associated with \_\_\_\_\_.

- Ans  1. pakhawaj  
 2. veena  
 3. flute  
 4. guitar

Question ID : 264330111936  
Option 1 ID : 264330439830  
Option 2 ID : 264330439829  
Option 3 ID : 264330439831  
Option 4 ID : 264330439832  
Status : Not Answered  
Chosen Option : --

Q.27 High Courts have the power to issue writs under which Article of the Constitution of India?

- Ans  1. Article 222  
 2. Article 223  
 3. Article 226  
 4. Article 225

Question ID : 264330110578  
Option 1 ID : 264330434592  
Option 2 ID : 264330434590  
Option 3 ID : 264330434591  
Option 4 ID : 264330434589  
Status : Answered  
Chosen Option : 3

Q.28 Ashvaghosha, the author of Buddhacharita, was the philosopher in the court of which Kushana kings?

- Ans  1. Kanishka I  
 2. Vasudeva I  
 3. Huvishka  
 4. Vima Kadphises

Question ID : 264330120419  
Option 1 ID : 264330471927  
Option 2 ID : 264330471930  
Option 3 ID : 264330471929  
Option 4 ID : 264330471928  
Status : Answered  
Chosen Option : 1

Q.29 Match List I (name of the periodic element) with List II (symbols of the periodic element) and select the correct code.

List I				List II
A. Magnesium				i. Mn
B. Boron				ii. B
C. Manganese				iii. Ba
D. Barium				iv. Mg

Code:	A	B	C	D
I	iv	iii	i	ii
II	i	ii	iv	iii
III	iv	i	ii	iii
IV	iv	ii	i	iii

- Ans  1. III  
 2. I  
 3. II  
 4. IV

Question ID : 264330173658  
Option 1 ID : 264330681113  
Option 2 ID : 264330681111  
Option 3 ID : 264330681112  
Option 4 ID : 264330681114  
Status : Answered  
Chosen Option : 4

Q.30 Name the Freedom fighter who formed a clan of non-violent revolutionaries called Khudai Khidmatgars in 1929.

- Ans  1. KM Ashraf  
 2. Khan Abdul Ghaffar Khan  
 3. Abbas Tayabji  
 4. Mohammed Yasin Khan

Question ID : 264330171708  
Option 1 ID : 264330673437  
Option 2 ID : 264330673438  
Option 3 ID : 264330673435  
Option 4 ID : 264330673436  
Status : Answered  
Chosen Option : 2

Q.31 The National Sports Festival for Women was started in \_\_\_\_.

- Ans  1. 1974  
 2. 1975  
 3. 1976  
 4. 1970

Question ID : 264330110368  
Option 1 ID : 264330433750  
Option 2 ID : 264330433751  
Option 3 ID : 264330433752  
Option 4 ID : 264330433749  
Status : Not Answered  
Chosen Option : --

**Q.32** Which of the following states topped the medal tally in the Khelo India Youth Games 2023?

- Ans  1. Maharashtra  
 2. Haryana  
 3. Uttar Pradesh  
 4. Punjab

Question ID : 264330176920  
Option 1 ID : 264330693875  
Option 2 ID : 264330693876  
Option 3 ID : 264330693878  
Option 4 ID : 264330693877  
Status : Answered  
Chosen Option : 1

**Q.33** National Food Security Mission was launched in India in the year 2007-08 to increase the production of rice, wheat and \_\_\_\_\_.

- Ans  1. saffron  
 2. millet  
 3. pulses  
 4. fruits

Question ID : 264330183060  
Option 1 ID : 264330717975  
Option 2 ID : 264330717974  
Option 3 ID : 264330717972  
Option 4 ID : 264330717973  
Status : Answered  
Chosen Option : 2

**Q.34** The autobiography 'Long Walk to Freedom' is written by:

- Ans  1. Nelson Mandela  
 2. BR Ambedkar  
 3. Rabindranath Tagore  
 4. MK Gandhi

Question ID : 26433072941  
Option 1 ID : 264330285958  
Option 2 ID : 264330285956  
Option 3 ID : 264330285959  
Option 4 ID : 264330285957  
Status : Answered  
Chosen Option : 1

**Q.35** Which of the following options had figured in the royal emblem of the Chola dynasty?

- Ans  1. Tiger  
 2. Elephant  
 3. Fish  
 4. Horse

Question ID : 264330118981  
Option 1 ID : 264330466580  
Option 2 ID : 264330466581  
Option 3 ID : 264330466579  
Option 4 ID : 264330466582  
Status : Answered  
Chosen Option : 3

**Q.36** Which Indian state has got the highest literacy rate as per National Survey of India 2022?

- Ans
- 1. Goa
  - 2. Maharashtra
  - 3. Kerala
  - 4. Karnataka

Question ID : 264330177909  
Option 1 ID : 264330697724  
Option 2 ID : 264330697725  
Option 3 ID : 264330697723  
Option 4 ID : 264330697726  
Status : Answered  
Chosen Option : 3

**Q.37** According to Sangam texts, the term uzhavar means:

- Ans
- 1. slaves
  - 2. large landowners
  - 3. teachers
  - 4. ordinary ploughmen

Question ID : 264330119473  
Option 1 ID : 264330468177  
Option 2 ID : 264330468178  
Option 3 ID : 264330468175  
Option 4 ID : 264330468176  
Status : Not Answered  
Chosen Option : --

**Q.38** The famous festival known as 'Paro Tschechu' is associated with which country?

- Ans
- 1. Japan
  - 2. Burma
  - 3. Bhutan
  - 4. Thailand

Question ID : 264330182980  
Option 1 ID : 264330717652  
Option 2 ID : 264330717653  
Option 3 ID : 264330717654  
Option 4 ID : 264330717655  
Status : Not Answered  
Chosen Option : --

**Q.39** Which Article of the Constitution of India empowers a High Court to issue writs?

- Ans
- 1. Article 230
  - 2. Article 220
  - 3. Article 223
  - 4. Article 226

Question ID : 264330177763  
Option 1 ID : 264330697162  
Option 2 ID : 264330697159  
Option 3 ID : 264330697160  
Option 4 ID : 264330697161  
Status : Answered  
Chosen Option : 4

**Q.40** Under which Constitutional Amendment Act, was the term "Secular" added in the Preamble?

- Ans
- 1. 43rd Constitutional Amendment Act
  - 2. 44th Constitutional Amendment Act
  - 3. 41st Constitutional Amendment Act
  - 4. 42nd Constitutional Amendment Act

Question ID : 264330114481  
Option 1 ID : 264330450011  
Option 2 ID : 264330450012  
Option 3 ID : 264330450009  
Option 4 ID : 264330450010  
Status : Answered  
Chosen Option : 4

**Q.41** Khandesh was incorporated into the Mughal empire in which of the following years?

- Ans
- 1. 1601
  - 2. 1603
  - 3. 1598
  - 4. 1600

Question ID : 264330171693  
Option 1 ID : 264330673377  
Option 2 ID : 264330673378  
Option 3 ID : 264330673375  
Option 4 ID : 264330673376  
Status : Answered  
Chosen Option : 2

**Q.42** Which place in the north-eastern part of the northern Indian state of Himachal Pradesh is popularly known as the Cold Desert Mountains?

- Ans
- 1. Sangti Valley
  - 2. Parvati Valley
  - 3. Aalo Valley
  - 4. Spiti Valley

Question ID : 264330131014  
Option 1 ID : 264330513168  
Option 2 ID : 264330513169  
Option 3 ID : 264330513167  
Option 4 ID : 264330513170  
Status : Not Answered  
Chosen Option : --

**Q.43** Select the personality who received the Sangeet Natak Akademi 2021 award for his/her contribution in Mohiniyattam.

- Ans
- 1. Thokchom Ibemubi Devi
  - 2. Bhuvan Kumar
  - 3. Neena Prasad
  - 4. Bijay Kumar Jena

Question ID : 264330130528  
Option 1 ID : 264330511225  
Option 2 ID : 264330511223  
Option 3 ID : 264330511224  
Option 4 ID : 264330511226  
Status : Answered  
Chosen Option : 3

Q.44 From which of the following countries did India adopt the 'amendment procedure in the constitution'?

- Ans  1. South Africa  
 2. Ireland  
 3. The US  
 4. France

Question ID : 264330133044  
Option 1 ID : 264330521230  
Option 2 ID : 264330521227  
Option 3 ID : 264330521228  
Option 4 ID : 264330521229  
Status : Answered  
Chosen Option : 1

Q.45 The Dronacharya award is given to \_\_\_\_\_.

- Ans  1. best coach  
 2. best player  
 3. best teacher  
 4. best soldier

Question ID : 264330110389  
Option 1 ID : 264330433834  
Option 2 ID : 264330433833  
Option 3 ID : 264330433835  
Option 4 ID : 264330433836  
Status : Answered  
Chosen Option : 1

Q.46 Pandit Hariprasad Chaurasia is a world-renowned exponent of the \_\_\_\_\_.

- Ans  1. Sarod  
 2. Sitar  
 3. Bansuri  
 4. tabla

Question ID : 264330116420  
Option 1 ID : 264330457767  
Option 2 ID : 264330457768  
Option 3 ID : 264330457765  
Option 4 ID : 264330457766  
Status : Answered  
Chosen Option : 4

Q.47 In the Lok Sabha, \_\_\_\_\_ seats are reserved for the members from Scheduled Castes.

- Ans  1. 80  
 2. 82  
 3. 73  
 4. 84

Question ID : 264330139438  
Option 1 ID : 264330546185  
Option 2 ID : 264330546184  
Option 3 ID : 264330546183  
Option 4 ID : 264330546186  
Status : Not Answered  
Chosen Option : --

Q.48 Below are some statements about the Ozone layer.

Statement 1. It is found in the stratosphere.

Statement 2. Chlorofluorocarbons (CFCs) are responsible for Ozone hole.

Statement 3. Ozone layer is found around 15–30 km above the earth's surface.

Statement 4. Ozone layer is expected not to recover anymore now.

Which of these statements are correct?

Ans  1. Only statements 2, 3 and 4

2. Only statements 3 and 4

3. Only statements 1, 2 and 3

4. Only statements 1 and 2

Question ID : 264330131802

Option 1 ID : 264330516310

Option 2 ID : 264330516309

Option 3 ID : 264330516307

Option 4 ID : 264330516308

Status : Answered

Chosen Option : 3

Q.49 The Sun Temple of Konark is located on the shore of the \_\_\_\_\_.

Ans  1. Bay of Bengal

2. Indian Ocean

3. Red Sea

4. Arabian Sea

Question ID : 264330109649

Option 1 ID : 264330430874

Option 2 ID : 264330430873

Option 3 ID : 264330430876

Option 4 ID : 264330430875

Status : Answered

Chosen Option : 1

Q.50 Hojagiri is a famous dance form of which of these states?

Ans  1. Punjab

2. Jharkhand

3. Assam

4. Tripura

Question ID : 264330109286

Option 1 ID : 264330429421

Option 2 ID : 264330429424

Option 3 ID : 264330429422

Option 4 ID : 264330429423

Status : Not Answered

Chosen Option : --

Section : Reasoning

Q.1 Two statements are given followed by two conclusions numbered I and II. Assuming the statements to be true, even if they seem to be at variance from commonly known facts, decide which of the conclusions logically follow(s) from the statements.

Statements:

All Shirts are Cottons.

Some Shirts are Nets.

Conclusions:

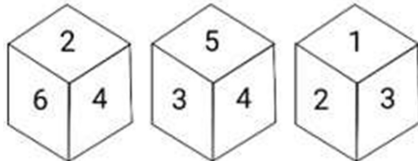
I. All Nets are Shirts.

II. Some Nets are Cottons.

- Ans  1. Both conclusions I and II follow.
2. Only conclusion II follows.
3. Neither conclusion I nor II follows.
4. Only conclusion I follows.

Question ID : 26433076595  
Option 1 ID : 264330300446  
Option 2 ID : 264330300445  
Option 3 ID : 264330300447  
Option 4 ID : 264330300444  
Status : Answered  
Chosen Option : 2

Q.2 Three different positions of the same dice are shown. Find the number on the face opposite to the face showing '3'.



- Ans  1. 2
2. 5
3. 1
4. 6

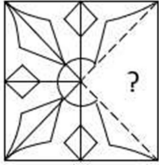
Question ID : 264330112035  
Option 1 ID : 264330440225  
Option 2 ID : 264330440228  
Option 3 ID : 264330440226  
Option 4 ID : 264330440227  
Status : Answered  
Chosen Option : 4

Q.3 Which of the following letter clusters will replace the question mark (?) in the given series to make it logically complete?  
JGI, HJG, FME, DPC, ?

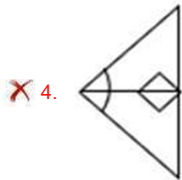
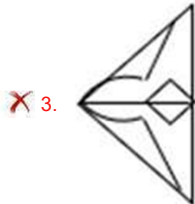
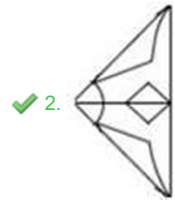
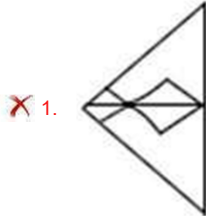
- Ans  1. BSA
2. BSB
3. BRB
4. ASA

Question ID : 264330102226  
Option 1 ID : 264330401371  
Option 2 ID : 264330401370  
Option 3 ID : 264330401369  
Option 4 ID : 264330401372  
Status : Answered  
Chosen Option : 1

Q.4 Select the option figure that will replace the question mark (?) in the figure given below to complete the pattern.



Ans



Question ID : 26433080836

Option 1 ID : 264330317280

Option 2 ID : 264330317279

Option 3 ID : 264330317277

Option 4 ID : 264330317278

Status : Answered

Chosen Option : 2

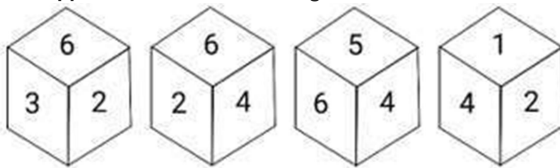
Q.5 Select the number from among the given options that can replace the question mark (?) in the following series.

1, 2, 5, 26, 677, ?

- Ans
- 1. 3255
  - 2. 45245
  - 3. 24563
  - 4. 458330

Question ID : 264330109759  
Option 1 ID : 264330431316  
Option 2 ID : 264330431313  
Option 3 ID : 264330431315  
Option 4 ID : 264330431314  
Status : Answered  
Chosen Option : 4

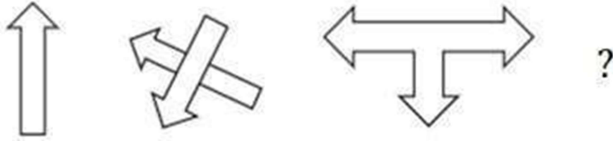
Q.6 Four different positions of the same dice are shown below. Which number is on the face opposite to the face showing '6'?



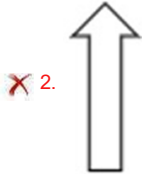
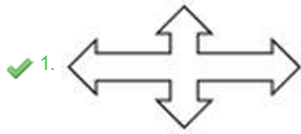
- Ans
- 1. 1
  - 2. 3
  - 3. 2
  - 4. 4

Question ID : 264330112039  
Option 1 ID : 264330440241  
Option 2 ID : 264330440243  
Option 3 ID : 264330440242  
Option 4 ID : 264330440244  
Status : Answered  
Chosen Option : 1

Q.7 Select the figure that will replace the question mark (?) in the following figure series.



Ans

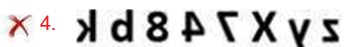
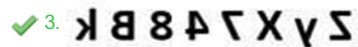
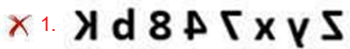


Question ID : 264330112033  
 Option 1 ID : 264330440218  
 Option 2 ID : 264330440217  
 Option 3 ID : 264330440220  
 Option 4 ID : 264330440219  
 Status : Answered  
 Chosen Option : 1

Q.8 Select the correct mirror image of the given figure when the mirror is placed at MN as shown below.

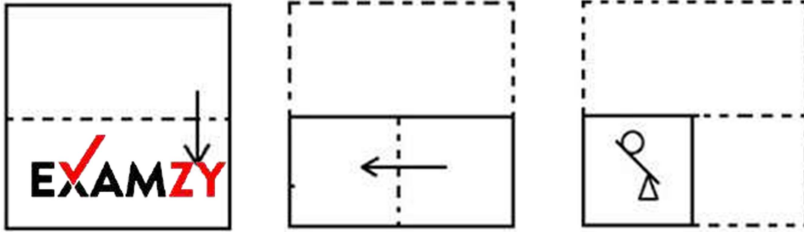


Ans

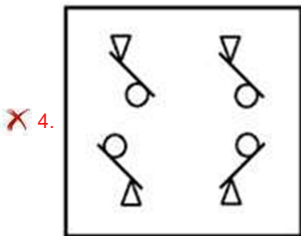
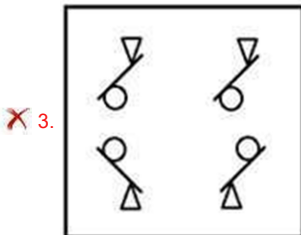

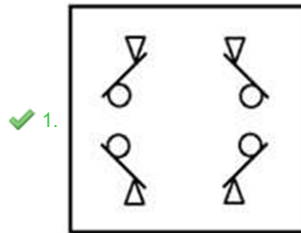


Question ID : 264330117300  
 Option 1 ID : 264330461257  
 Option 2 ID : 264330461260  
 Option 3 ID : 264330461259  
 Option 4 ID : 264330461258  
 Status : Answered  
 Chosen Option : 3

Q.10 The sequence of folding a piece of paper and the manner in which the folded paper has been cut is shown below. Choose a figure which would most closely resemble the unfolded form of the paper.



Ans



Question ID : 264330112315

Option 1 ID : 264330441348

Option 2 ID : 264330441345

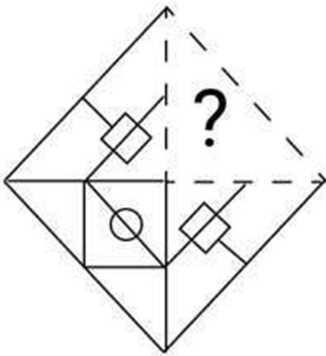
Option 3 ID : 264330441347

Option 4 ID : 264330441346

Status : Answered

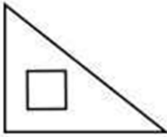
Chosen Option : 1

Q.11 Select the figure from the options that can replace the question mark (?) and complete the given pattern.

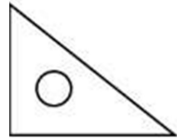


Ans

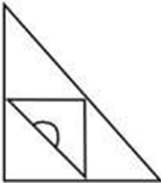
✗ 1.



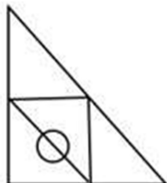
✗ 2.



✗ 3.



✓ 4.



Question ID : 264330106463

Option 1 ID : 264330418154

Option 2 ID : 264330418153

Option 3 ID : 264330418156

Option 4 ID : 264330418155

Status : Answered

Chosen Option : 4

Q.12 Six students are sitting around a circular table facing the centre. Red is sitting fourth to the right of White. Blue is sitting second to the right of Gray. Black is sitting third to the right of Pink. White is the immediate neighbour of Gray and Black.. Who is the immediate neighbour of Red and Pink?

Ans ✓ 1. Blue

✗ 2. Black

✗ 3. Gray

✗ 4. White

Question ID : 26433081654

Option 1 ID : 264330320449

Option 2 ID : 264330320452

Option 3 ID : 264330320450

Option 4 ID : 264330320451

Status : Answered

Chosen Option : 1

Q.13

Which figure from the given options would replace the question mark (?) if the following figure series were to be continued?

B	♡	∩	○	B	♡	○	♡	B	∩	○	♡	?
○	V	8	V	8	∩	∩	V	8	V	8	B	
∩	=	X	∩	X	=	X	=	∩	X	∩	=	

Ans

✗ 1.

○	∩	♡
X	V	8
∩	=	B

✗ 2.

V	∩	○
8	B	♡
X	=	∩

✗ 3.

∩	♡	○
8	B	=
V	X	∩

✓ 4.

∩	♡	○
X	V	8
∩	=	B

Question ID : 26433044934

Option 1 ID : 264330176171

Option 2 ID : 264330176173

Option 3 ID : 264330176174

Option 4 ID : 264330176172

Status : Answered

Chosen Option : 4

Q.14 Which figure should replace the question mark (?) if the series were to be continued?

A	U	9	9	A	U	S	9	A	A	S	9	
	S		=			□				U		?
	=		S			U				□		

Ans

1.

9	□	A
	S	
	U	

2.

□	A	S
	4	
	9	

3.

S	9	□
	4	
	A	

4.

□	A	S
	U	
	9	

Question ID : 264330130796

Option 1 ID : 264330512298

Option 2 ID : 264330512296

Option 3 ID : 264330512297

Option 4 ID : 264330512295

Status : Answered

Chosen Option : 4

Q.15 Select the word-pair that best represents a similar relationship to the one expressed in the pair of words given below.

(The words must be considered as meaningful English words and must not be related to each other based on the number of letters/number of consonants/vowels in the word.)

Exit : Leave

Ans  1. Fate : Fete

2. Select : Choose

3. Start : End

4. Moat : Mote

Question ID : 26433053231

Option 1 ID : 264330208229

Option 2 ID : 264330208228

Option 3 ID : 264330208226

Option 4 ID : 264330208227

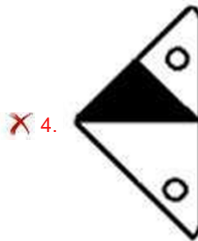
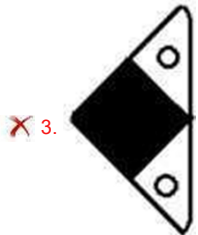
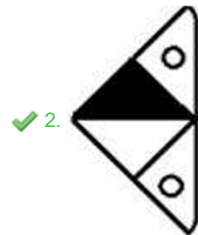
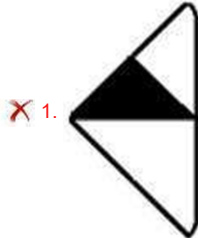
Status : Answered

Chosen Option : 2

Q.17 Select the option figure that will replace the question mark (?) in the figure given below to complete the pattern.



Ans



Question ID : 26433089462

Option 1 ID : 264330351351

Option 2 ID : 264330351350

Option 3 ID : 264330351352

Option 4 ID : 264330351349

Status : Answered

Chosen Option : 2

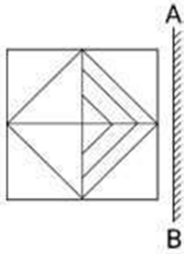
Q.18 Select the set in which the numbers are related in the same way as are the numbers of the following sets.

(NOTE: Operations should be performed on the whole numbers, without breaking down the numbers into its constituent digits. E.g. 13 – Operations on 13 such as adding/deleting/multiplying etc. to 13 can be performed. Breaking down 13 into 1 and 3 and then performing mathematical operations on 1 and 3 is not allowed)  
(4, 42, 5), (3, 45, 7)

- Ans
- 1. (6, 49, 3)
  - 2. (6, 32, 2)
  - 3. (7, 43, 4)
  - 4. (7, 42, 5)

Question ID : 26433097192  
 Option 1 ID : 264330381467  
 Option 2 ID : 264330381465  
 Option 3 ID : 264330381466  
 Option 4 ID : 264330381468  
 Status : Answered  
 Chosen Option : 4

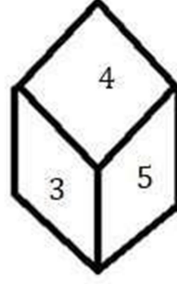
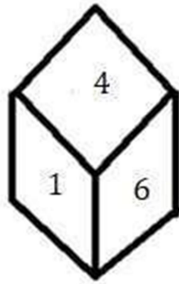
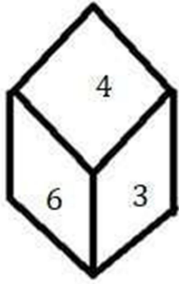
Q.19 Select the correct mirror image of the given figure when the mirror is placed at 'AB' as shown.



- Ans
- 1.
  - 2.
  - 3.
  - 4.

Question ID : 264330114260  
 Option 1 ID : 264330449126  
 Option 2 ID : 264330449125  
 Option 3 ID : 264330449128  
 Option 4 ID : 264330449127  
 Status : Answered  
 Chosen Option : 2

Q.20 Three different positions of the same dice are shown. Find the number on the face opposite the face having '2'.



- Ans
- 1. 1
  - 2. 4
  - 3. 3
  - 4. 6

Question ID : 264330113651  
Option 1 ID : 264330446689  
Option 2 ID : 264330446692  
Option 3 ID : 264330446691  
Option 4 ID : 264330446690  
Status : Answered  
Chosen Option : 2

Q.21 Select the option that is related to the third term in the same way as the second term is related to the first term and the sixth term is related to the fifth term.  
 $400 : 200 :: 248 : ? :: 256 : 128$

- Ans
- 1. 200
  - 2. 124
  - 3. 148
  - 4. 114

Question ID : 264330101043  
Option 1 ID : 264330396720  
Option 2 ID : 264330396717  
Option 3 ID : 264330396719  
Option 4 ID : 264330396718  
Status : Answered  
Chosen Option : 2

Q.22 Which two signs should be interchanged to make the following equation correct?

$$29 - 23 + 42 \times 21 \div 2 = 10$$

- Ans
- 1. - and +
  - 2. + and +
  - 3. - and ×
  - 4. ÷ and ×

Question ID : 264330101076  
Option 1 ID : 264330396849  
Option 2 ID : 264330396852  
Option 3 ID : 264330396851  
Option 4 ID : 264330396850  
Status : Answered  
Chosen Option : 4

Q.23 In a certain code language, 'BAE' is written as '512' and 'WIN' is written as '14923'.  
How will 'HER' be written in that language?

- Ans
- 1. 1826
  - 2. 1844
  - 3. 1838
  - 4. 1858

Question ID : 26433089414  
Option 1 ID : 264330351157  
Option 2 ID : 264330351159  
Option 3 ID : 264330351158  
Option 4 ID : 264330351160  
Status : Answered  
Chosen Option : 4

Q.24 Select the correct combination of mathematical signs that can sequentially replace the  
\* signs and balance the given equation.

$$54*16*3*6*2*9$$

- Ans
- 1. +, ×, -, ÷, =
  - 2. ÷, -, ×, +, =
  - 3. -, ×, +, ÷, =
  - 4. +, -, ×, ÷, =

Question ID : 26433079086  
Option 1 ID : 264330310348  
Option 2 ID : 264330310349  
Option 3 ID : 264330310350  
Option 4 ID : 264330310351  
Status : Answered  
Chosen Option : 3